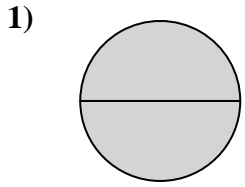


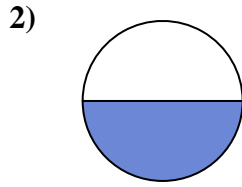


Determine which letter best describes the shaded portion.

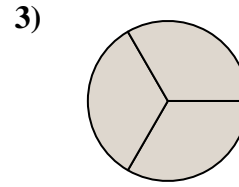
Answers



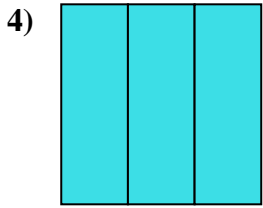
- A. two-halves
- B. one-fourth
- C. four-fourths



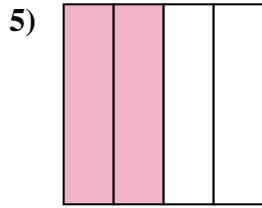
- A. two-halves
- B. one-half
- C. two-fourths



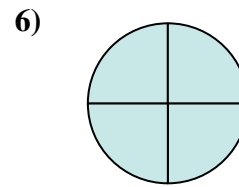
- A. two-fourths
- B. three-thirds
- C. one-half



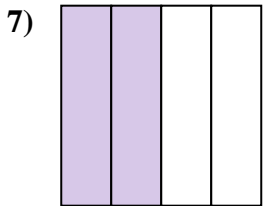
- A. three-thirds
- B. four-quarters
- C. one-half



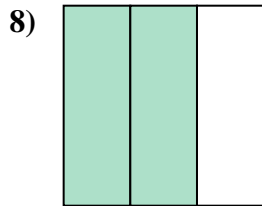
- A. two-fourths
- B. one-quarter
- C. four-quarters



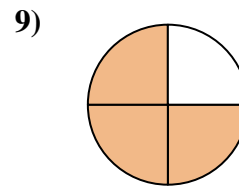
- A. one-fourth
- B. two-halves
- C. four-quarters



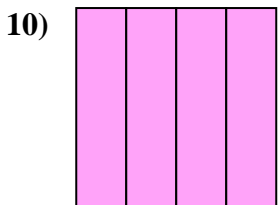
- A. four-fourths
- B. two-halves
- C. two-quarters



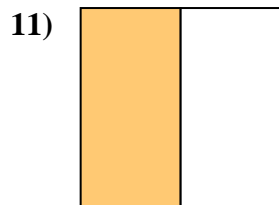
- A. three-quarters
- B. two-fourths
- C. two-thirds



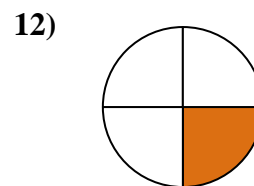
- A. three-fourths
- B. two-halves
- C. one-quarter



- A. four-fourths
- B. two-fourths
- C. one-fourth



- A. two-halves
- B. one-half
- C. three-fourths

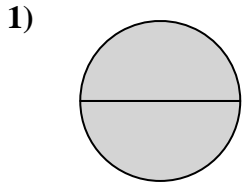


- A. two-halves
- B. one-half
- C. one-fourth

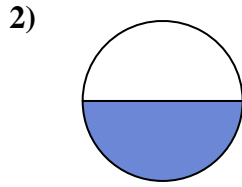
1. _____
2. _____
3. _____
4. _____
5. _____
6. _____
7. _____
8. _____
9. _____
10. _____
11. _____
12. _____



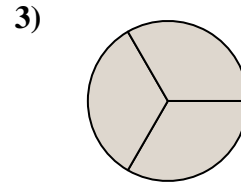
Determine which letter best describes the shaded portion.



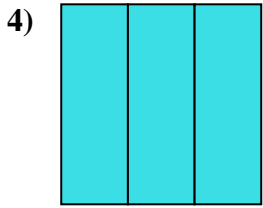
- A. two-halves
- B. one-fourth
- C. four-fourths



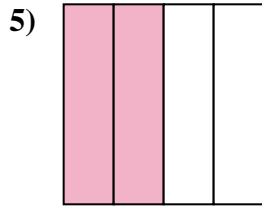
- A. two-halves
- B. one-half
- C. two-fourths



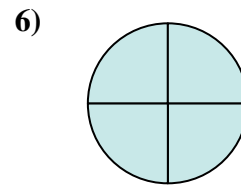
- A. two-fourths
- B. three-thirds
- C. one-half



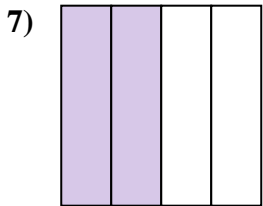
- A. three-thirds
- B. four-quarters
- C. one-half



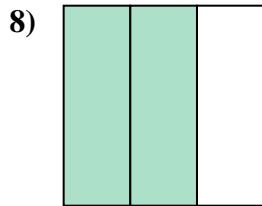
- A. two-fourths
- B. one-quarter
- C. four-quarters



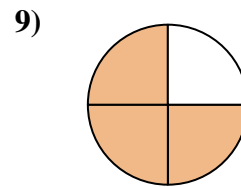
- A. one-fourth
- B. two-halves
- C. four-quarters



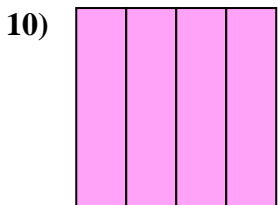
- A. four-fourths
- B. two-halves
- C. two-quarters



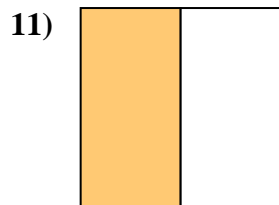
- A. three-quarters
- B. two-fourths
- C. two-thirds



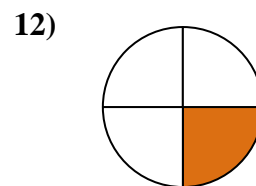
- A. three-fourths
- B. two-halves
- C. one-quarter



- A. four-fourths
- B. two-fourths
- C. one-fourth



- A. two-halves
- B. one-half
- C. three-fourths



- A. two-halves
- B. one-half
- C. one-fourth

Answers

- 1. **A**
- 2. **B**
- 3. **B**
- 4. **A**
- 5. **A**
- 6. **C**
- 7. **C**
- 8. **C**
- 9. **A**
- 10. **A**
- 11. **B**
- 12. **C**