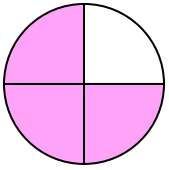





Determine which letter best describes the shaded portion.

1)



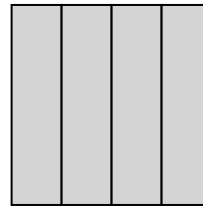
- A. one-fourth
- B. four-fourths
- C. three-fourths

2)



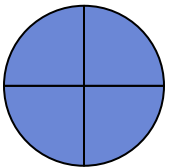
- A. one-quarter
- B. two-fourths
- C. one-half

3)



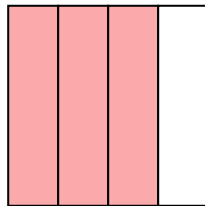
- A. three-fourths
- B. four-fourths
- C. two-halves

4)




- A. two-halves
- B. four-fourths
- C. three-fourths

5)




- A. two-quarters
- B. three-fourths
- C. two-halves

6)



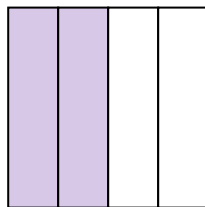
- A. two-halves
- B. two-quarters
- C. four-quarters

7)



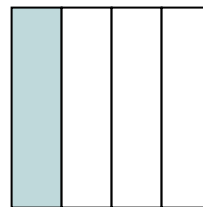
- A. three-quarters
- B. one-half
- C. two-halves

8)



- A. two-fourths
- B. three-fourths
- C. one-fourth

9)



- A. one-fourth
- B. three-fourths
- C. two-quarters

Answers

1. _____

2. _____

3. _____

4. _____

5. _____

6. _____

7. _____

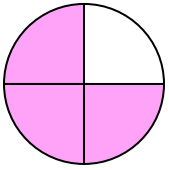
8. _____

9. _____




Determine which letter best describes the shaded portion.

1)



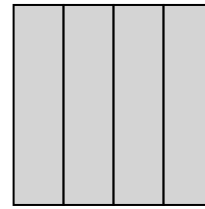
- A. one-fourth
- B. four-fourths
- C. three-fourths

2)



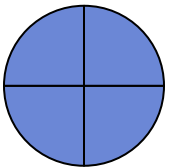
- A. one-quarter
- B. two-fourths
- C. one-half

3)



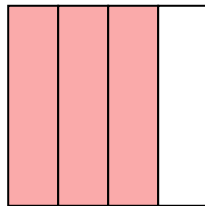
- A. three-fourths
- B. four-fourths
- C. two-halves

4)




- A. two-halves
- B. four-fourths
- C. three-fourths

5)




- A. two-quarters
- B. three-fourths
- C. two-halves

6)



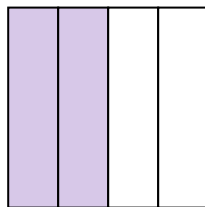
- A. two-halves
- B. two-quarters
- C. four-quarters

7)



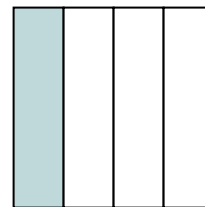
- A. three-quarters
- B. one-half
- C. two-halves

8)



- A. two-fourths
- B. three-fourths
- C. one-fourth

9)



- A. one-fourth
- B. three-fourths
- C. two-quarters

Answers

1. **C**

2. **C**

3. **B**

4. **B**

5. **B**

6. **A**

7. **C**

8. **A**

9. **A**