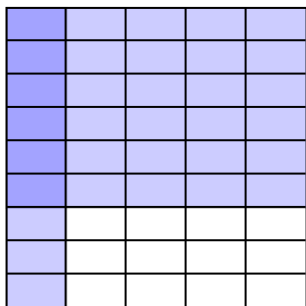


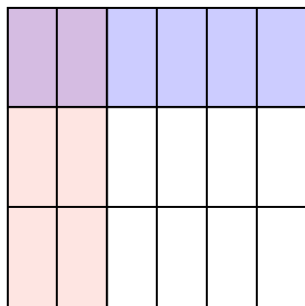


Use the box provided to show a visual example of how to multiply two fractions.

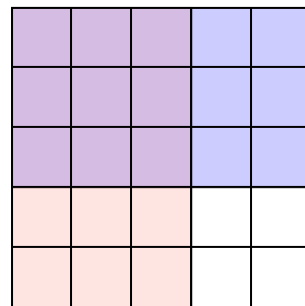
Ex) $\frac{1}{5} \times \frac{6}{9} =$




1) $\frac{2}{6} \times \frac{1}{3} =$



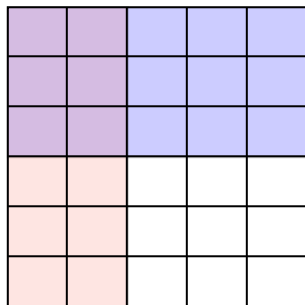
2) $\frac{3}{5} \times \frac{3}{5} =$



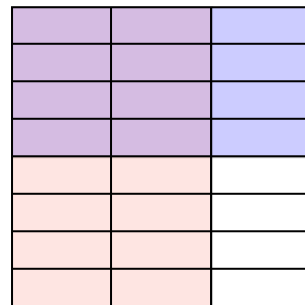
3) $\frac{1}{2} \times \frac{2}{3} =$



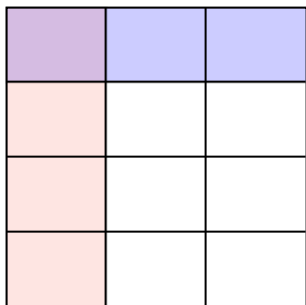
4) $\frac{2}{5} \times \frac{3}{6} =$



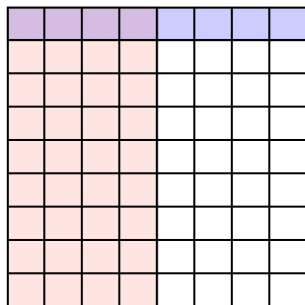
5) $\frac{2}{3} \times \frac{4}{8} =$




6) $\frac{1}{3} \times \frac{1}{4} =$



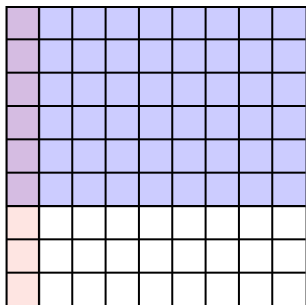
7) $\frac{4}{8} \times \frac{1}{9} =$



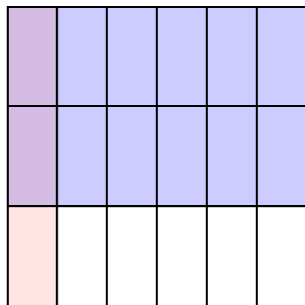
8) $\frac{1}{2} \times \frac{6}{8} =$



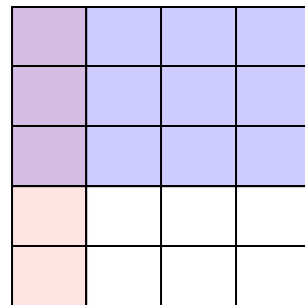
9) $\frac{1}{9} \times \frac{6}{9} =$



10) $\frac{1}{6} \times \frac{2}{3} =$



11) $\frac{1}{4} \times \frac{3}{5} =$



Answers

Ex. $\frac{6}{45}$

1. $\frac{2}{18}$

2. $\frac{9}{25}$

3. $\frac{2}{6}$

4. $\frac{6}{30}$

5. $\frac{8}{24}$

6. $\frac{1}{12}$

7. $\frac{4}{72}$

8. $\frac{6}{16}$

9. $\frac{6}{81}$

10. $\frac{2}{18}$

11. $\frac{3}{20}$