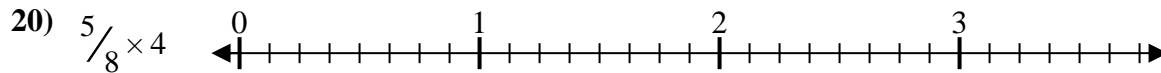
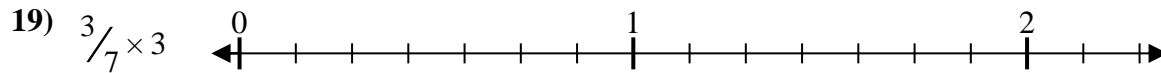
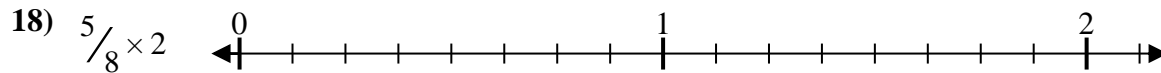
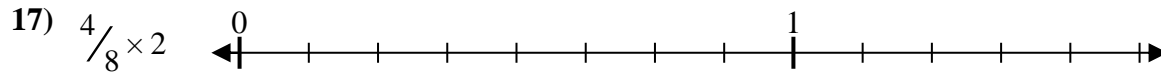
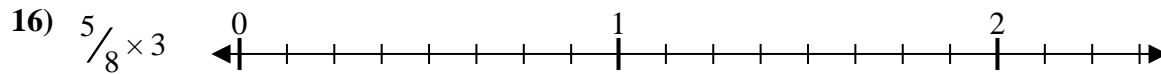
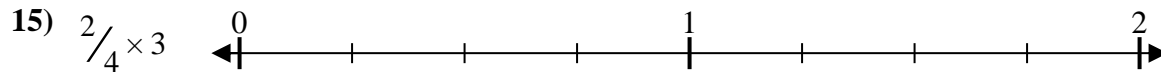
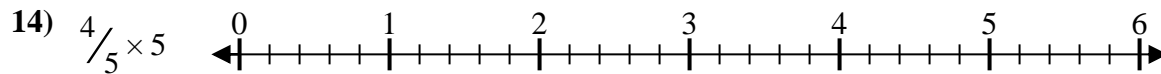
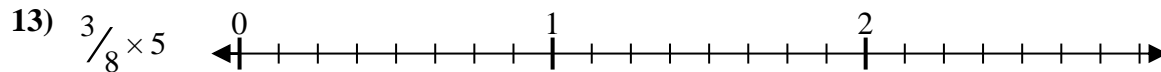
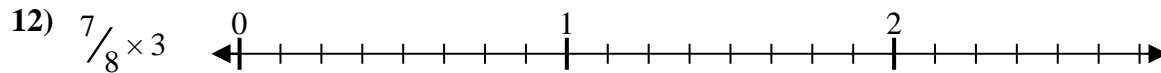
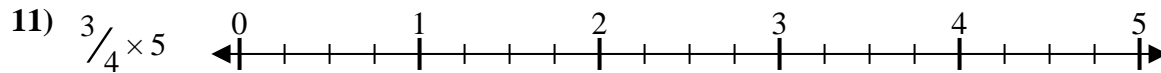
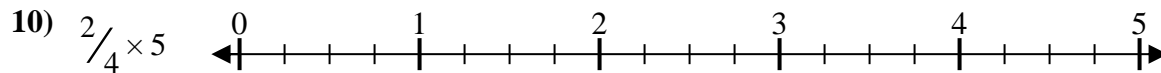
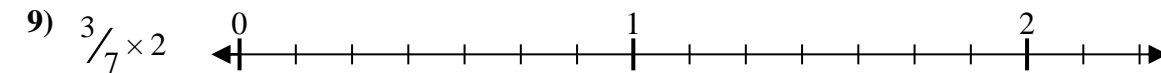
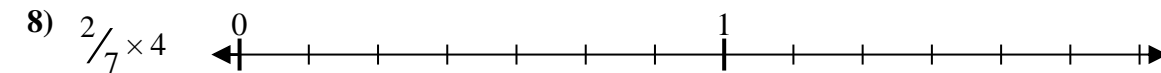
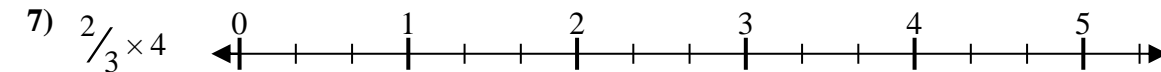
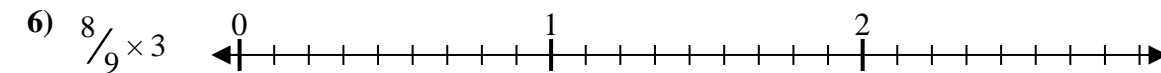
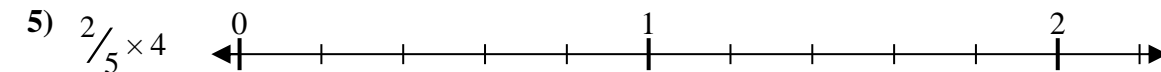
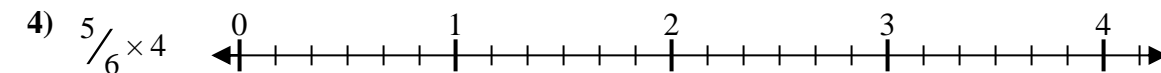
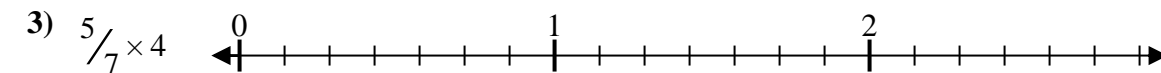
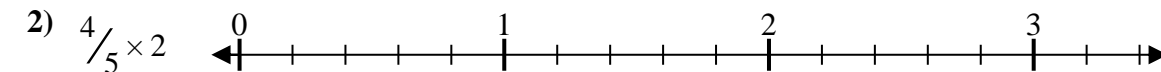
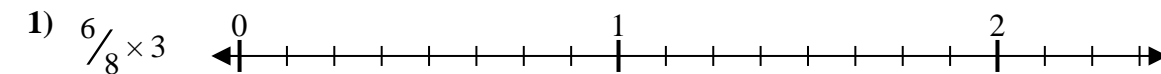




Solve each problem.

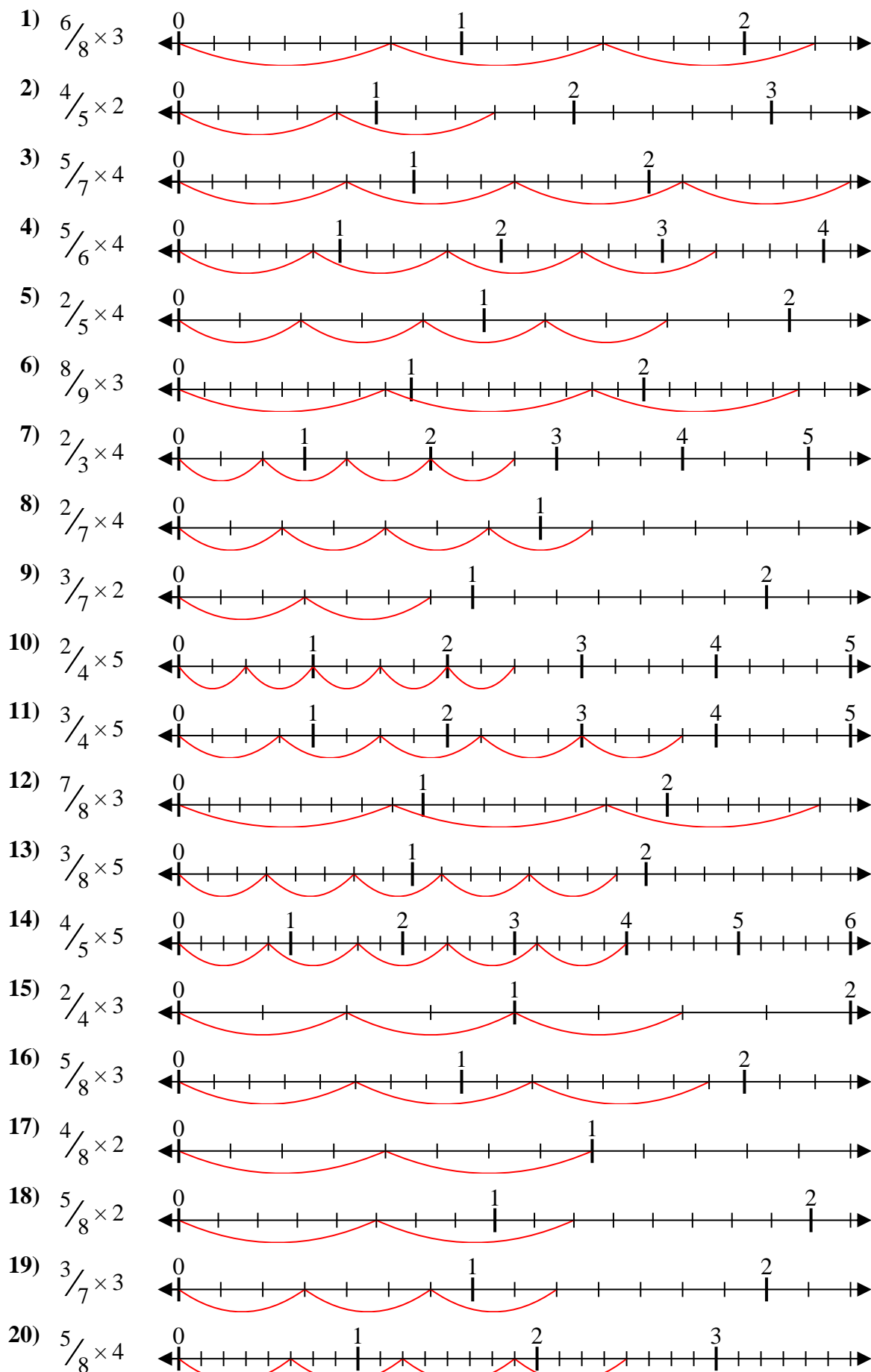
Answers



1. _____
2. _____
3. _____
4. _____
5. _____
6. _____
7. _____
8. _____
9. _____
10. _____
11. _____
12. _____
13. _____
14. _____
15. _____
16. _____
17. _____
18. _____
19. _____
20. _____



Solve each problem.



Answers

1. $\frac{18}{8} = 2\frac{1}{4}$
2. $\frac{8}{5} = 1\frac{3}{5}$
3. $\frac{20}{7} = 2\frac{6}{7}$
4. $\frac{20}{6} = 3\frac{1}{3}$
5. $\frac{8}{5} = 1\frac{3}{5}$
6. $\frac{24}{9} = 2\frac{2}{3}$
7. $\frac{8}{3} = 2\frac{2}{3}$
8. $\frac{8}{7} = 1\frac{1}{7}$
9. $\frac{6}{7} = \frac{6}{7}$
10. $\frac{10}{4} = 2\frac{1}{2}$
11. $\frac{15}{4} = 3\frac{3}{4}$
12. $\frac{21}{8} = 2\frac{5}{8}$
13. $\frac{15}{8} = 1\frac{7}{8}$
14. $\frac{20}{5} = 4$
15. $\frac{6}{4} = 1\frac{1}{2}$
16. $\frac{15}{8} = 1\frac{7}{8}$
17. $\frac{8}{8} = 1$
18. $\frac{10}{8} = 1\frac{1}{4}$
19. $\frac{9}{7} = 1\frac{2}{7}$
20. $\frac{20}{8} = 2\frac{1}{2}$