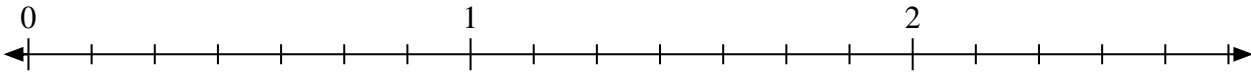





Solve each problem.

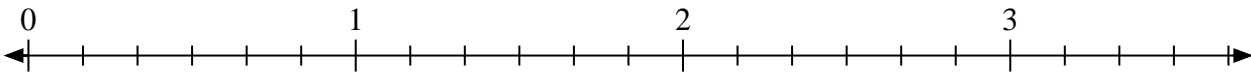
- 1) Mark the location of
- $\frac{14}{7}$



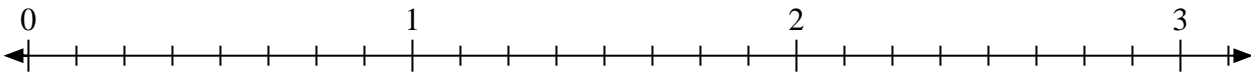
- 2) Mark the location of
- $\frac{5}{3}$



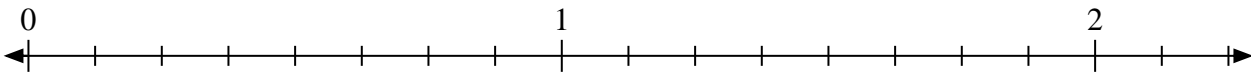
- 3) Mark the location of
- $\frac{12}{6}$



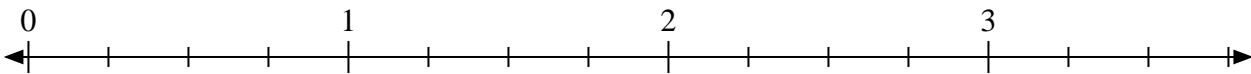
- 4) Mark the location of
- $\frac{17}{8}$



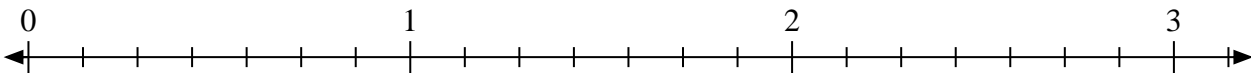
- 5) Mark the location of
- $\frac{13}{8}$




- 6) Mark the location of
- $\frac{9}{4}$



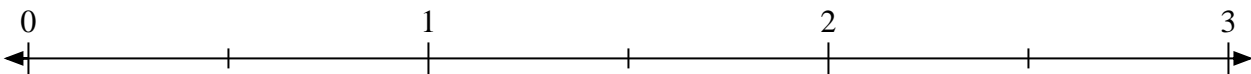
- 7) Mark the location of
- $\frac{18}{7}$



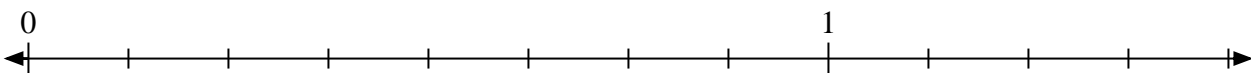
- 8) Mark the location of
- $\frac{6}{3}$



- 9) Mark the location of
- $\frac{3}{2}$



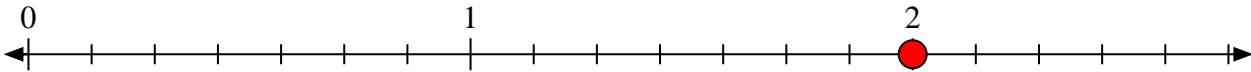
- 10) Mark the location of
- $\frac{10}{8}$



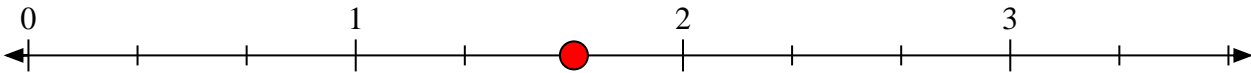


Solve each problem.

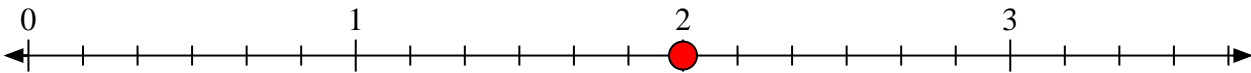
- 1) Mark the location of
- $\frac{14}{7}$



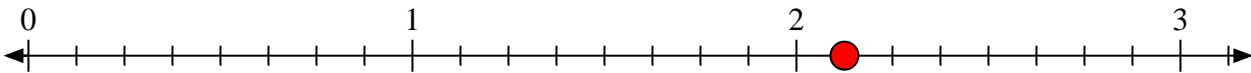
- 2) Mark the location of
- $\frac{5}{3}$



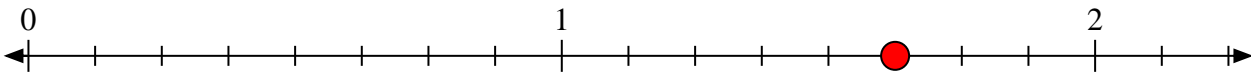
- 3) Mark the location of
- $\frac{12}{6}$



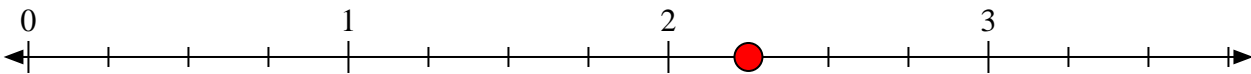
- 4) Mark the location of
- $\frac{17}{8}$



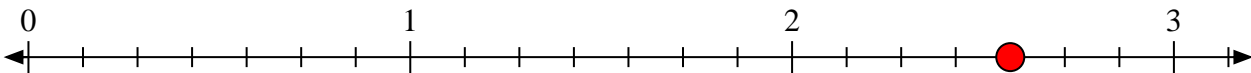
- 5) Mark the location of
- $\frac{13}{8}$




- 6) Mark the location of
- $\frac{9}{4}$



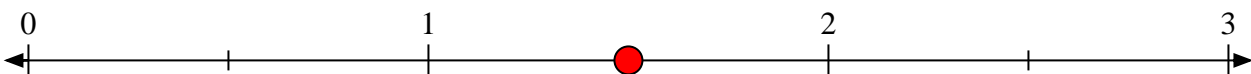
- 7) Mark the location of
- $\frac{18}{7}$



- 8) Mark the location of
- $\frac{6}{3}$



- 9) Mark the location of
- $\frac{3}{2}$



- 10) Mark the location of
- $\frac{10}{8}$

