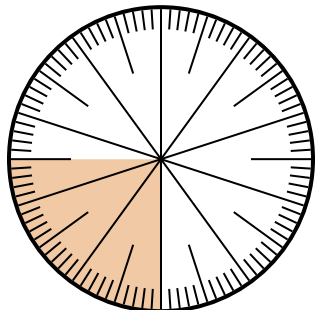




Solve each problem.

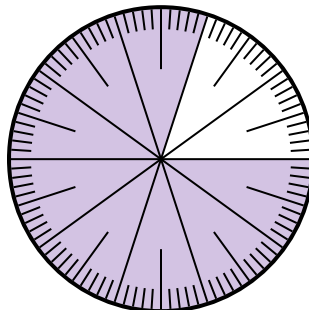
**Answers**

- 1) Which choice represents the shaded portion of the number wheel?



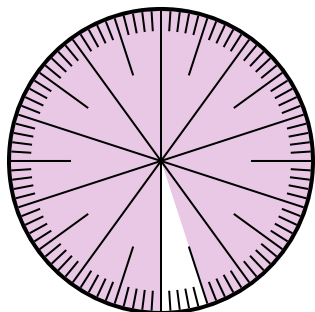
- A.  $\frac{25}{75}$       B.  $\frac{0.25}{100}$   
 C.  $\frac{25}{100}$       D. 2.50

- 2) Which choice represents the shaded portion of the number wheel?



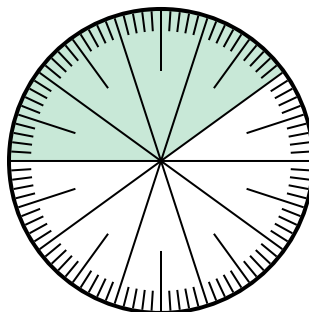
- A.  $\frac{8}{100}$       B. 0.080  
 C.  $\frac{0.8}{100}$       D.  $\frac{80}{100}$

- 3) Which choice represents the un-shaded portion of the number wheel?



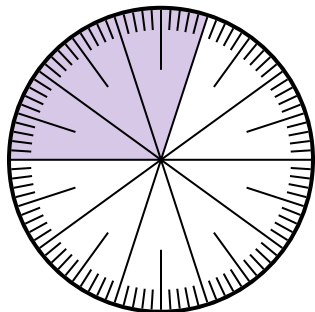
- A.  $\frac{5}{100}$       B. 0.5  
 C.  $\frac{95}{5}$       D.  $\frac{5}{95}$

- 4) Which choice represents the un-shaded portion of the number wheel?



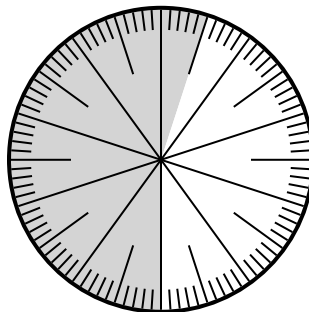
- A.  $\frac{0.6}{100}$       B. 0.60  
 C.  $\frac{40}{60}$       D. 6.00

- 5) Which choice represents the shaded portion of the number wheel?



- A. 3      B. 0.30  
 C. 30      D.  $\frac{30}{70}$

- 6) Which choice represents the shaded portion of the number wheel?



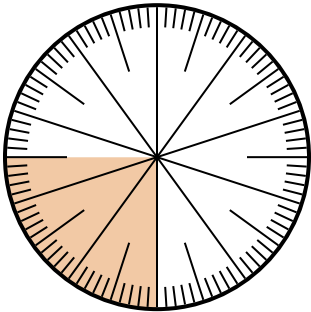
- A.  $\frac{55}{100}$       B. 45  
 C. 5.5      D. 45.0

1. \_\_\_\_\_  
 2. \_\_\_\_\_  
 3. \_\_\_\_\_  
 4. \_\_\_\_\_  
 5. \_\_\_\_\_  
 6. \_\_\_\_\_



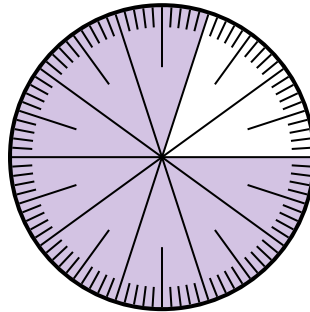
Solve each problem.

- 1) Which choice represents the shaded portion of the number wheel?



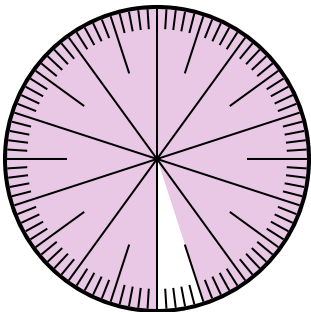
- A.  $\frac{25}{75}$       B.  $\frac{0.25}{100}$   
 C.  $\frac{25}{100}$       D. 2.50

- 2) Which choice represents the shaded portion of the number wheel?



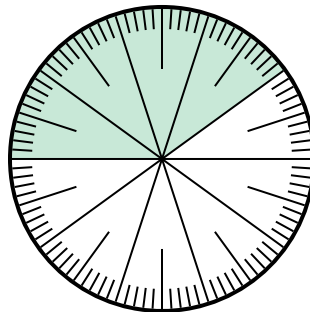
- A.  $\frac{8}{100}$       B. 0.080  
 C.  $\frac{0.8}{100}$       D.  $\frac{80}{100}$

- 3) Which choice represents the un-shaded portion of the number wheel?



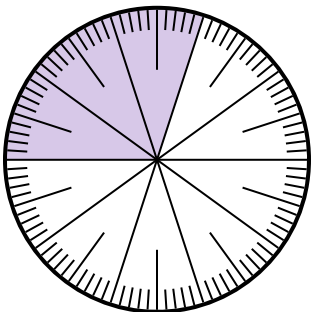
- A.  $\frac{5}{100}$       B. 0.5  
 C.  $\frac{95}{5}$       D.  $\frac{5}{95}$

- 4) Which choice represents the un-shaded portion of the number wheel?



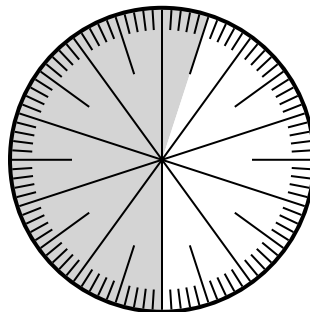
- A.  $\frac{0.6}{100}$       B. 0.60  
 C.  $\frac{40}{60}$       D. 6.00

- 5) Which choice represents the shaded portion of the number wheel?



- A. 3      B. 0.30  
 C. 30      D.  $\frac{30}{70}$

- 6) Which choice represents the shaded portion of the number wheel?



- A.  $\frac{55}{100}$       B. 45  
 C. 5.5      D. 45.0

**Answers**

1. **C**

2. **D**

3. **A**

4. **B**

5. **B**

6. **A**