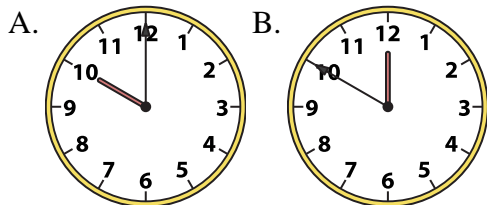




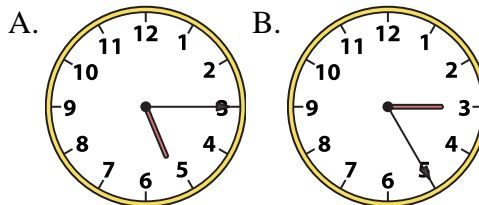
Determine which clock accurately shows the time.

Answers

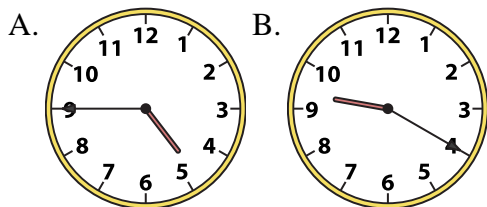
1) 10:00



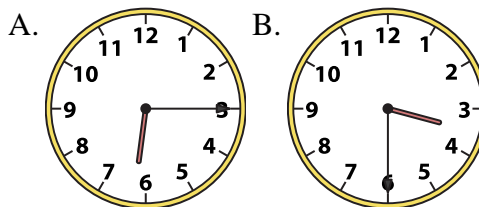
2) 5:15



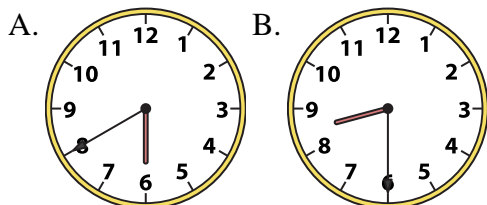
3) 4:45



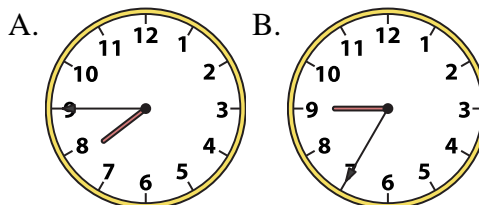
4) 6:15



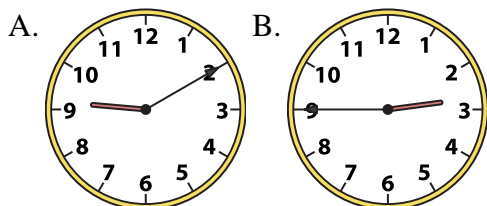
5) 8:30



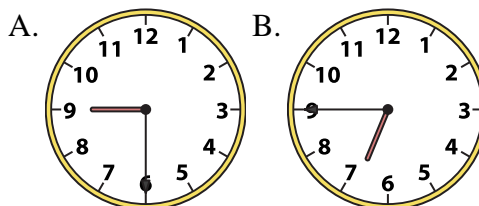
6) 7:45



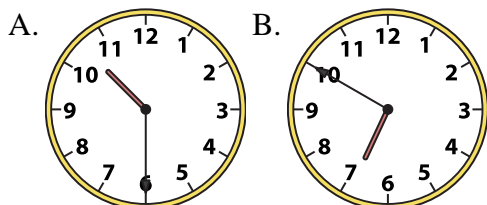
7) 2:45



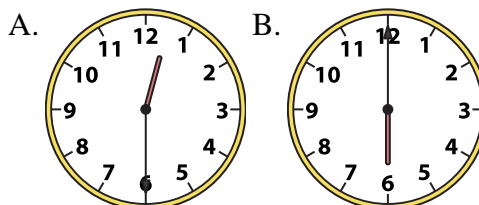
8) 6:45



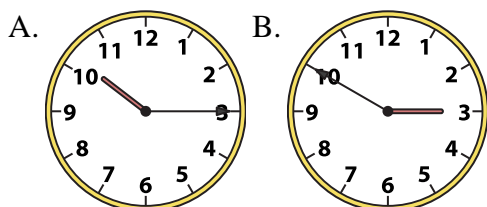
9) 10:30



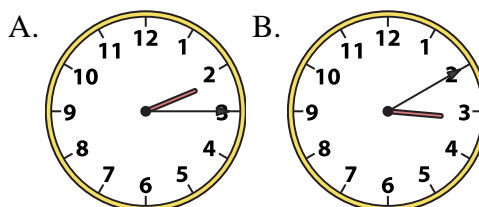
10) 12:30



11) 10:15



12) 2:15



1. _____
2. _____
3. _____
4. _____
5. _____
6. _____
7. _____
8. _____
9. _____
10. _____
11. _____
12. _____

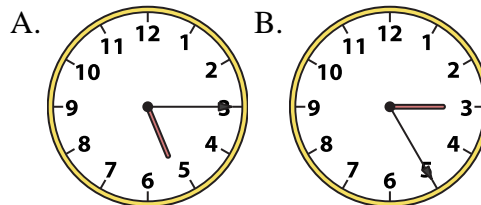
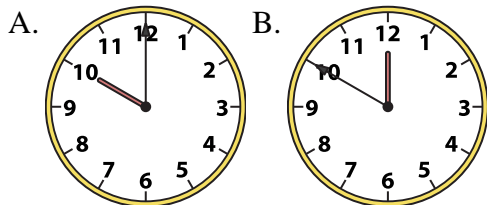


Determine which clock accurately shows the time.

Answers

1) 10:00

2) 5:15

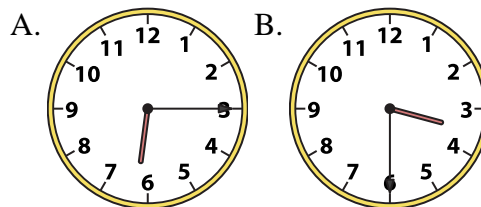
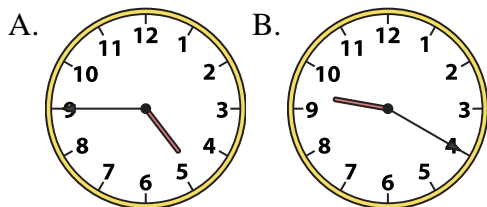


1. **A**

2. **A**

3) 4:45

4) 6:15



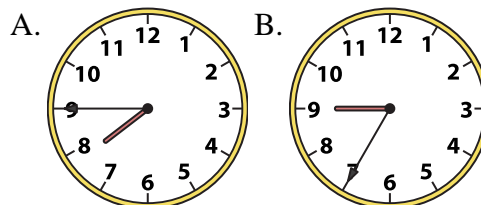
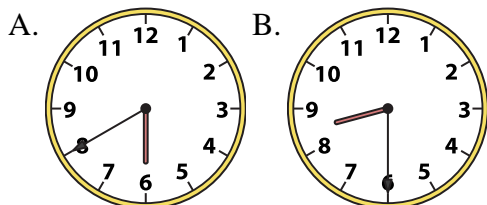
3. **A**

4. **A**

5. **B**

5) 8:30

6) 7:45



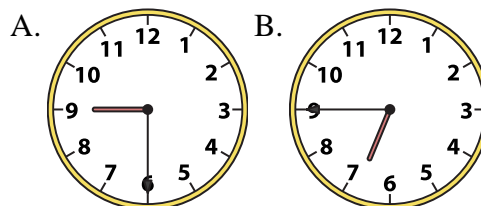
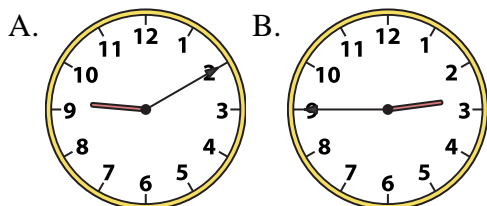
6. **A**

7. **B**

8. **B**

7) 2:45

8) 6:45



9. **A**

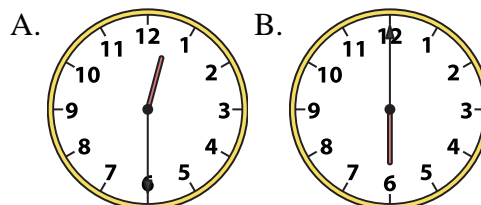
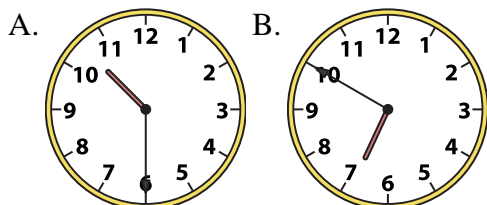
10. **A**

11. **A**

12. **A**

9) 10:30

10) 12:30



11) 10:15

12) 2:15

