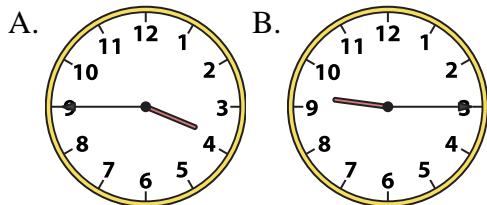




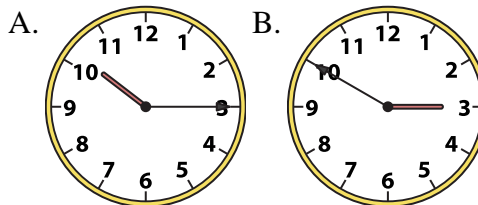
Determine which clock accurately shows the time.

**Answers**

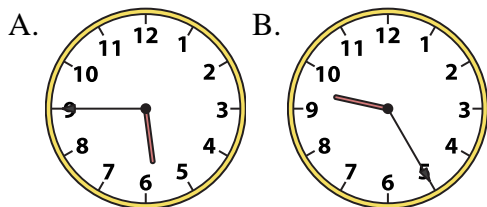
1) 3:45



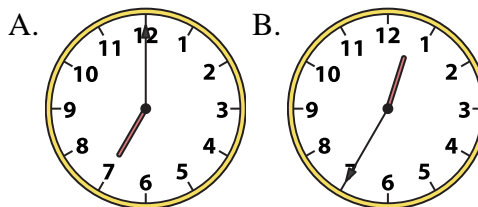
2) 10:15



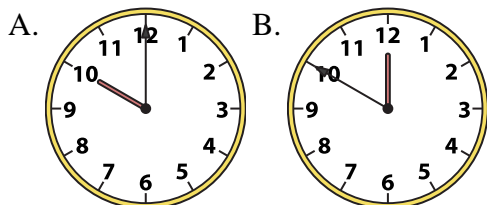
3) 5:45



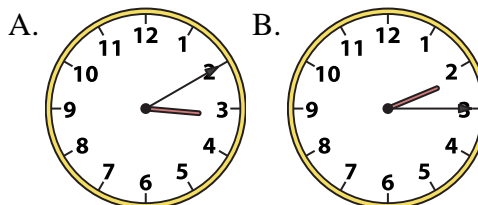
4) 7:00



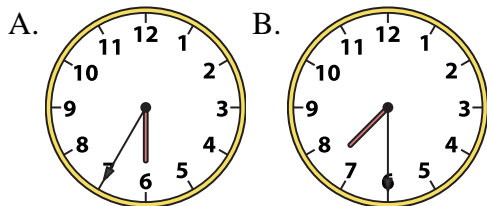
5) 10:00



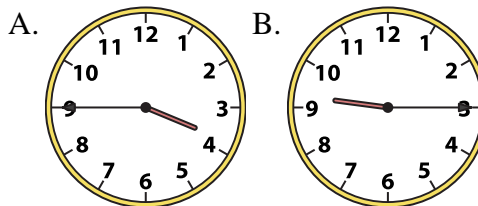
6) 2:15



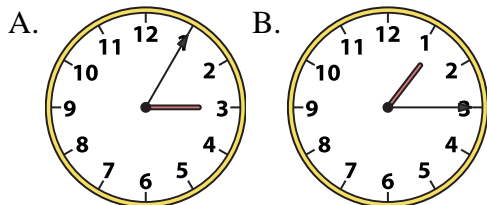
7) 7:30



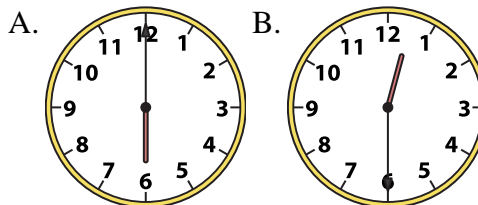
8) 9:15



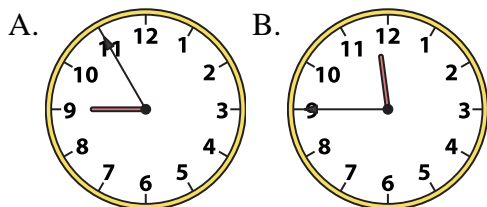
9) 1:15



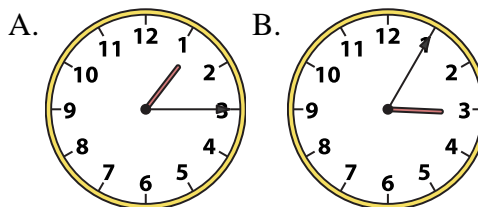
10) 12:30



11) 11:45



12) 1:15



1. \_\_\_\_\_
2. \_\_\_\_\_
3. \_\_\_\_\_
4. \_\_\_\_\_
5. \_\_\_\_\_
6. \_\_\_\_\_
7. \_\_\_\_\_
8. \_\_\_\_\_
9. \_\_\_\_\_
10. \_\_\_\_\_
11. \_\_\_\_\_
12. \_\_\_\_\_

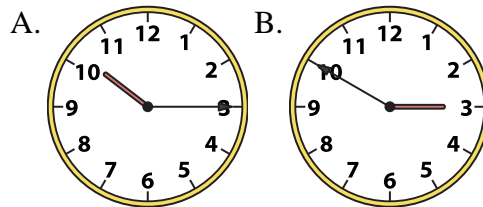
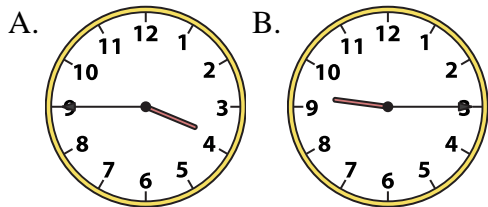


Determine which clock accurately shows the time.

**Answers**

1) 3:45

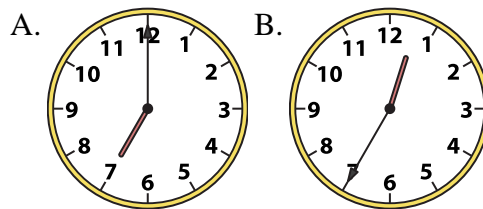
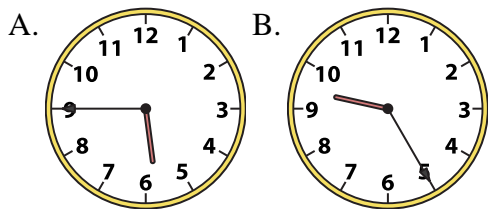
2) 10:15



- 1.     **A**
- 2.     **A**
- 3.     **A**

3) 5:45

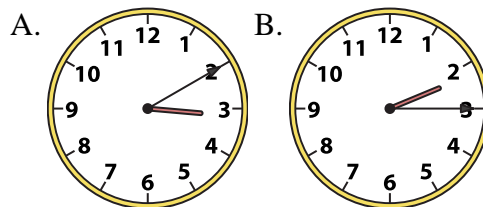
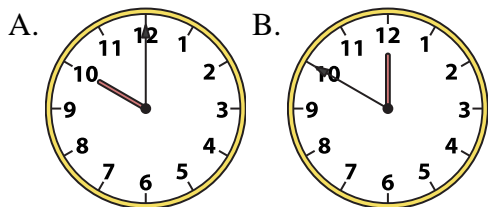
4) 7:00



- 4.     **A**
- 5.     **A**
- 6.     **B**

5) 10:00

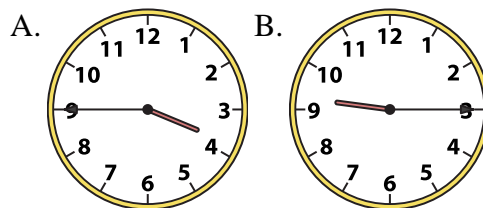
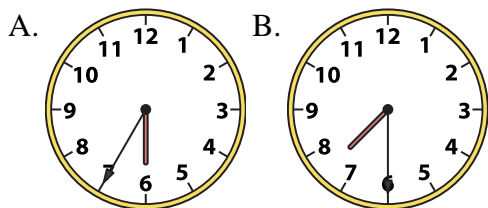
6) 2:15



- 7.     **B**
- 8.     **B**
- 9.     **B**
- 10.     **B**

7) 7:30

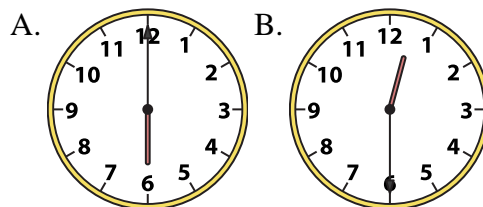
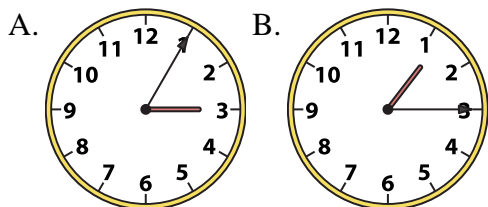
8) 9:15



- 11.     **B**
- 12.     **A**

9) 1:15

10) 12:30



11) 11:45

12) 1:15

