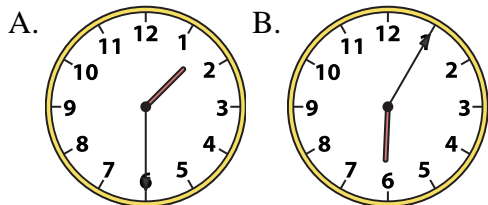




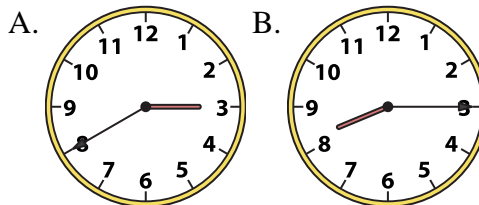
Determine which clock accurately shows the time.

**Answers**

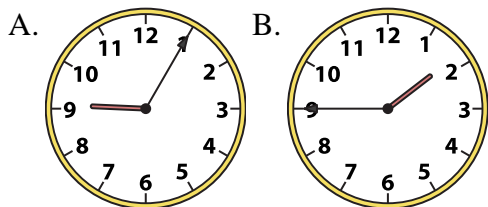
1) 1:30



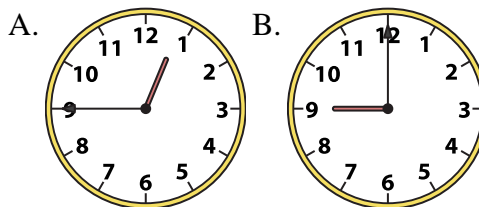
2) 8:15



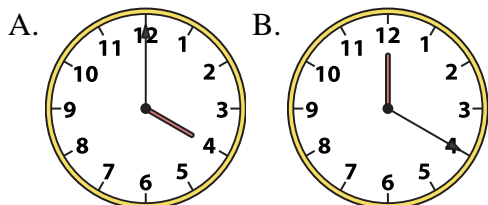
3) 1:45



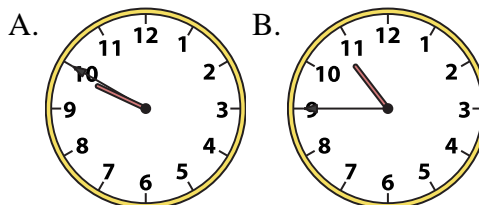
4) 12:45



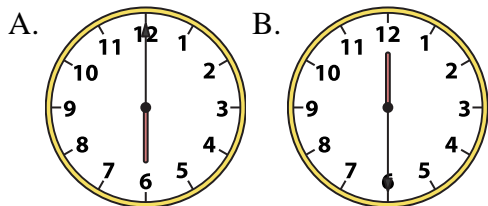
5) 4:00



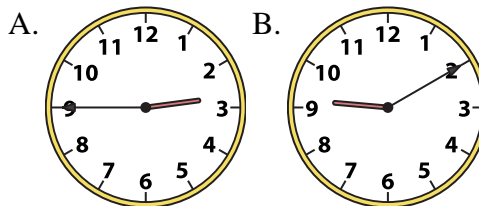
6) 10:45



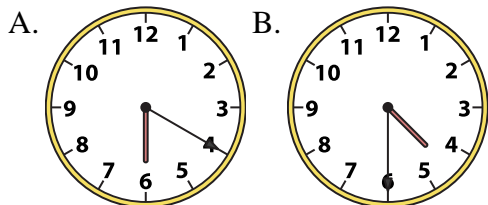
7) 6:00



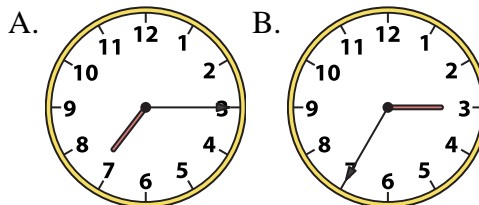
8) 2:45



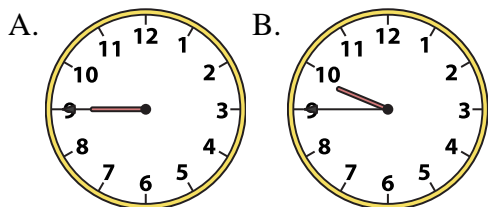
9) 4:30



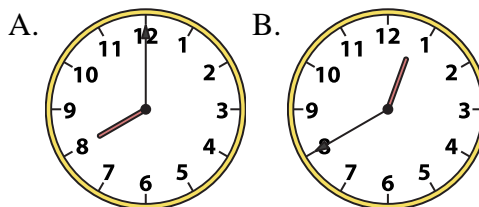
10) 7:15



11) 9:45



12) 8:00



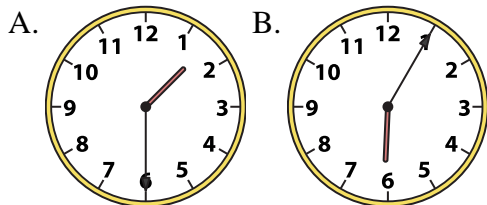
1. \_\_\_\_\_
2. \_\_\_\_\_
3. \_\_\_\_\_
4. \_\_\_\_\_
5. \_\_\_\_\_
6. \_\_\_\_\_
7. \_\_\_\_\_
8. \_\_\_\_\_
9. \_\_\_\_\_
10. \_\_\_\_\_
11. \_\_\_\_\_
12. \_\_\_\_\_



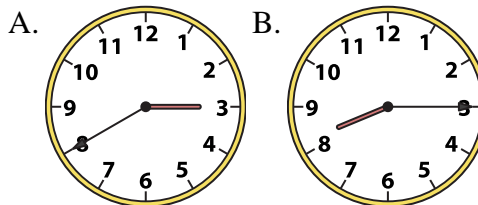
Determine which clock accurately shows the time.

**Answers**

1) 1:30

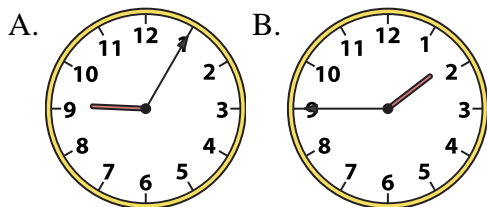


2) 8:15

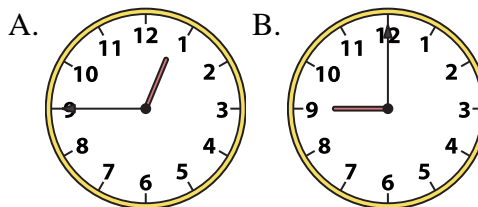


1. **A**

3) 1:45



4) 12:45



2. **B**

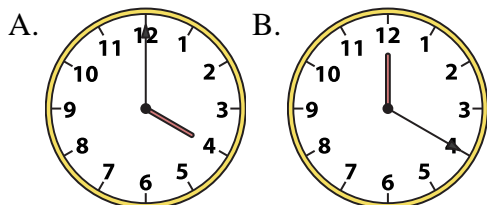
3. **B**

4. **A**

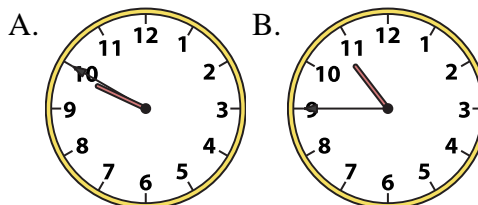
5. **A**

6. **B**

5) 4:00



6) 10:45



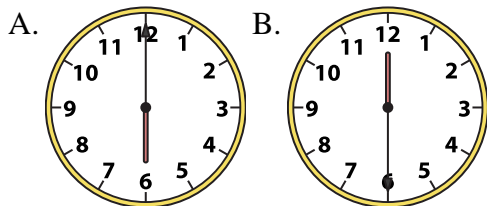
7. **A**

8. **A**

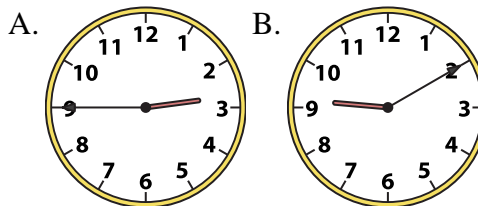
9. **B**

10. **A**

7) 6:00



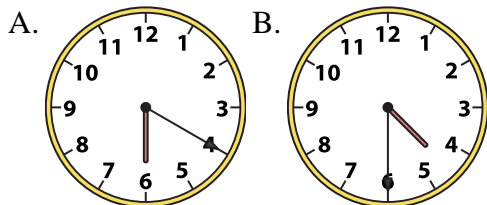
8) 2:45



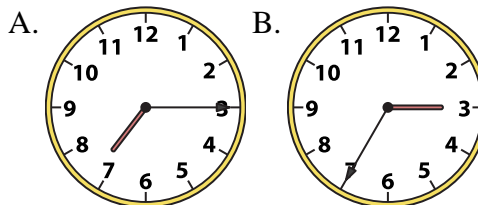
11. **B**

12. **A**

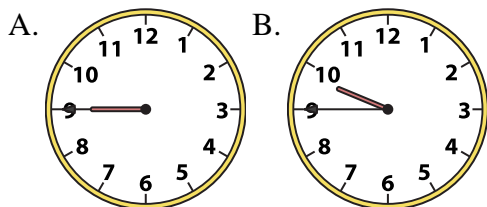
9) 4:30



10) 7:15



11) 9:45



12) 8:00

