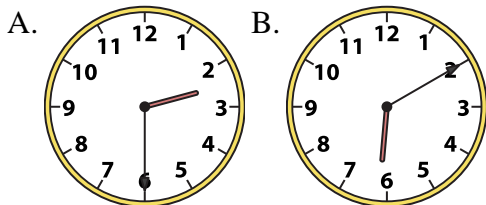




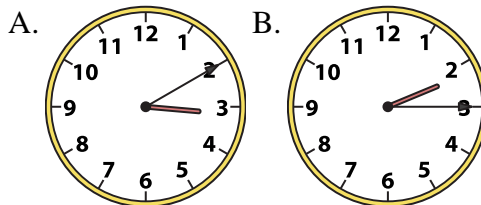
Determine which clock accurately shows the time.

Answers

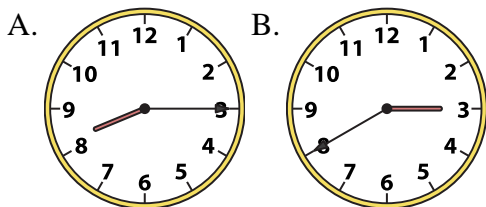
1) 2:30



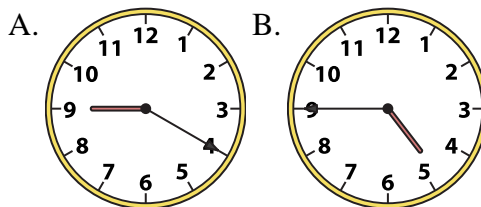
2) 2:15



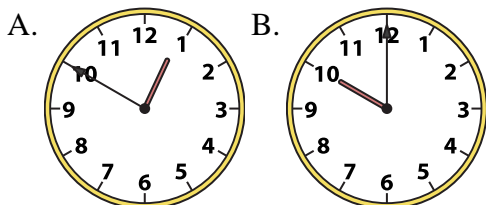
3) 8:15



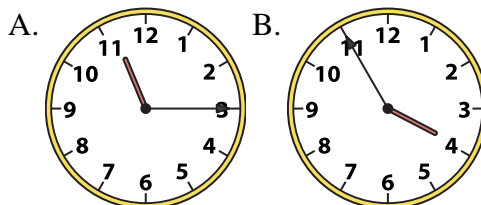
4) 4:45



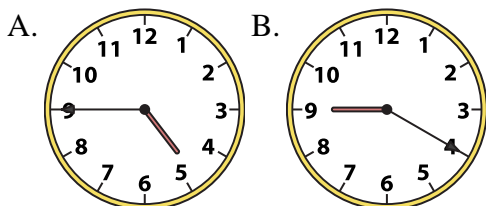
5) 10:00



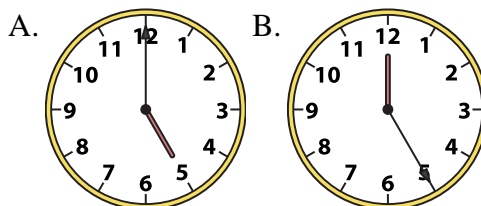
6) 11:15



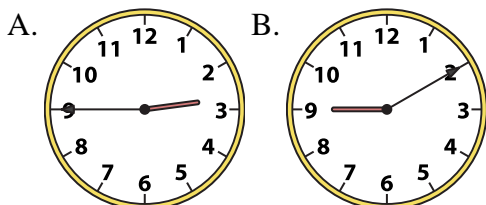
7) 4:45



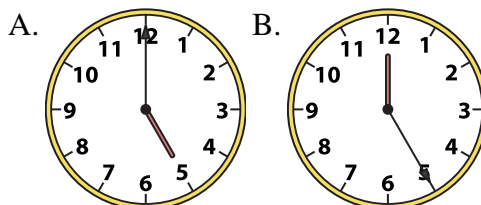
8) 5:00



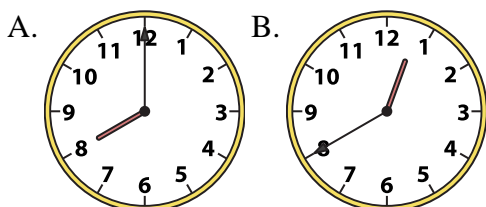
9) 2:45



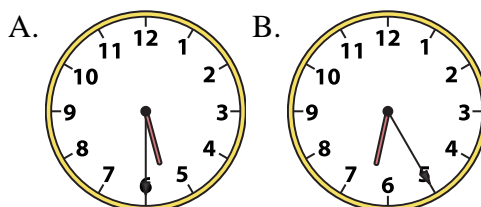
10) 5:00



11) 8:00



12) 5:30



1. _____
2. _____
3. _____
4. _____
5. _____
6. _____
7. _____
8. _____
9. _____
10. _____
11. _____
12. _____

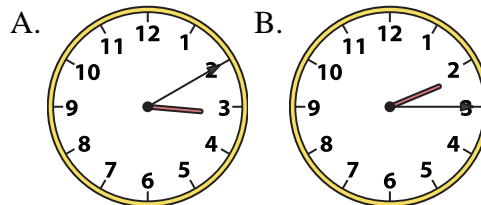
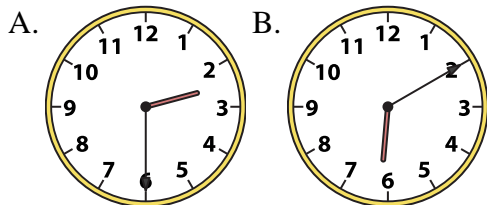


Determine which clock accurately shows the time.

Answers

1) 2:30

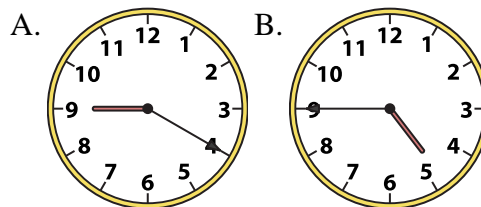
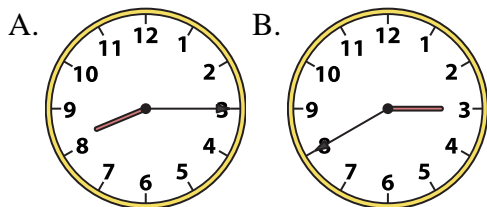
2) 2:15



1. **A**

3) 8:15

4) 4:45



2. **B**

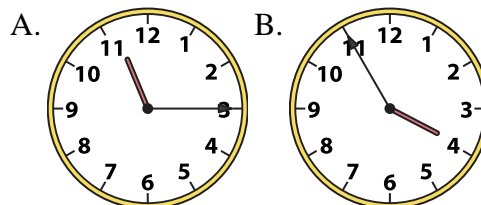
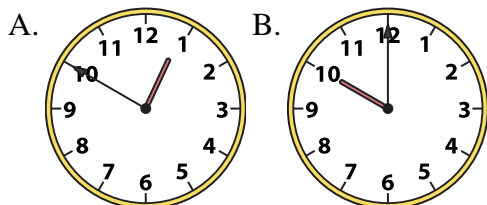
3. **A**

4. **B**

5. **B**

5) 10:00

6) 11:15



6. **A**

7. **A**

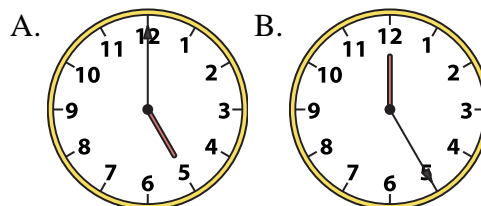
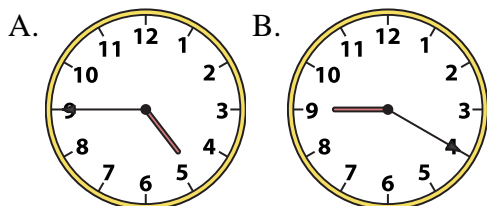
8. **A**

9. **A**

10. **A**

7) 4:45

8) 5:00

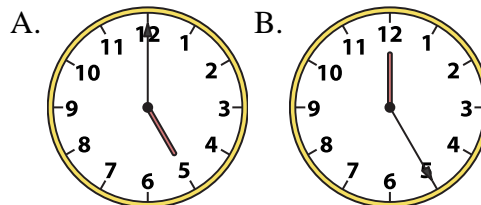
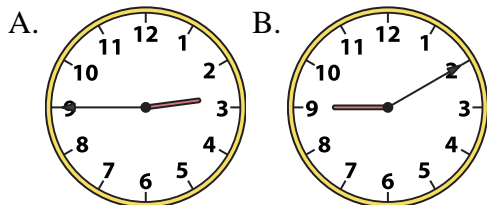


11. **A**

12. **A**

9) 2:45

10) 5:00



11) 8:00

12) 5:30

