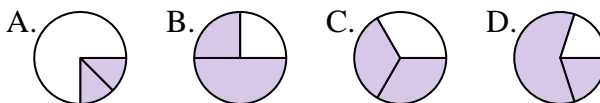




Determine which letter best represents each fraction.

Answers

1) Which choice best represents $\frac{2}{3}$?



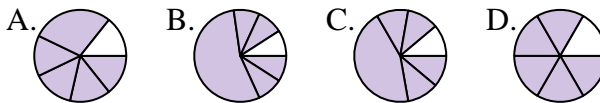
1. _____

2) Which choice best represents $\frac{2}{4}$?



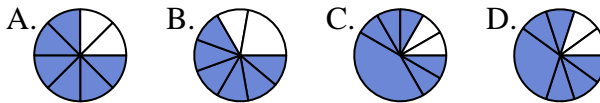
2. _____

3) Which choice best represents $\frac{5}{6}$?



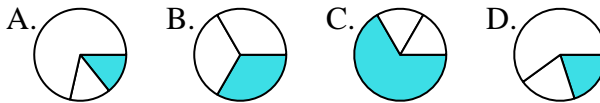
3. _____

4) Which choice best represents $\frac{6}{8}$?



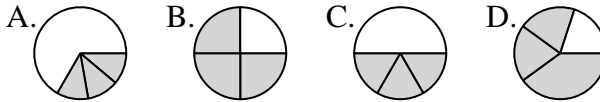
4. _____

5) Which choice best represents $\frac{1}{3}$?



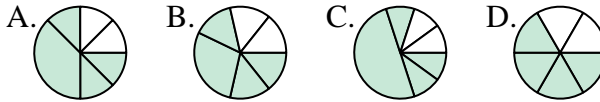
5. _____

6) Which choice best represents $\frac{3}{4}$?



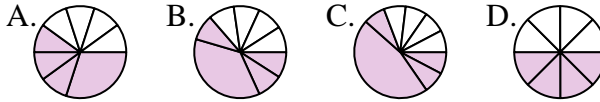
6. _____

7) Which choice best represents $\frac{4}{6}$?



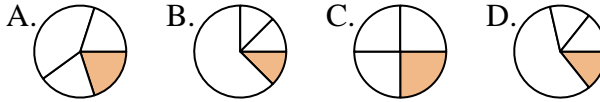
7. _____

8) Which choice best represents $\frac{4}{8}$?



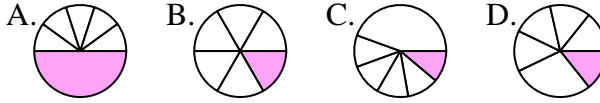
8. _____

9) Which choice best represents $\frac{1}{4}$?



9. _____

10) Which choice best represents $\frac{1}{6}$?



10. _____

11) Which choice best represents $\frac{2}{8}$?



11. _____

12) Which choice best represents $\frac{3}{6}$?







12. _____







Determine which letter best represents each fraction.





Answers

1) Which choice best represents $\frac{2}{3}$?
 A.  B.  C.  D. 





1. **C**

2) Which choice best represents $\frac{2}{4}$?
 A.  B.  C.  D. 





2. **D**

3) Which choice best represents $\frac{5}{6}$?
 A.  B.  C.  D. 





3. **D**

4) Which choice best represents $\frac{6}{8}$?
 A.  B.  C.  D. 





4. **A**

5) Which choice best represents $\frac{1}{3}$?
 A.  B.  C.  D. 





5. **B**

6) Which choice best represents $\frac{3}{4}$?
 A.  B.  C.  D. 





6. **B**

7) Which choice best represents $\frac{4}{6}$?
 A.  B.  C.  D. 





7. **D**

8) Which choice best represents $\frac{4}{8}$?
 A.  B.  C.  D. 





8. **D**

9) Which choice best represents $\frac{1}{4}$?
 A.  B.  C.  D. 





9. **C**

10) Which choice best represents $\frac{1}{6}$?
 A.  B.  C.  D. 

10. **B**

11) Which choice best represents $\frac{2}{8}$?
 A.  B.  C.  D. 

11. **C**

12) Which choice best represents $\frac{3}{6}$?
 A.  B.  C.  D. 

12. **D**