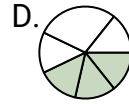
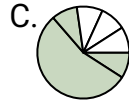
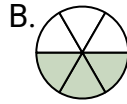
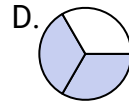
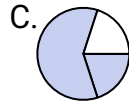
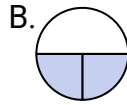
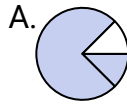


**Determine which letter best represents each fraction.****Answers**

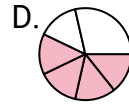
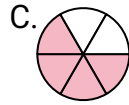
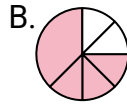
1)

Which choice best represents $\frac{3}{6}$?

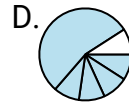
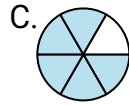
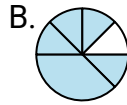
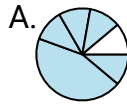
2)

Which choice best represents $\frac{2}{3}$?

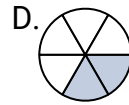
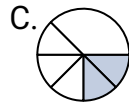
3)

Which choice best represents $\frac{4}{6}$?

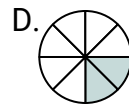
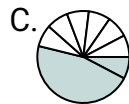
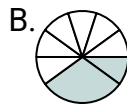
4)

Which choice best represents $\frac{5}{6}$?

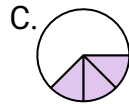
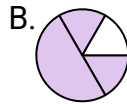
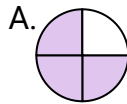
5)

Which choice best represents $\frac{2}{6}$?

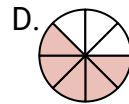
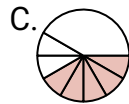
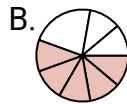
6)

Which choice best represents $\frac{2}{8}$?

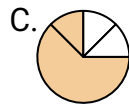
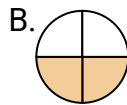
7)

Which choice best represents $\frac{3}{4}$?

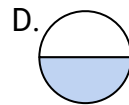
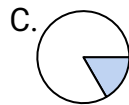
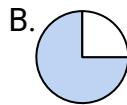
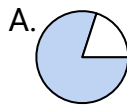
8)

Which choice best represents $\frac{5}{8}$?

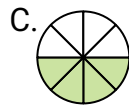
9)

Which choice best represents $\frac{2}{4}$?

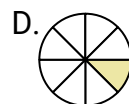
10)

Which choice best represents $\frac{1}{2}$?

11)

Which choice best represents $\frac{4}{8}$?

12)

Which choice best represents $\frac{1}{8}$?

1. _____

2. _____

3. _____

4. _____

5. _____

6. _____

7. _____

8. _____

9. _____

10. _____

11. _____

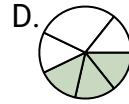
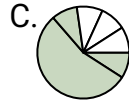
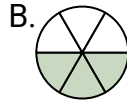
12. _____



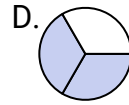
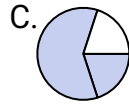
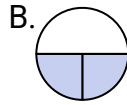
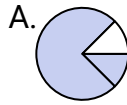
Determine which letter best represents each fraction.

Answers

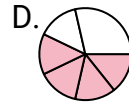
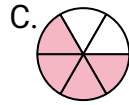
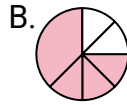
1)

Which choice best represents $\frac{3}{6}$?1. **B**

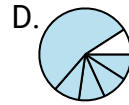
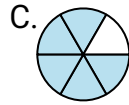
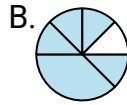
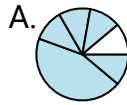
2)

Which choice best represents $\frac{2}{3}$?2. **D**

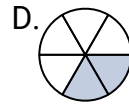
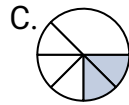
3)

Which choice best represents $\frac{4}{6}$?3. **C**4. **C**

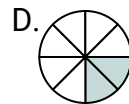
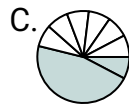
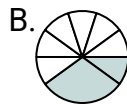
4)

Which choice best represents $\frac{5}{6}$?5. **D**6. **D**

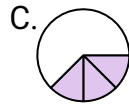
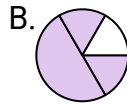
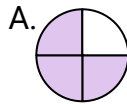
5)

Which choice best represents $\frac{2}{6}$?7. **A**8. **D**

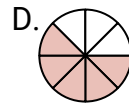
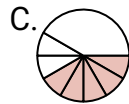
6)

Which choice best represents $\frac{2}{8}$?9. **B**10. **D**

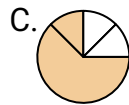
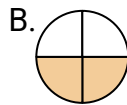
7)

Which choice best represents $\frac{3}{4}$?11. **C**12. **D**

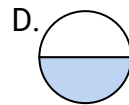
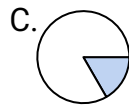
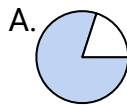
8)

Which choice best represents $\frac{5}{8}$?

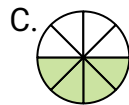
9)

Which choice best represents $\frac{2}{4}$?

10)

Which choice best represents $\frac{1}{2}$?

11)

Which choice best represents $\frac{4}{8}$?

12)

Which choice best represents $\frac{1}{8}$?