



Convert the fraction to a decimal.

**Answers**

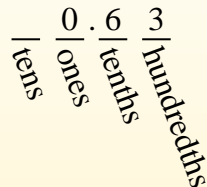
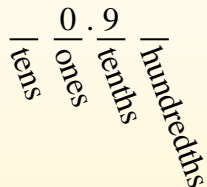

$$\frac{9}{10}$$

$$\frac{63}{100}$$

Converting from a fraction to a decimal is simple as long as you remember the place values.

The example above is nine-tenths. Lets look at how we'd write that as a decimal.

We do the same thing for the problem above only make sure we're in the hundredths place.



- Ex. **0.6**
1. \_\_\_\_\_
  2. \_\_\_\_\_
  3. \_\_\_\_\_
  4. \_\_\_\_\_
  5. \_\_\_\_\_
  6. \_\_\_\_\_
  7. \_\_\_\_\_
  8. \_\_\_\_\_
  9. \_\_\_\_\_
  10. \_\_\_\_\_
  11. \_\_\_\_\_
  12. \_\_\_\_\_
  13. \_\_\_\_\_
  14. \_\_\_\_\_
  15. \_\_\_\_\_
  16. \_\_\_\_\_
  17. \_\_\_\_\_
  18. \_\_\_\_\_
  19. \_\_\_\_\_
  20. \_\_\_\_\_

Ex)  $\frac{6}{10} = 0.6$

1)  $\frac{70}{100} =$

2)  $\frac{18}{100} =$

3)  $\frac{4}{10} =$

4)  $\frac{82}{100} =$

5)  $\frac{7}{10} =$

6)  $\frac{8}{100} =$

7)  $\frac{2}{100} =$

8)  $\frac{7}{100} =$

9)  $\frac{2}{10} =$

10)  $\frac{45}{100} =$

11)  $\frac{50}{100} =$

12)  $\frac{6}{100} =$

13)  $\frac{1}{10} =$

14)  $\frac{3}{10} =$

15)  $\frac{80}{100} =$

16)  $\frac{4}{100} =$

17)  $\frac{60}{100} =$

18)  $\frac{3}{100} =$

19)  $\frac{9}{10} =$

20)  $\frac{5}{100} =$



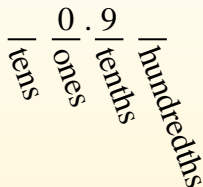
**Convert the fraction to a decimal.**

Converting from a fraction to a decimal is simple as long as you remember the place values.



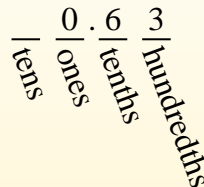
$$\frac{9}{10}$$

The example above is nine-tenths. Lets look at how we'd write that as a decimal.



$$\frac{63}{100}$$

We do the same thing for the problem above only make sure we're in the hundredths place.



**Answers**

Ex)  $\frac{6}{10} = 0.6$

1)  $\frac{70}{100} = 0.70$

2)  $\frac{18}{100} = 0.18$

3)  $\frac{4}{10} = 0.4$

4)  $\frac{82}{100} = 0.82$

5)  $\frac{7}{10} = 0.7$

6)  $\frac{8}{100} = 0.08$

7)  $\frac{2}{100} = 0.02$

8)  $\frac{7}{100} = 0.07$

9)  $\frac{2}{10} = 0.2$

10)  $\frac{45}{100} = 0.45$

11)  $\frac{50}{100} = 0.50$

12)  $\frac{6}{100} = 0.06$

13)  $\frac{1}{10} = 0.1$

14)  $\frac{3}{10} = 0.3$

15)  $\frac{80}{100} = 0.80$

16)  $\frac{4}{100} = 0.04$

17)  $\frac{60}{100} = 0.60$

18)  $\frac{3}{100} = 0.03$

19)  $\frac{9}{10} = 0.9$

20)  $\frac{5}{100} = 0.05$

- Ex. 0.6
- 1. 0.70
- 2. 0.18
- 3. 0.4
- 4. 0.82
- 5. 0.7
- 6. 0.08
- 7. 0.02
- 8. 0.07
- 9. 0.2
- 10. 0.45
- 11. 0.50
- 12. 0.06
- 13. 0.1
- 14. 0.3
- 15. 0.80
- 16. 0.04
- 17. 0.60
- 18. 0.03
- 19. 0.9
- 20. 0.05