



Solve each problem.

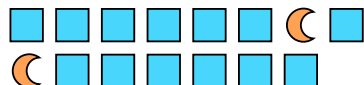
Ex) Express the triangles as a fraction of the entire set.




1) Express the stars as a fraction of the entire set.



2) Express the moons as a fraction of the entire set.




3) Express the pentagons as a fraction of the entire set.



4) Express the stars as a fraction of the entire set.




5) Express the moons as a fraction of the entire set.




6) Express the stars as a fraction of the entire set.



7) Express the circles as a fraction of the entire set.



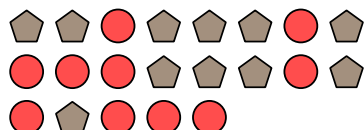
8) Express the circles as a fraction of the entire set.




9) Express the pentagons as a fraction of the entire set.



10) Express the pentagons as a fraction of the entire set.



11) Express the squares as a fraction of the entire set.



Answers

Ex. $\frac{4}{16}$

1. $\frac{9}{21}$

2. $\frac{2}{15}$

3. $\frac{10}{23}$

4. $\frac{12}{17}$

5. $\frac{15}{26}$

6. $\frac{7}{16}$

7. $\frac{12}{19}$

8. $\frac{8}{23}$

9. $\frac{7}{11}$

10. $\frac{11}{21}$

11. $\frac{4}{10}$