





Solve each problem.

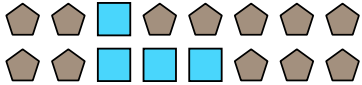
Ex) Express the moons as a fraction of the entire set.




1) Express the stars as a fraction of the entire set.




2) Express the squares as a fraction of the entire set.




3) Express the hearts as a fraction of the entire set.



4) Express the stars as a fraction of the entire set.



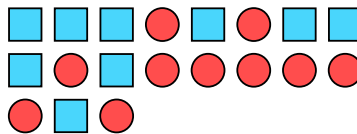
5) Express the hearts as a fraction of the entire set.



6) Express the moons as a fraction of the entire set.




7) Express the squares as a fraction of the entire set.



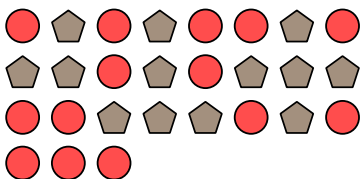
8) Express the stars as a fraction of the entire set.




9) Express the triangles as a fraction of the entire set.



10) Express the circles as a fraction of the entire set.



11) Express the stars as a fraction of the entire set.



**Answers**

Ex.  $\frac{15}{22}$

1.  $\frac{3}{13}$

2.  $\frac{4}{16}$

3.  $\frac{6}{9}$

4.  $\frac{2}{17}$

5.  $\frac{9}{19}$

6.  $\frac{4}{12}$

7.  $\frac{9}{19}$

8.  $\frac{2}{10}$

9.  $\frac{6}{11}$

10.  $\frac{14}{27}$

11.  $\frac{7}{17}$