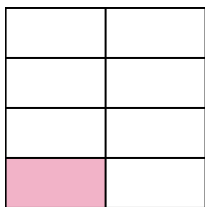


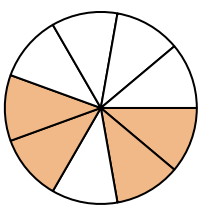


Write the shaded amount in word form.

Ex)



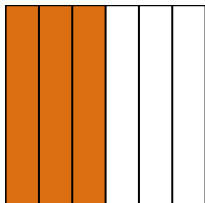
1)



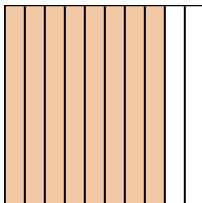
2)



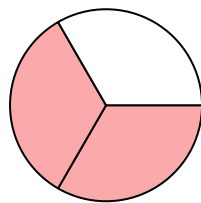
3)




4)



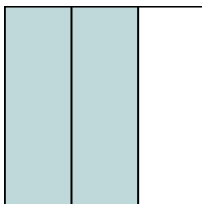
5)




6)



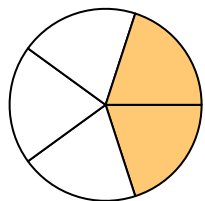
7)



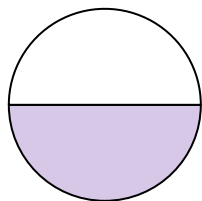
8)




9)



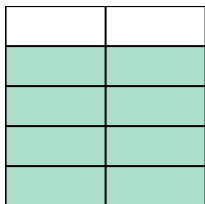
10)



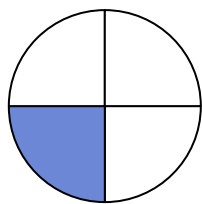
11)



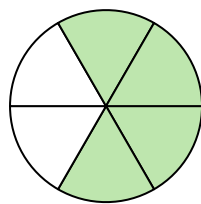
12)



13)



14)

**Answers**Ex. one-seventh

1. _____

2. _____

3. _____

4. _____

5. _____

6. _____

7. _____

8. _____

9. _____

10. _____

11. _____

12. _____

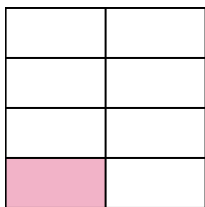
13. _____

14. _____

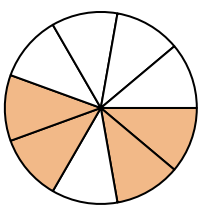


Write the shaded amount in word form.

Ex)



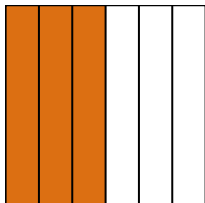
1)



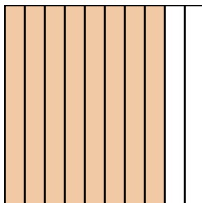
2)



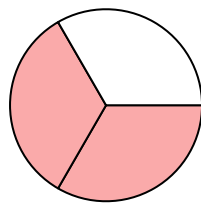
3)




4)



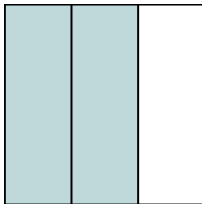
5)




6)



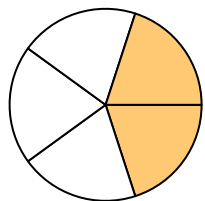
7)



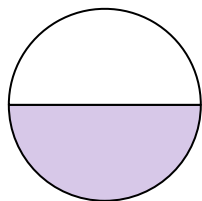
8)




9)



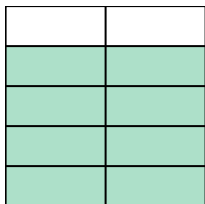
10)



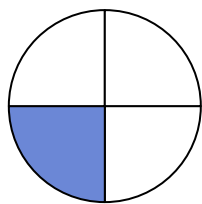
11)



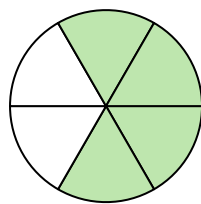
12)



13)



14)

**Answers**

Ex.

one-seventh

1.

four-ninths

2.

five-eighths

3.

three-sixths

4.

eight-tenths

5.

two-thirds

6.

four-tenths

7.

two-thirds

8.

one-fifth

9.

two-fifths

10.

one-half

11.

six-eighths

12.

eight-ninths

13.

one-fourth

14.

four-sixths