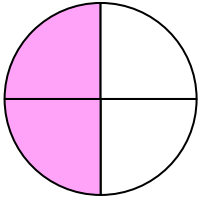


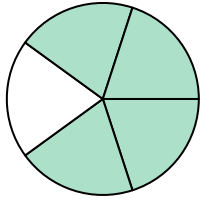


Write the shaded amount in word form.

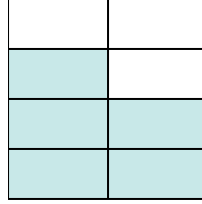
Ex)



1)



2)



Answers

Ex. two-fourths

1. _____

2. _____

3. _____

4. _____

5. _____

6. _____

7. _____

8. _____

9. _____

10. _____

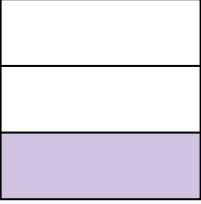
11. _____

12. _____

13. _____

14. _____

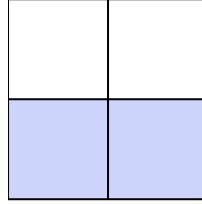
3)




4)



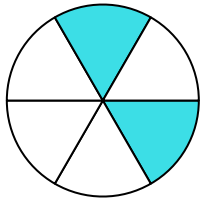
5)



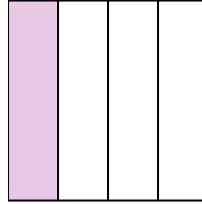
6)




7)



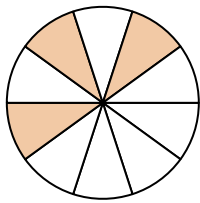
8)



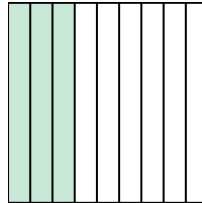
9)



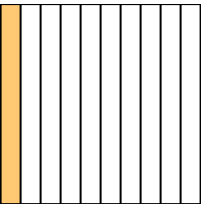
10)



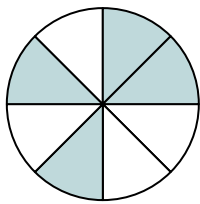
11)




12)



13)



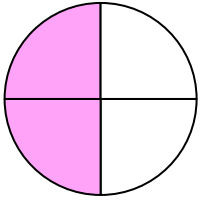
14)



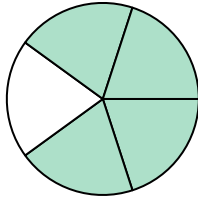


Write the shaded amount in word form.

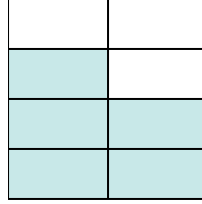
Ex)



1)



2)



Answers

Ex. two-fourths

1. four-fifths

2. five-sevenths

3. one-third

4. three-ninths

5. two-thirds

6. one-half

7. two-sixths

8. one-fourth

9. one-half

10. three-tenths

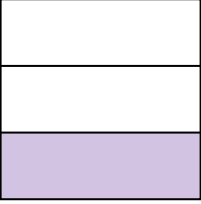
11. three-ninths

12. one-tenth


13. four-eighths

14. five-eighths

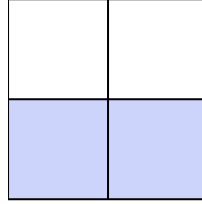
3)




4)



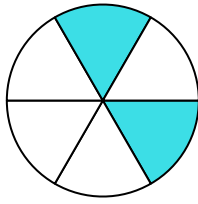
5)



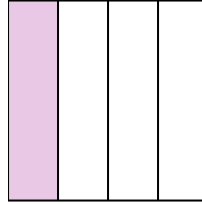
6)




7)



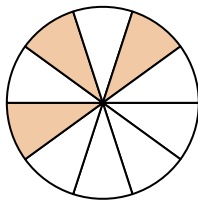
8)



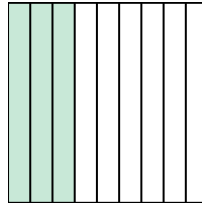
9)



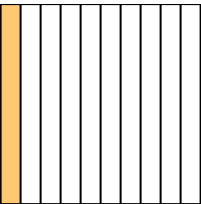
10)



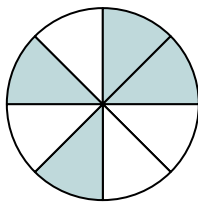
11)



12)



13)



14)

