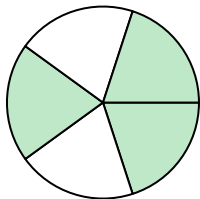





Write the shaded amount in word form.

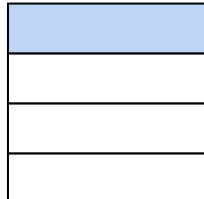
Ex)



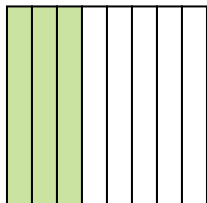
1)



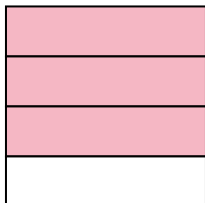
2)



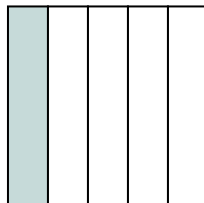
3)




4)




5)



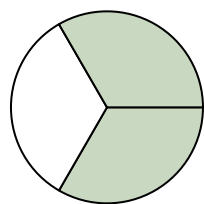
6)




7)




8)



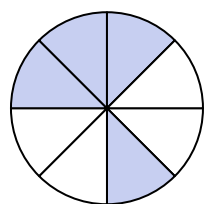
9)




10)




11)



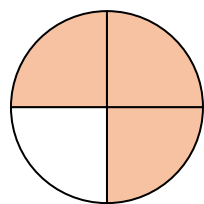
12)



13)



14)

**Answers**Ex. three-fifths

1. _____

2. _____

3. _____

4. _____

5. _____

6. _____

7. _____

8. _____

9. _____

10. _____

11. _____

12. _____

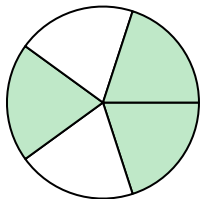
13. _____

14. _____




Write the shaded amount in word form.

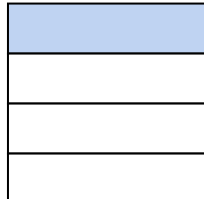
Ex)



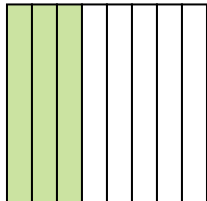
1)




2)



3)




4)



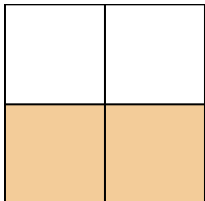
5)



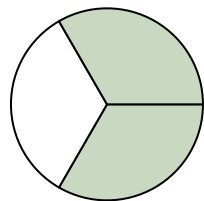
6)




7)




8)



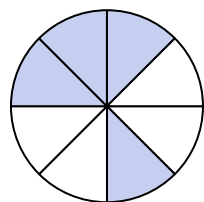
9)




10)




11)



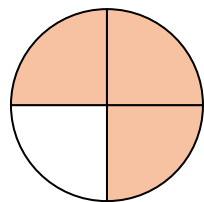
12)



13)



14)

**Answers**Ex. three-fifths1. one-third2. one-fourth3. three-eighths4. three-fourths5. one-fifth6. four-eighths7. two-thirds8. two-thirds9. one-half10. two-fifths11. four-eighths12. one-half13. one-half14. three-fourths