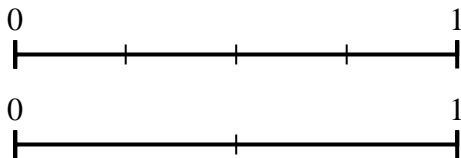




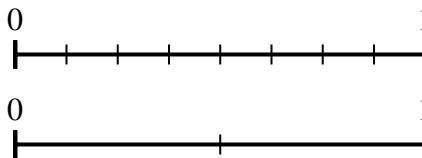
Use the number lines to answer the questions.

**Answers**

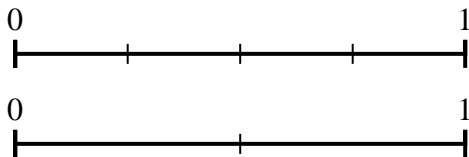
1) Using the number lines shown, what is the equivalent fraction to  $\frac{2}{4}$ ?



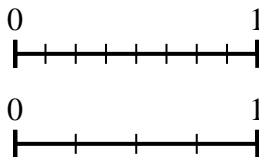
2) Using the number lines shown, what is the equivalent fraction to  $\frac{8}{8}$ ?



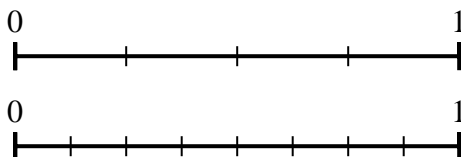
3) Using the number lines shown, what is the equivalent fraction to  $\frac{4}{4}$ ?



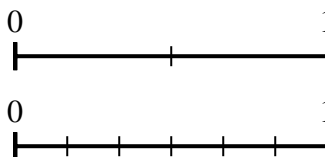
4) Using the number lines shown, what is the equivalent fraction to  $\frac{6}{8}$ ?



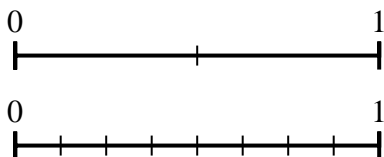
5) Using the number lines shown, what is the equivalent fraction to  $\frac{2}{4}$ ?



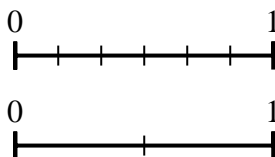
6) Using the number lines shown, what is the equivalent fraction to  $\frac{2}{2}$ ?



7) Using the number lines shown, what is the equivalent fraction to  $\frac{1}{2}$ ?



8) Using the number lines shown, what is the equivalent fraction to  $\frac{0}{6}$ ?

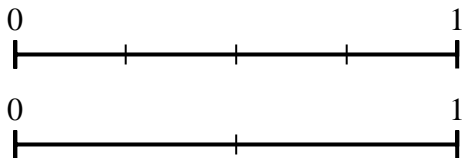


1. \_\_\_\_\_
2. \_\_\_\_\_
3. \_\_\_\_\_
4. \_\_\_\_\_
5. \_\_\_\_\_
6. \_\_\_\_\_
7. \_\_\_\_\_
8. \_\_\_\_\_

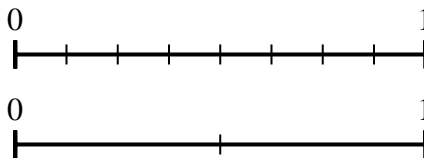


Use the number lines to answer the questions.

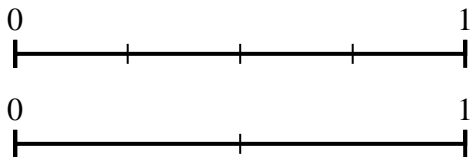
1) Using the number lines shown, what is the equivalent fraction to  $\frac{2}{4}$ ?



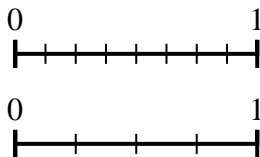
2) Using the number lines shown, what is the equivalent fraction to  $\frac{8}{8}$ ?



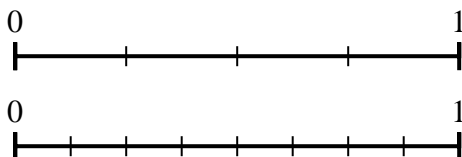
3) Using the number lines shown, what is the equivalent fraction to  $\frac{4}{4}$ ?



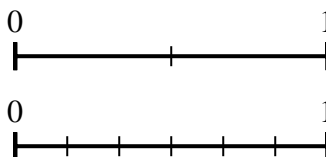
4) Using the number lines shown, what is the equivalent fraction to  $\frac{6}{8}$ ?



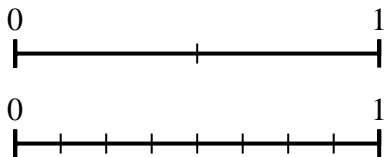
5) Using the number lines shown, what is the equivalent fraction to  $\frac{2}{4}$ ?



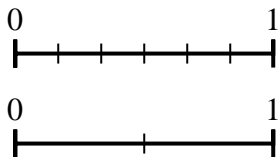
6) Using the number lines shown, what is the equivalent fraction to  $\frac{2}{2}$ ?



7) Using the number lines shown, what is the equivalent fraction to  $\frac{1}{2}$ ?



8) Using the number lines shown, what is the equivalent fraction to  $\frac{0}{6}$ ?



**Answers**

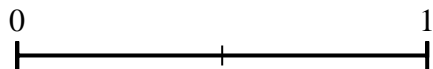
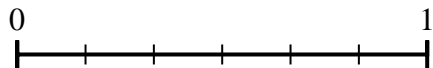
1.  $\frac{1}{2}$
2.  $\frac{2}{2}$
3.  $\frac{2}{2}$
4.  $\frac{3}{4}$
5.  $\frac{4}{8}$
6.  $\frac{6}{6}$
7.  $\frac{4}{8}$
8.  $\frac{0}{2}$




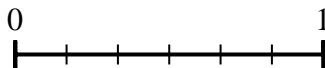
Use the number lines to answer the questions.

**Answers**

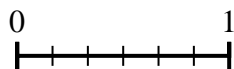
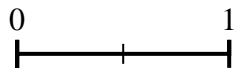
1) Using the number lines shown, what is the equivalent fraction to  $\frac{0}{6}$ ?



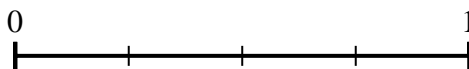
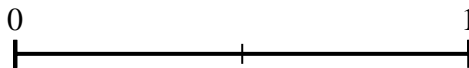
2) Using the number lines shown, what is the equivalent fraction to  $\frac{6}{6}$ ?



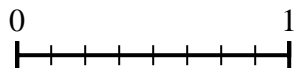
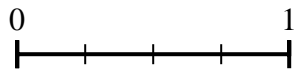
3) Using the number lines shown, what is the equivalent fraction to  $\frac{2}{2}$ ?



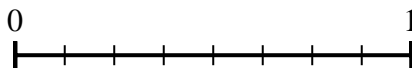
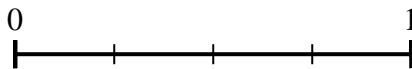
4) Using the number lines shown, what is the equivalent fraction to  $\frac{2}{2}$ ?



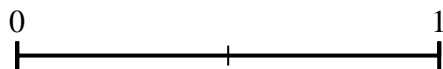
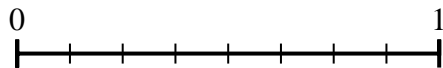
5) Using the number lines shown, what is the equivalent fraction to  $\frac{4}{4}$ ?



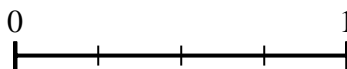
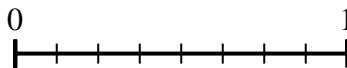
6) Using the number lines shown, what is the equivalent fraction to  $\frac{2}{4}$ ?



7) Using the number lines shown, what is the equivalent fraction to  $\frac{8}{8}$ ?



8) Using the number lines shown, what is the equivalent fraction to  $\frac{6}{8}$ ?

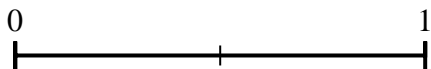
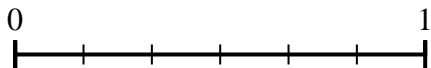


1. \_\_\_\_\_
2. \_\_\_\_\_
3. \_\_\_\_\_
4. \_\_\_\_\_
5. \_\_\_\_\_
6. \_\_\_\_\_
7. \_\_\_\_\_
8. \_\_\_\_\_


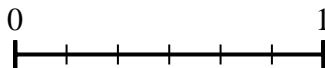


Use the number lines to answer the questions.

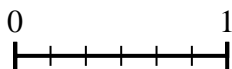
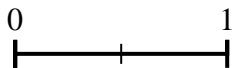
1) Using the number lines shown, what is the equivalent fraction to  $\frac{0}{6}$ ?



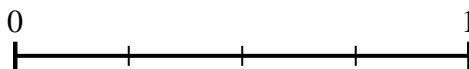
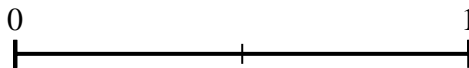
2) Using the number lines shown, what is the equivalent fraction to  $\frac{6}{6}$ ?



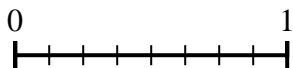
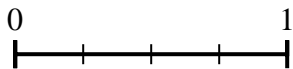
3) Using the number lines shown, what is the equivalent fraction to  $\frac{2}{2}$ ?



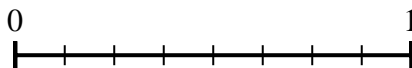
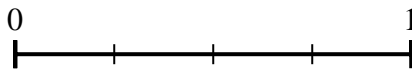
4) Using the number lines shown, what is the equivalent fraction to  $\frac{2}{2}$ ?



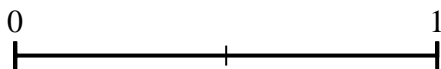
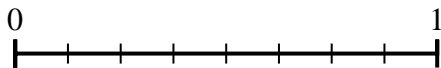
5) Using the number lines shown, what is the equivalent fraction to  $\frac{4}{4}$ ?



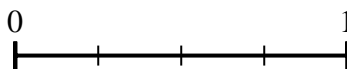
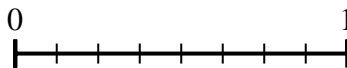
6) Using the number lines shown, what is the equivalent fraction to  $\frac{2}{4}$ ?



7) Using the number lines shown, what is the equivalent fraction to  $\frac{8}{8}$ ?



8) Using the number lines shown, what is the equivalent fraction to  $\frac{6}{8}$ ?



**Answers**

1.  $\frac{0}{2}$

2.  $\frac{3}{3}$

3.  $\frac{6}{6}$

4.  $\frac{4}{4}$

5.  $\frac{8}{8}$

6.  $\frac{4}{8}$

7.  $\frac{2}{2}$

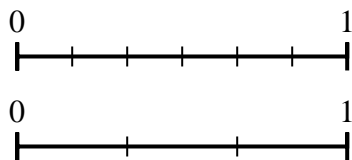
8.  $\frac{3}{4}$



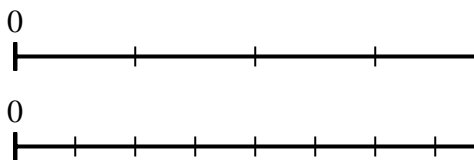
Use the number lines to answer the questions.

**Answers**

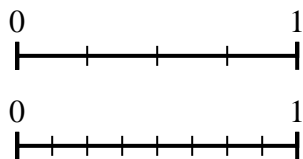
1) Using the number lines shown, what is the equivalent fraction to  $\frac{4}{6}$ ?



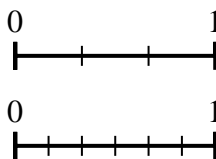
2) Using the number lines shown, what is the equivalent fraction to  $\frac{1}{4}$ ?



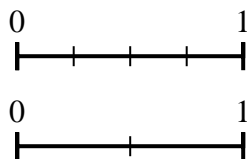
3) Using the number lines shown, what is the equivalent fraction to  $\frac{2}{4}$ ?



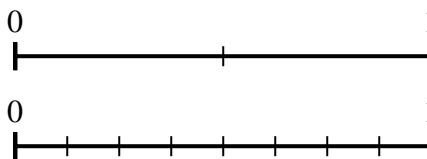
4) Using the number lines shown, what is the equivalent fraction to  $\frac{1}{3}$ ?



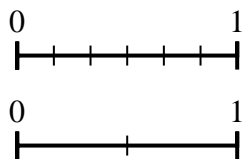
5) Using the number lines shown, what is the equivalent fraction to  $\frac{4}{4}$ ?



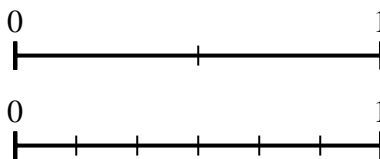
6) Using the number lines shown, what is the equivalent fraction to  $\frac{1}{2}$ ?



7) Using the number lines shown, what is the equivalent fraction to  $\frac{6}{6}$ ?



8) Using the number lines shown, what is the equivalent fraction to  $\frac{1}{2}$ ?

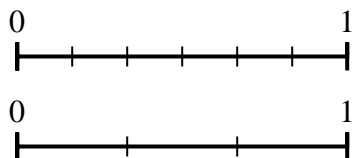


1. \_\_\_\_\_
2. \_\_\_\_\_
3. \_\_\_\_\_
4. \_\_\_\_\_
5. \_\_\_\_\_
6. \_\_\_\_\_
7. \_\_\_\_\_
8. \_\_\_\_\_

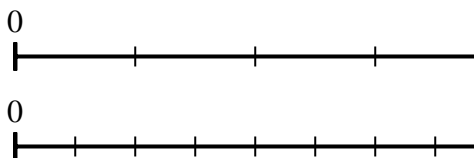


Use the number lines to answer the questions.

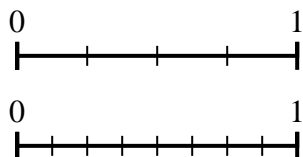
1) Using the number lines shown, what is the equivalent fraction to  $\frac{4}{6}$ ?



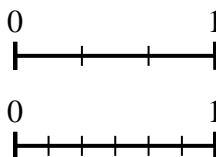
2) Using the number lines shown, what is the equivalent fraction to  $\frac{1}{4}$ ?



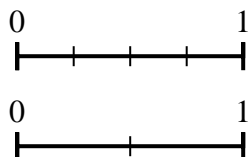
3) Using the number lines shown, what is the equivalent fraction to  $\frac{2}{4}$ ?



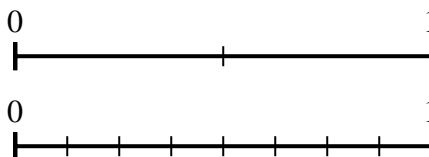
4) Using the number lines shown, what is the equivalent fraction to  $\frac{1}{3}$ ?



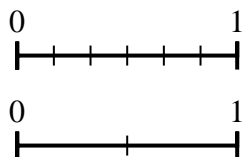
5) Using the number lines shown, what is the equivalent fraction to  $\frac{4}{4}$ ?



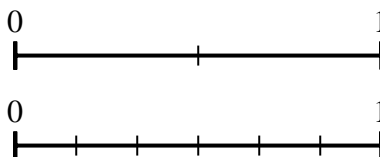
6) Using the number lines shown, what is the equivalent fraction to  $\frac{1}{2}$ ?



7) Using the number lines shown, what is the equivalent fraction to  $\frac{6}{6}$ ?



8) Using the number lines shown, what is the equivalent fraction to  $\frac{1}{2}$ ?



**Answers**

1.  $\frac{2}{3}$

2.  $\frac{2}{8}$

3.  $\frac{4}{8}$

4.  $\frac{2}{6}$

5.  $\frac{2}{2}$

6.  $\frac{4}{8}$

7.  $\frac{2}{2}$

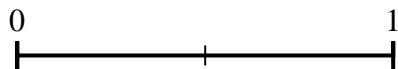
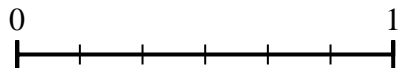
8.  $\frac{3}{6}$



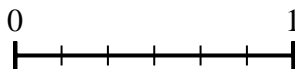

Use the number lines to answer the questions.

Answers

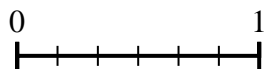
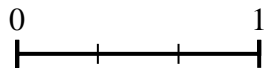
1) Using the number lines shown, what is the equivalent fraction to  $\frac{6}{6}$ ?



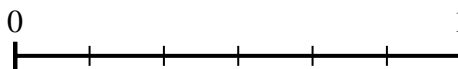

2) Using the number lines shown, what is the equivalent fraction to  $\frac{2}{3}$ ?



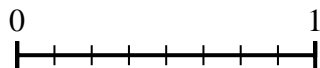
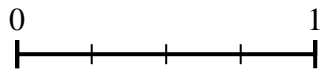
3) Using the number lines shown, what is the equivalent fraction to  $\frac{3}{3}$ ?



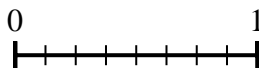
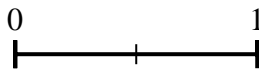
4) Using the number lines shown, what is the equivalent fraction to  $\frac{1}{3}$ ?



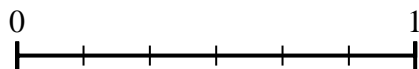
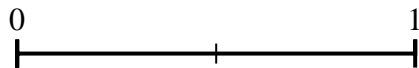
5) Using the number lines shown, what is the equivalent fraction to  $\frac{2}{4}$ ?



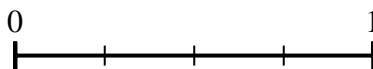
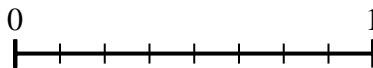
6) Using the number lines shown, what is the equivalent fraction to  $\frac{1}{2}$ ?



7) Using the number lines shown, what is the equivalent fraction to  $\frac{1}{2}$ ?



8) Using the number lines shown, what is the equivalent fraction to  $\frac{8}{8}$ ?

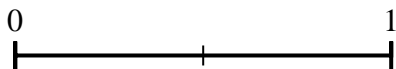
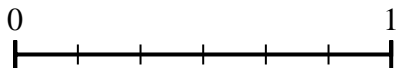


1. \_\_\_\_\_
2. \_\_\_\_\_
3. \_\_\_\_\_
4. \_\_\_\_\_
5. \_\_\_\_\_
6. \_\_\_\_\_
7. \_\_\_\_\_
8. \_\_\_\_\_

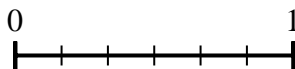



Use the number lines to answer the questions.

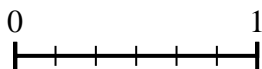
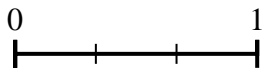
1) Using the number lines shown, what is the equivalent fraction to  $\frac{6}{6}$ ?



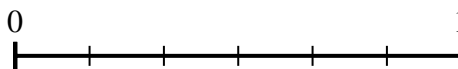

2) Using the number lines shown, what is the equivalent fraction to  $\frac{2}{3}$ ?



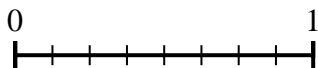
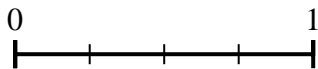
3) Using the number lines shown, what is the equivalent fraction to  $\frac{3}{3}$ ?



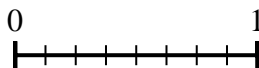
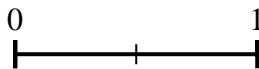
4) Using the number lines shown, what is the equivalent fraction to  $\frac{1}{3}$ ?



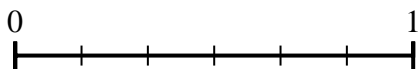
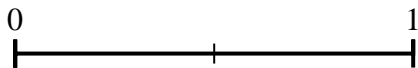
5) Using the number lines shown, what is the equivalent fraction to  $\frac{2}{4}$ ?



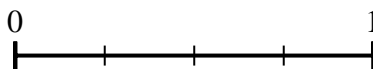
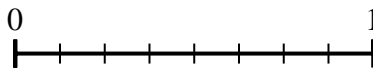
6) Using the number lines shown, what is the equivalent fraction to  $\frac{1}{2}$ ?



7) Using the number lines shown, what is the equivalent fraction to  $\frac{1}{2}$ ?



8) Using the number lines shown, what is the equivalent fraction to  $\frac{8}{8}$ ?



**Answers**

1.  $\frac{2}{2}$

2.  $\frac{4}{6}$

3.  $\frac{6}{6}$

4.  $\frac{2}{6}$

5.  $\frac{4}{8}$

6.  $\frac{4}{8}$

7.  $\frac{3}{6}$

8.  $\frac{4}{4}$


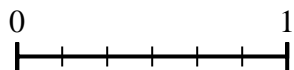




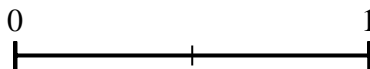
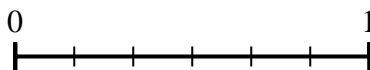
Use the number lines to answer the questions.

**Answers**

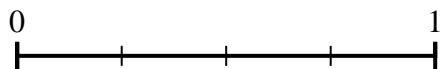
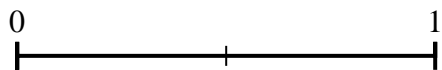
1) Using the number lines shown, what is the equivalent fraction to  $\frac{2}{6}$ ?



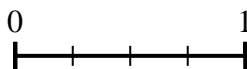
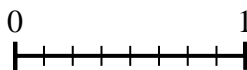
2) Using the number lines shown, what is the equivalent fraction to  $\frac{6}{6}$ ?



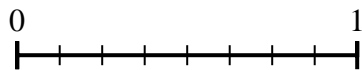
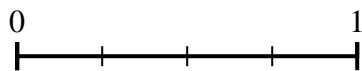
3) Using the number lines shown, what is the equivalent fraction to  $\frac{2}{2}$ ?



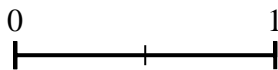
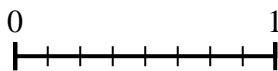
4) Using the number lines shown, what is the equivalent fraction to  $\frac{8}{8}$ ?




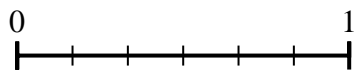
5) Using the number lines shown, what is the equivalent fraction to  $\frac{1}{4}$ ?




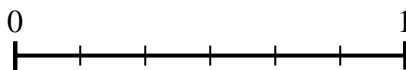
6) Using the number lines shown, what is the equivalent fraction to  $\frac{8}{8}$ ?



7) Using the number lines shown, what is the equivalent fraction to  $\frac{4}{6}$ ?



8) Using the number lines shown, what is the equivalent fraction to  $\frac{6}{6}$ ?


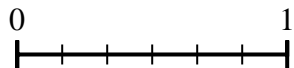


1. \_\_\_\_\_
2. \_\_\_\_\_
3. \_\_\_\_\_
4. \_\_\_\_\_
5. \_\_\_\_\_
6. \_\_\_\_\_
7. \_\_\_\_\_
8. \_\_\_\_\_

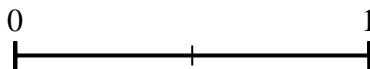
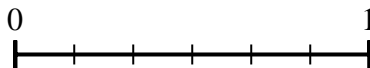


Use the number lines to answer the questions.

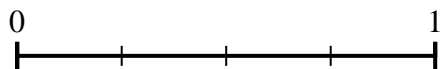
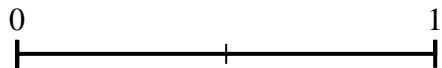
1) Using the number lines shown, what is the equivalent fraction to  $\frac{2}{6}$ ?



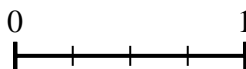
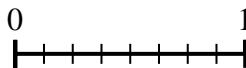
2) Using the number lines shown, what is the equivalent fraction to  $\frac{6}{6}$ ?



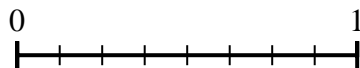
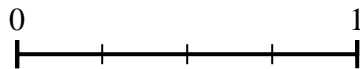
3) Using the number lines shown, what is the equivalent fraction to  $\frac{2}{2}$ ?



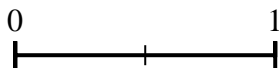
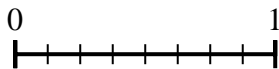
4) Using the number lines shown, what is the equivalent fraction to  $\frac{8}{8}$ ?




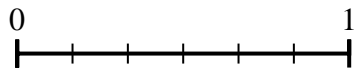
5) Using the number lines shown, what is the equivalent fraction to  $\frac{1}{4}$ ?




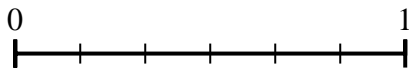
6) Using the number lines shown, what is the equivalent fraction to  $\frac{8}{8}$ ?



7) Using the number lines shown, what is the equivalent fraction to  $\frac{4}{6}$ ?



8) Using the number lines shown, what is the equivalent fraction to  $\frac{6}{6}$ ?



**Answers**

1.  $\frac{1}{3}$

2.  $\frac{2}{2}$

3.  $\frac{4}{4}$

4.  $\frac{4}{4}$

5.  $\frac{2}{8}$

6.  $\frac{2}{2}$

7.  $\frac{2}{3}$

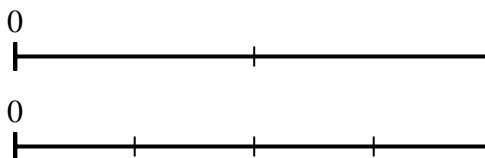
8.  $\frac{3}{3}$



Use the number lines to answer the questions.

**Answers**

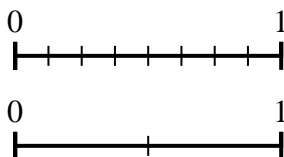
1) Using the number lines shown, what is the equivalent fraction to  $\frac{2}{2}$ ?



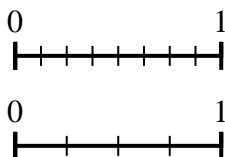
2) Using the number lines shown, what is the equivalent fraction to  $\frac{4}{8}$ ?



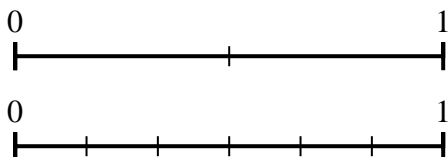
3) Using the number lines shown, what is the equivalent fraction to  $\frac{8}{8}$ ?



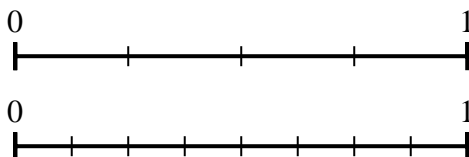
4) Using the number lines shown, what is the equivalent fraction to  $\frac{8}{8}$ ?



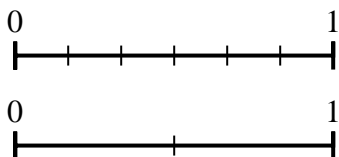
5) Using the number lines shown, what is the equivalent fraction to  $\frac{0}{2}$ ?



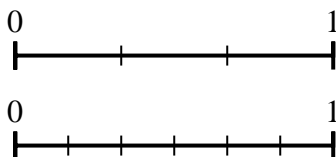
6) Using the number lines shown, what is the equivalent fraction to  $\frac{2}{4}$ ?



7) Using the number lines shown, what is the equivalent fraction to  $\frac{3}{6}$ ?



8) Using the number lines shown, what is the equivalent fraction to  $\frac{2}{3}$ ?

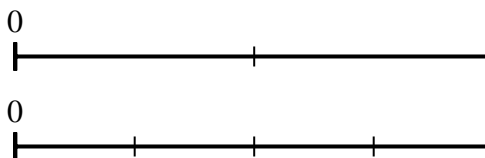


1. \_\_\_\_\_
2. \_\_\_\_\_
3. \_\_\_\_\_
4. \_\_\_\_\_
5. \_\_\_\_\_
6. \_\_\_\_\_
7. \_\_\_\_\_
8. \_\_\_\_\_



Use the number lines to answer the questions.

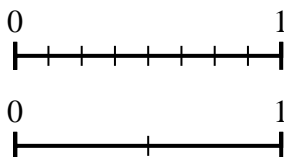
1) Using the number lines shown, what is the equivalent fraction to  $\frac{2}{2}$ ?



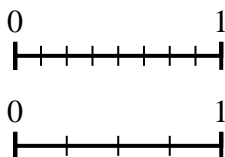
2) Using the number lines shown, what is the equivalent fraction to  $\frac{4}{8}$ ?



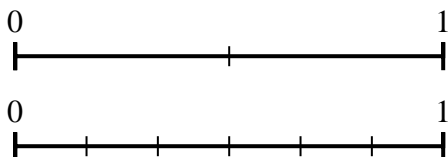
3) Using the number lines shown, what is the equivalent fraction to  $\frac{8}{8}$ ?



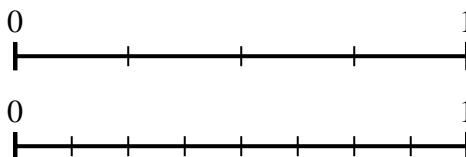
4) Using the number lines shown, what is the equivalent fraction to  $\frac{8}{8}$ ?



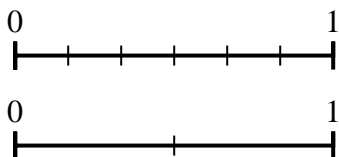
5) Using the number lines shown, what is the equivalent fraction to  $\frac{0}{2}$ ?



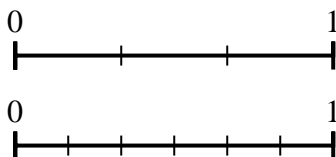
6) Using the number lines shown, what is the equivalent fraction to  $\frac{2}{4}$ ?



7) Using the number lines shown, what is the equivalent fraction to  $\frac{3}{6}$ ?



8) Using the number lines shown, what is the equivalent fraction to  $\frac{2}{3}$ ?



**Answers**

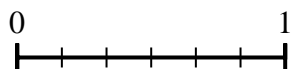
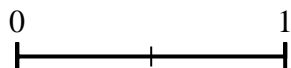
1.  $\frac{4}{4}$
2.  $\frac{1}{2}$
3.  $\frac{2}{2}$
4.  $\frac{4}{4}$
5.  $\frac{0}{6}$
6.  $\frac{4}{8}$
7.  $\frac{1}{2}$
8.  $\frac{4}{6}$



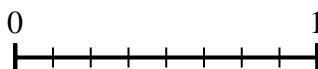
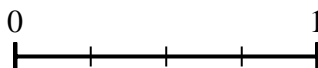
Use the number lines to answer the questions.

**Answers**

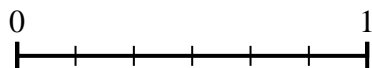
1) Using the number lines shown, what is the equivalent fraction to  $\frac{2}{2}$ ?



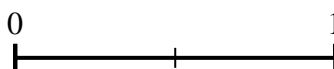
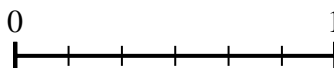
2) Using the number lines shown, what is the equivalent fraction to  $\frac{3}{4}$ ?



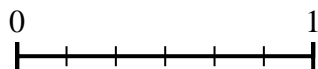
3) Using the number lines shown, what is the equivalent fraction to  $\frac{6}{6}$ ?



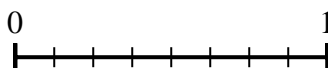
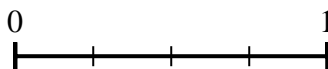
4) Using the number lines shown, what is the equivalent fraction to  $\frac{0}{6}$ ?



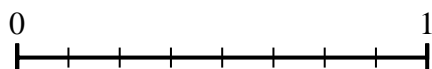
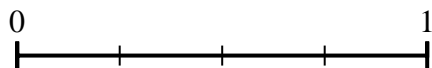
5) Using the number lines shown, what is the equivalent fraction to  $\frac{2}{6}$ ?



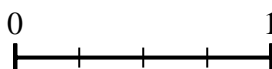
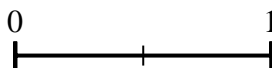
6) Using the number lines shown, what is the equivalent fraction to  $\frac{1}{4}$ ?



7) Using the number lines shown, what is the equivalent fraction to  $\frac{2}{4}$ ?



8) Using the number lines shown, what is the equivalent fraction to  $\frac{2}{2}$ ?

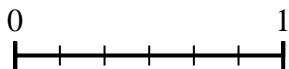
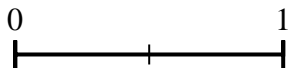


1. \_\_\_\_\_
2. \_\_\_\_\_
3. \_\_\_\_\_
4. \_\_\_\_\_
5. \_\_\_\_\_
6. \_\_\_\_\_
7. \_\_\_\_\_
8. \_\_\_\_\_

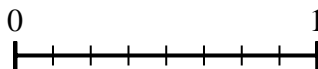
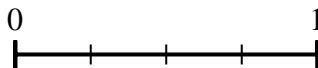


Use the number lines to answer the questions.

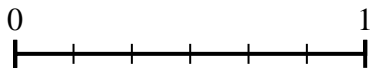
1) Using the number lines shown, what is the equivalent fraction to  $\frac{2}{2}$ ?



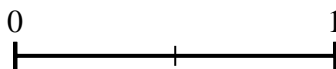
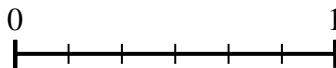
2) Using the number lines shown, what is the equivalent fraction to  $\frac{3}{4}$ ?



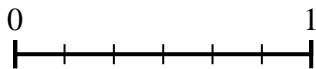
3) Using the number lines shown, what is the equivalent fraction to  $\frac{6}{6}$ ?



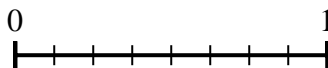
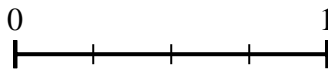
4) Using the number lines shown, what is the equivalent fraction to  $\frac{0}{6}$ ?



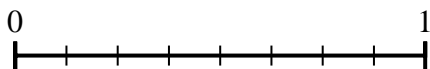
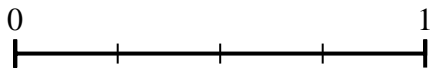
5) Using the number lines shown, what is the equivalent fraction to  $\frac{2}{6}$ ?



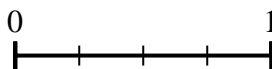
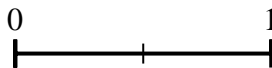
6) Using the number lines shown, what is the equivalent fraction to  $\frac{1}{4}$ ?



7) Using the number lines shown, what is the equivalent fraction to  $\frac{2}{4}$ ?



8) Using the number lines shown, what is the equivalent fraction to  $\frac{2}{2}$ ?



**Answers**

1.  $\frac{6}{6}$

2.  $\frac{6}{8}$

3.  $\frac{3}{3}$

4.  $\frac{0}{2}$

5.  $\frac{1}{3}$

6.  $\frac{2}{8}$

7.  $\frac{4}{8}$

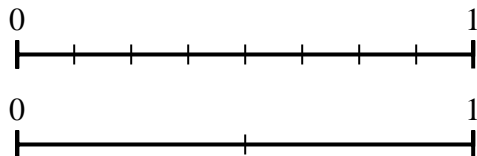
8.  $\frac{4}{4}$



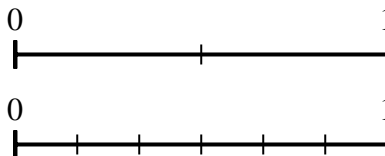
Use the number lines to answer the questions.

**Answers**

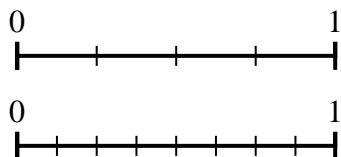
1) Using the number lines shown, what is the equivalent fraction to  $\frac{8}{8}$ ?



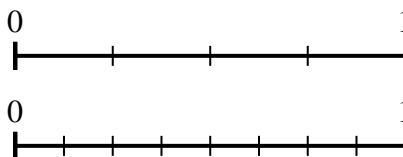
2) Using the number lines shown, what is the equivalent fraction to  $\frac{2}{2}$ ?



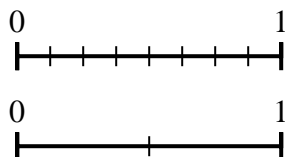
3) Using the number lines shown, what is the equivalent fraction to  $\frac{2}{4}$ ?



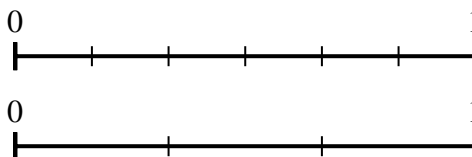
4) Using the number lines shown, what is the equivalent fraction to  $\frac{4}{4}$ ?



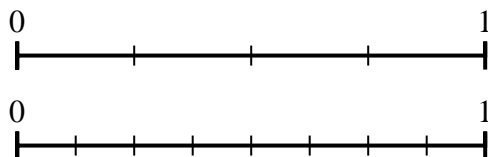
5) Using the number lines shown, what is the equivalent fraction to  $\frac{4}{8}$ ?



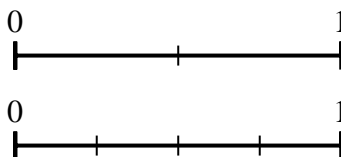
6) Using the number lines shown, what is the equivalent fraction to  $\frac{4}{6}$ ?



7) Using the number lines shown, what is the equivalent fraction to  $\frac{3}{4}$ ?



8) Using the number lines shown, what is the equivalent fraction to  $\frac{1}{2}$ ?

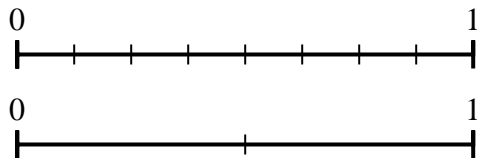


1. \_\_\_\_\_
2. \_\_\_\_\_
3. \_\_\_\_\_
4. \_\_\_\_\_
5. \_\_\_\_\_
6. \_\_\_\_\_
7. \_\_\_\_\_
8. \_\_\_\_\_

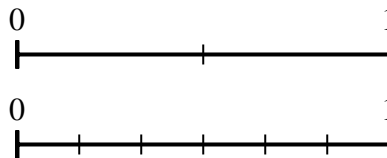


Use the number lines to answer the questions.

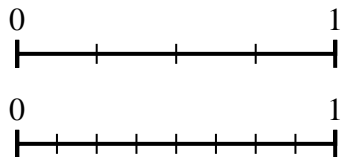
1) Using the number lines shown, what is the equivalent fraction to  $\frac{8}{8}$ ?



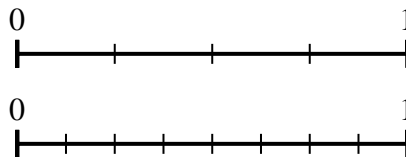
2) Using the number lines shown, what is the equivalent fraction to  $\frac{2}{2}$ ?



3) Using the number lines shown, what is the equivalent fraction to  $\frac{2}{4}$ ?



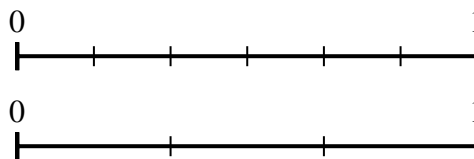
4) Using the number lines shown, what is the equivalent fraction to  $\frac{4}{4}$ ?



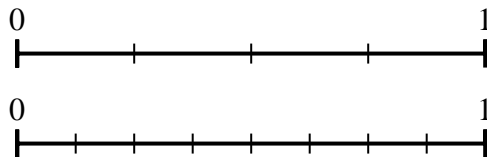
5) Using the number lines shown, what is the equivalent fraction to  $\frac{4}{8}$ ?



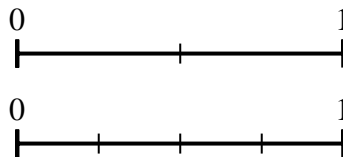
6) Using the number lines shown, what is the equivalent fraction to  $\frac{4}{6}$ ?



7) Using the number lines shown, what is the equivalent fraction to  $\frac{3}{4}$ ?



8) Using the number lines shown, what is the equivalent fraction to  $\frac{1}{2}$ ?



**Answers**

1.  $\frac{2}{2}$
2.  $\frac{6}{6}$
3.  $\frac{4}{8}$
4.  $\frac{8}{8}$
5.  $\frac{1}{2}$
6.  $\frac{2}{3}$
7.  $\frac{6}{8}$
8.  $\frac{2}{4}$

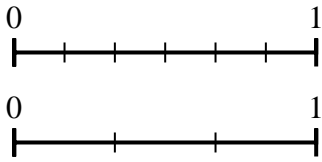




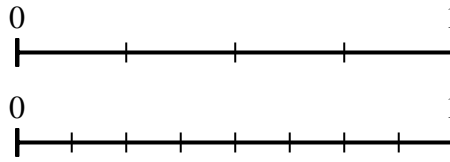
Use the number lines to answer the questions.

Answers

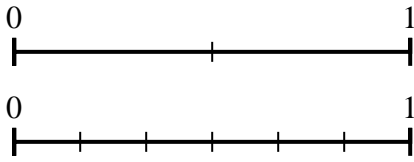
1) Using the number lines shown, what is the equivalent fraction to  $\frac{6}{6}$ ?



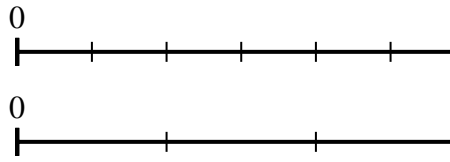
2) Using the number lines shown, what is the equivalent fraction to  $\frac{1}{4}$ ?



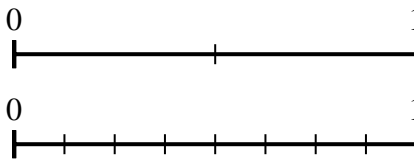
3) Using the number lines shown, what is the equivalent fraction to  $\frac{0}{2}$ ?



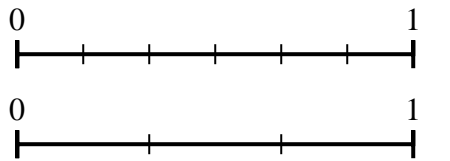
4) Using the number lines shown, what is the equivalent fraction to  $\frac{2}{6}$ ?



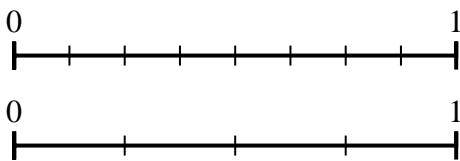
5) Using the number lines shown, what is the equivalent fraction to  $\frac{2}{2}$ ?



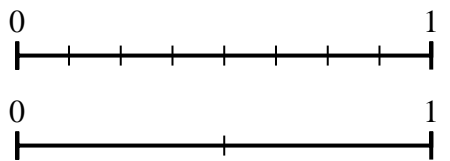
6) Using the number lines shown, what is the equivalent fraction to  $\frac{4}{6}$ ?



7) Using the number lines shown, what is the equivalent fraction to  $\frac{8}{8}$ ?



8) Using the number lines shown, what is the equivalent fraction to  $\frac{4}{8}$ ?


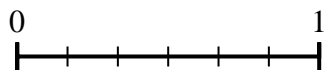


1. \_\_\_\_\_
2. \_\_\_\_\_
3. \_\_\_\_\_
4. \_\_\_\_\_
5. \_\_\_\_\_
6. \_\_\_\_\_
7. \_\_\_\_\_
8. \_\_\_\_\_

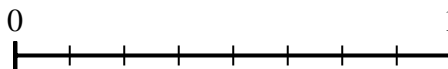
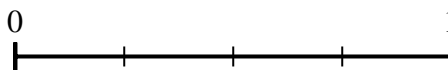


Use the number lines to answer the questions.

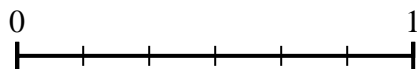
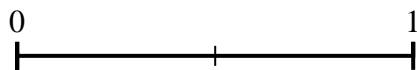
- 1) Using the number lines shown, what is the equivalent fraction to  $\frac{6}{6}$ ?




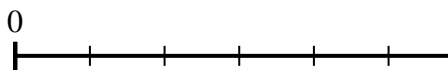
- 2) Using the number lines shown, what is the equivalent fraction to  $\frac{1}{4}$ ?



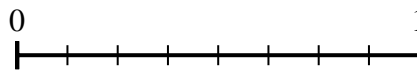
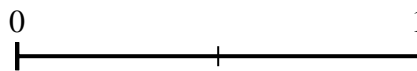
- 3) Using the number lines shown, what is the equivalent fraction to  $\frac{0}{2}$ ?




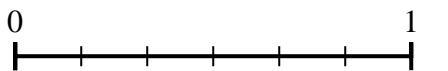
- 4) Using the number lines shown, what is the equivalent fraction to  $\frac{2}{6}$ ?



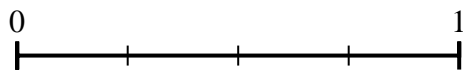
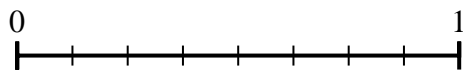
- 5) Using the number lines shown, what is the equivalent fraction to  $\frac{2}{2}$ ?



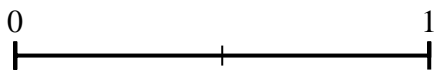
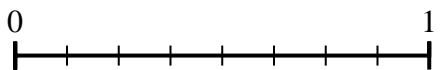
- 6) Using the number lines shown, what is the equivalent fraction to  $\frac{4}{6}$ ?



- 7) Using the number lines shown, what is the equivalent fraction to  $\frac{8}{8}$ ?



- 8) Using the number lines shown, what is the equivalent fraction to  $\frac{4}{8}$ ?



**Answers**

1.  $\frac{3}{3}$

2.  $\frac{2}{8}$

3.  $\frac{0}{6}$

4.  $\frac{1}{3}$

5.  $\frac{8}{8}$

6.  $\frac{2}{3}$

7.  $\frac{4}{4}$

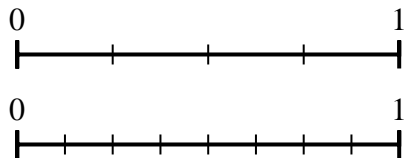
8.  $\frac{1}{2}$



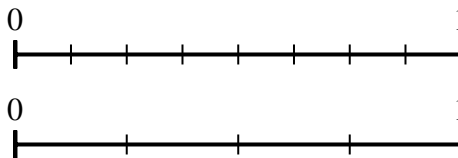
Use the number lines to answer the questions.

Answers

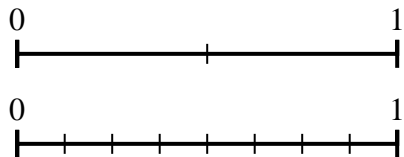
1) Using the number lines shown, what is the equivalent fraction to  $\frac{4}{4}$ ?



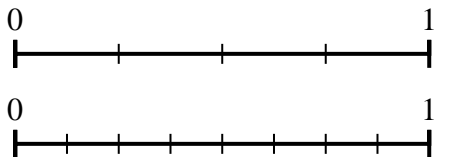
2) Using the number lines shown, what is the equivalent fraction to  $\frac{4}{8}$ ?



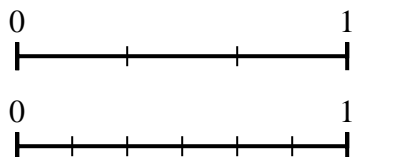
3) Using the number lines shown, what is the equivalent fraction to  $\frac{2}{2}$ ?



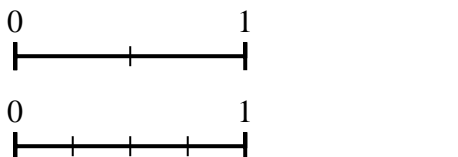
4) Using the number lines shown, what is the equivalent fraction to  $\frac{1}{4}$ ?



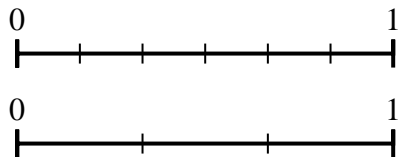
5) Using the number lines shown, what is the equivalent fraction to  $\frac{3}{3}$ ?



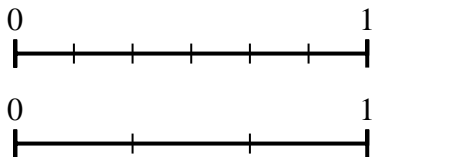
6) Using the number lines shown, what is the equivalent fraction to  $\frac{1}{2}$ ?



7) Using the number lines shown, what is the equivalent fraction to  $\frac{2}{6}$ ?



8) Using the number lines shown, what is the equivalent fraction to  $\frac{4}{6}$ ?

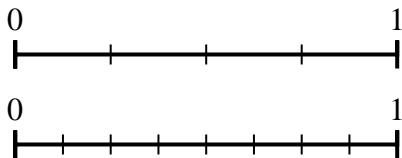


1. \_\_\_\_\_
2. \_\_\_\_\_
3. \_\_\_\_\_
4. \_\_\_\_\_
5. \_\_\_\_\_
6. \_\_\_\_\_
7. \_\_\_\_\_
8. \_\_\_\_\_

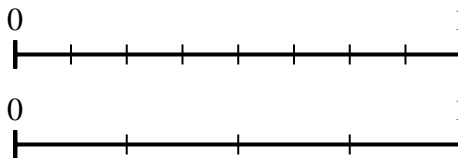


Use the number lines to answer the questions.

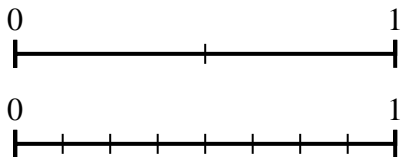
1) Using the number lines shown, what is the equivalent fraction to  $\frac{4}{4}$ ?



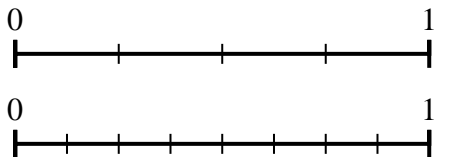
2) Using the number lines shown, what is the equivalent fraction to  $\frac{4}{8}$ ?



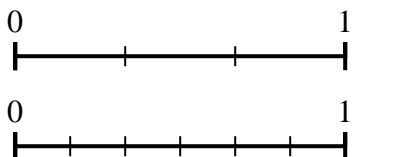
3) Using the number lines shown, what is the equivalent fraction to  $\frac{2}{2}$ ?



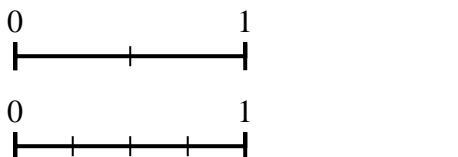
4) Using the number lines shown, what is the equivalent fraction to  $\frac{1}{4}$ ?



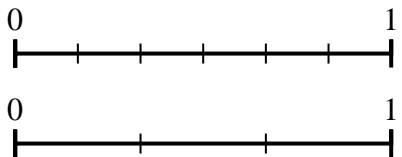
5) Using the number lines shown, what is the equivalent fraction to  $\frac{3}{3}$ ?



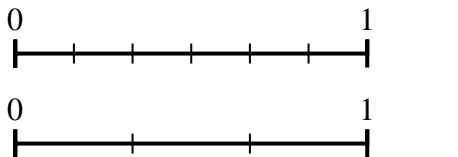
6) Using the number lines shown, what is the equivalent fraction to  $\frac{1}{2}$ ?



7) Using the number lines shown, what is the equivalent fraction to  $\frac{2}{6}$ ?



8) Using the number lines shown, what is the equivalent fraction to  $\frac{4}{6}$ ?



**Answers**

1.  $\frac{8}{8}$

2.  $\frac{2}{4}$

3.  $\frac{8}{8}$

4.  $\frac{2}{8}$

5.  $\frac{6}{6}$

6.  $\frac{2}{4}$

7.  $\frac{1}{3}$

8.  $\frac{2}{3}$