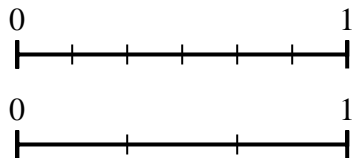




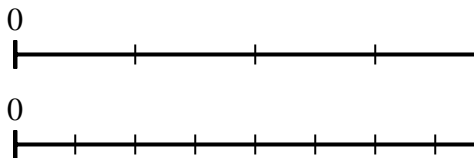
Use the number lines to answer the questions.

Answers

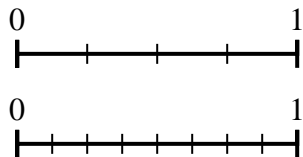
1) Using the number lines shown, what is the equivalent fraction to $\frac{4}{6}$?



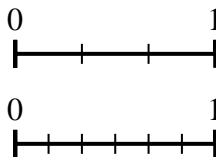
2) Using the number lines shown, what is the equivalent fraction to $\frac{1}{4}$?



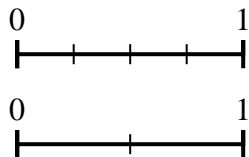
3) Using the number lines shown, what is the equivalent fraction to $\frac{2}{4}$?



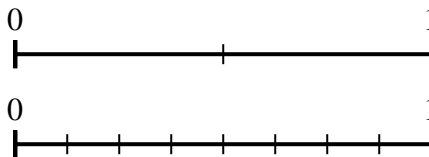
4) Using the number lines shown, what is the equivalent fraction to $\frac{1}{3}$?



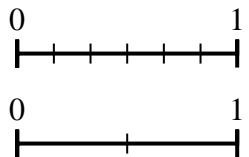
5) Using the number lines shown, what is the equivalent fraction to $\frac{4}{4}$?



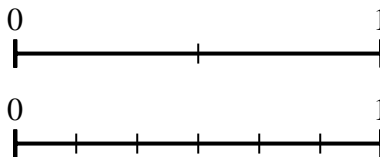
6) Using the number lines shown, what is the equivalent fraction to $\frac{1}{2}$?



7) Using the number lines shown, what is the equivalent fraction to $\frac{6}{6}$?



8) Using the number lines shown, what is the equivalent fraction to $\frac{1}{2}$?

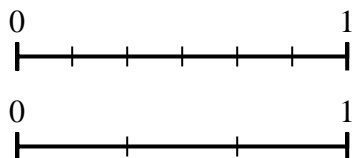


1. _____
2. _____
3. _____
4. _____
5. _____
6. _____
7. _____
8. _____

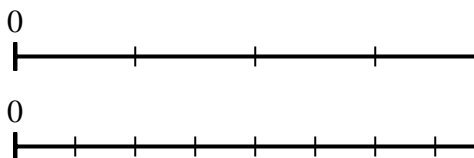


Use the number lines to answer the questions.

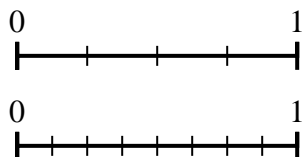
1) Using the number lines shown, what is the equivalent fraction to $\frac{4}{6}$?



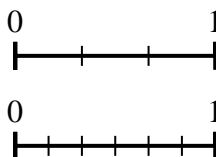
2) Using the number lines shown, what is the equivalent fraction to $\frac{1}{4}$?



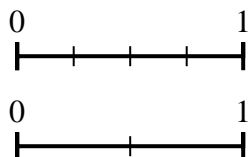
3) Using the number lines shown, what is the equivalent fraction to $\frac{2}{4}$?



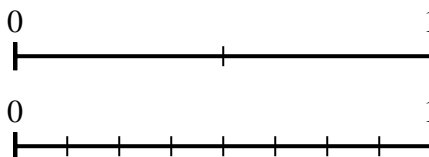
4) Using the number lines shown, what is the equivalent fraction to $\frac{1}{3}$?



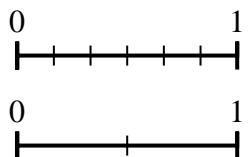
5) Using the number lines shown, what is the equivalent fraction to $\frac{4}{4}$?



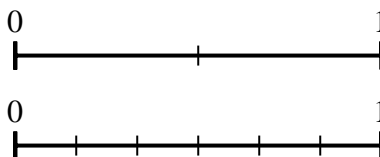
6) Using the number lines shown, what is the equivalent fraction to $\frac{1}{2}$?



7) Using the number lines shown, what is the equivalent fraction to $\frac{6}{6}$?



8) Using the number lines shown, what is the equivalent fraction to $\frac{1}{2}$?



Answers

1. $\frac{2}{3}$

2. $\frac{2}{8}$

3. $\frac{4}{8}$

4. $\frac{2}{6}$

5. $\frac{2}{2}$

6. $\frac{4}{8}$

7. $\frac{2}{2}$

8. $\frac{3}{6}$