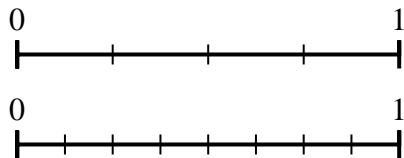




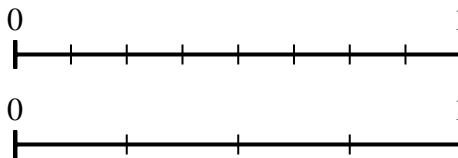
Use the number lines to answer the questions.

Answers

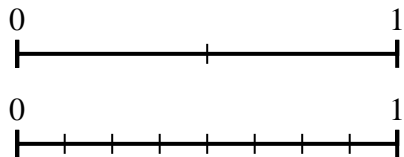
1) Using the number lines shown, what is the equivalent fraction to $\frac{4}{4}$?



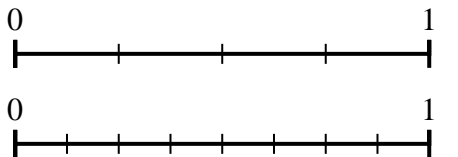
2) Using the number lines shown, what is the equivalent fraction to $\frac{4}{8}$?



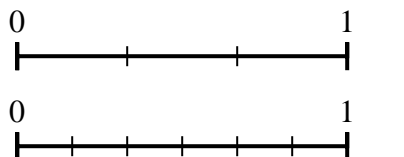
3) Using the number lines shown, what is the equivalent fraction to $\frac{2}{2}$?



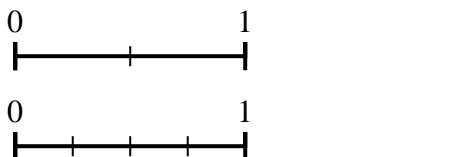
4) Using the number lines shown, what is the equivalent fraction to $\frac{1}{4}$?



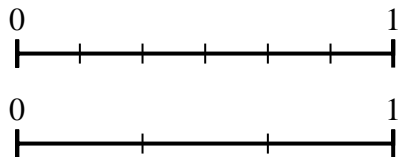
5) Using the number lines shown, what is the equivalent fraction to $\frac{3}{3}$?



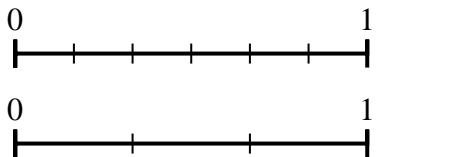
6) Using the number lines shown, what is the equivalent fraction to $\frac{1}{2}$?



7) Using the number lines shown, what is the equivalent fraction to $\frac{2}{6}$?



8) Using the number lines shown, what is the equivalent fraction to $\frac{4}{6}$?

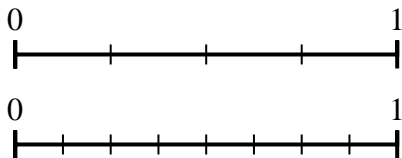


1. _____
2. _____
3. _____
4. _____
5. _____
6. _____
7. _____
8. _____

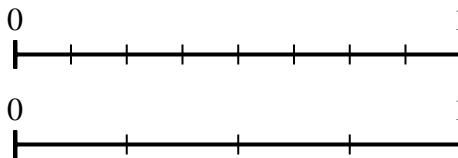


Use the number lines to answer the questions.

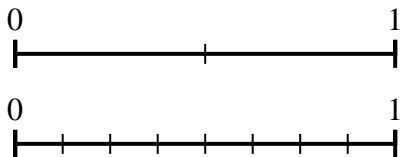
1) Using the number lines shown, what is the equivalent fraction to $\frac{4}{4}$?



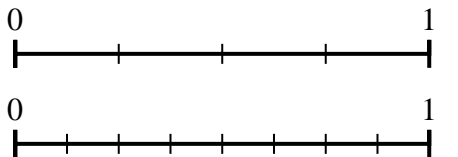
2) Using the number lines shown, what is the equivalent fraction to $\frac{4}{8}$?



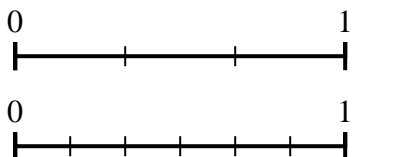
3) Using the number lines shown, what is the equivalent fraction to $\frac{2}{2}$?



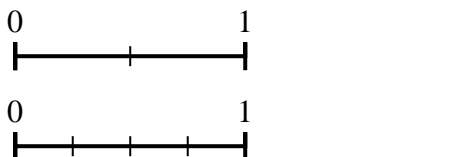
4) Using the number lines shown, what is the equivalent fraction to $\frac{1}{4}$?



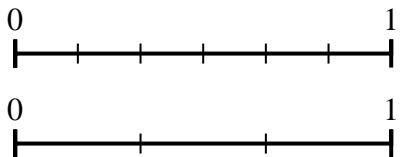
5) Using the number lines shown, what is the equivalent fraction to $\frac{3}{3}$?



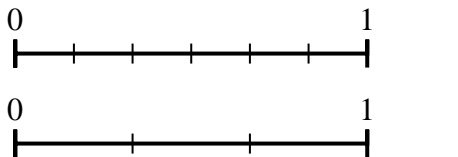
6) Using the number lines shown, what is the equivalent fraction to $\frac{1}{2}$?



7) Using the number lines shown, what is the equivalent fraction to $\frac{2}{6}$?



8) Using the number lines shown, what is the equivalent fraction to $\frac{4}{6}$?



Answers

1. $\frac{8}{8}$

2. $\frac{2}{4}$

3. $\frac{8}{8}$

4. $\frac{2}{8}$

5. $\frac{6}{6}$

6. $\frac{2}{4}$

7. $\frac{1}{3}$

8. $\frac{2}{3}$