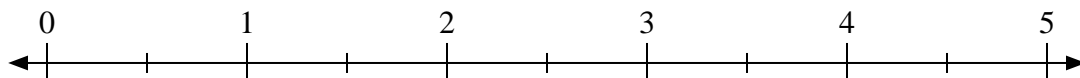


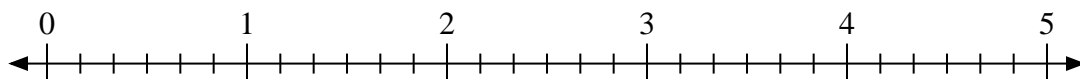


Use the numberline to solve.

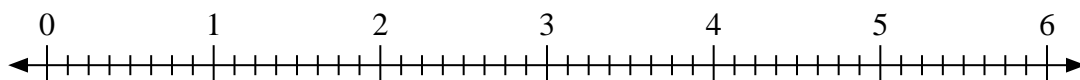
1)  $5 \div \frac{1}{2}$



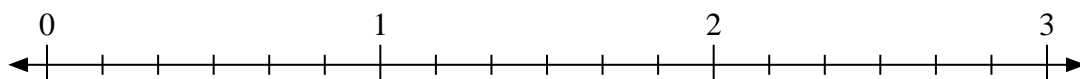
2)  $4 \div \frac{2}{6}$



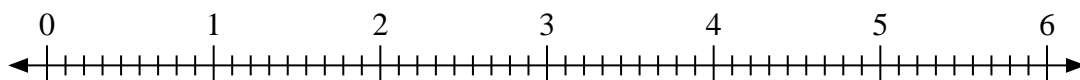
3)  $3 \div \frac{6}{8}$



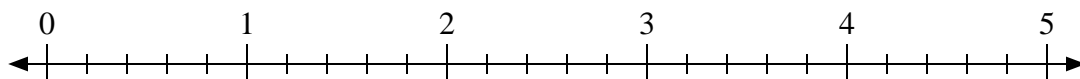
4)  $2 \div \frac{1}{6}$



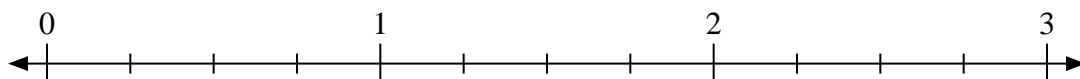
5)  $4 \div \frac{4}{9}$



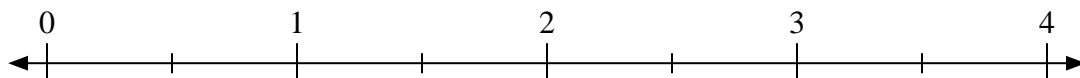
6)  $2 \div \frac{3}{5}$



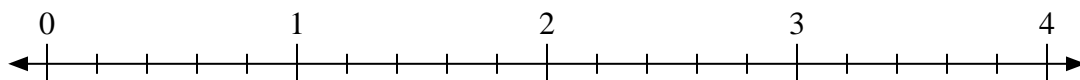
7)  $2 \div \frac{2}{4}$



8)  $4 \div \frac{1}{2}$



9)  $4 \div \frac{1}{5}$



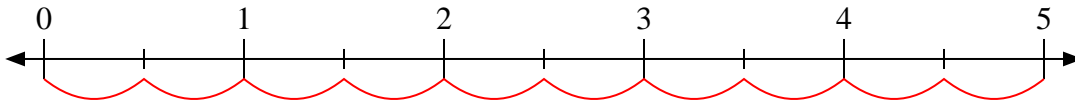
Answers

1. \_\_\_\_\_
2. \_\_\_\_\_
3. \_\_\_\_\_
4. \_\_\_\_\_
5. \_\_\_\_\_
6. \_\_\_\_\_
7. \_\_\_\_\_
8. \_\_\_\_\_
9. \_\_\_\_\_

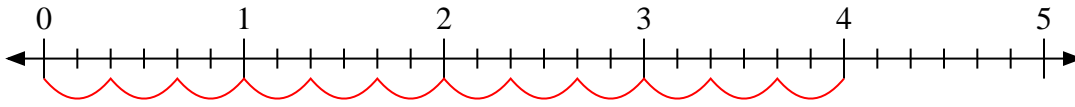


Use the numberline to solve.

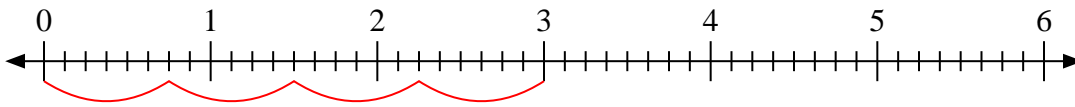
1)  $5 \div \frac{1}{2}$



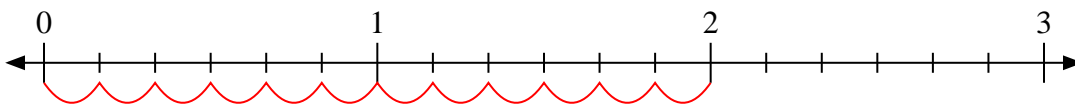
2)  $4 \div \frac{2}{6}$



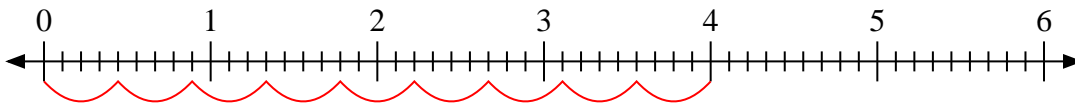
3)  $3 \div \frac{6}{8}$



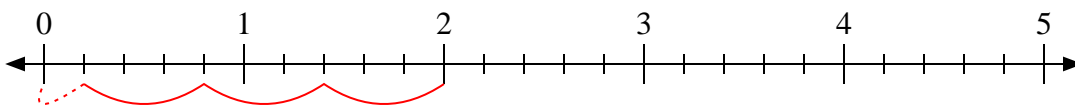
4)  $2 \div \frac{1}{6}$



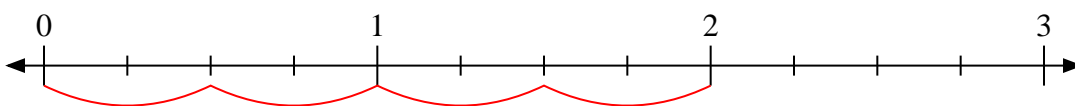
5)  $4 \div \frac{4}{9}$



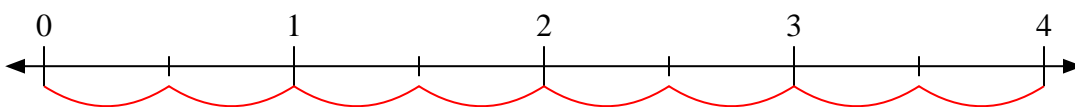
6)  $2 \div \frac{3}{5}$



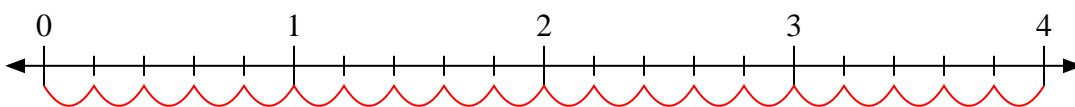
7)  $2 \div \frac{2}{4}$



8)  $4 \div \frac{1}{2}$



9)  $4 \div \frac{1}{5}$



Answers

1. 10

2. 12

3. 4

4. 12

5. 9

6.  $3 \frac{1}{3}$

7. 4

8. 8

9. 20