



Solve each problem by marking off the fractions. The first is completed for you.

**Answers**

Ex)  $6 \div \frac{1}{6} = ?$  This is the same as saying: How many  $\frac{1}{6}$  are there in 6 wholes?

Ex. **36**

1 Whole	1 Whole	1 Whole	1 Whole	1 Whole	1 Whole
<input type="checkbox"/>	<input type="checkbox"/>	<input type="checkbox"/>	<input type="checkbox"/>	<input type="checkbox"/>	<input type="checkbox"/>

1. \_\_\_\_\_

1)  $3 \div \frac{1}{6} =$

2. \_\_\_\_\_

1 Whole	1 Whole	1 Whole
<input type="checkbox"/>	<input type="checkbox"/>	<input type="checkbox"/>

3. \_\_\_\_\_

2)  $6 \div \frac{1}{4} =$

4. \_\_\_\_\_

1 Whole	1 Whole	1 Whole	1 Whole	1 Whole	1 Whole
<input type="checkbox"/>	<input type="checkbox"/>	<input type="checkbox"/>	<input type="checkbox"/>	<input type="checkbox"/>	<input type="checkbox"/>

5. \_\_\_\_\_

3)  $4 \div \frac{1}{2} =$

6. \_\_\_\_\_

1 Whole	1 Whole	1 Whole	1 Whole
<input type="checkbox"/>	<input type="checkbox"/>	<input type="checkbox"/>	<input type="checkbox"/>

7. \_\_\_\_\_

4)  $2 \div \frac{1}{5} =$

8. \_\_\_\_\_

1 Whole	1 Whole
<input type="checkbox"/>	<input type="checkbox"/>

9. \_\_\_\_\_

5)  $5 \div \frac{1}{5} =$

1 Whole	1 Whole	1 Whole	1 Whole	1 Whole
<input type="checkbox"/>	<input type="checkbox"/>	<input type="checkbox"/>	<input type="checkbox"/>	<input type="checkbox"/>

6)  $3 \div \frac{1}{5} =$

1 Whole	1 Whole	1 Whole
<input type="checkbox"/>	<input type="checkbox"/>	<input type="checkbox"/>

7)  $2 \div \frac{1}{7} =$

1 Whole	1 Whole
<input type="checkbox"/>	<input type="checkbox"/>

8)  $6 \div \frac{1}{7} =$

1 Whole	1 Whole	1 Whole	1 Whole	1 Whole	1 Whole
<input type="checkbox"/>	<input type="checkbox"/>	<input type="checkbox"/>	<input type="checkbox"/>	<input type="checkbox"/>	<input type="checkbox"/>


9)  $6 \div \frac{1}{3} =$

1 Whole	1 Whole	1 Whole	1 Whole	1 Whole	1 Whole
<input type="checkbox"/>	<input type="checkbox"/>	<input type="checkbox"/>	<input type="checkbox"/>	<input type="checkbox"/>	<input type="checkbox"/>

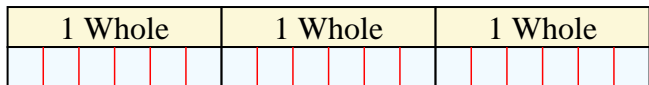


Solve each problem by marking off the fractions. The first is completed for you.

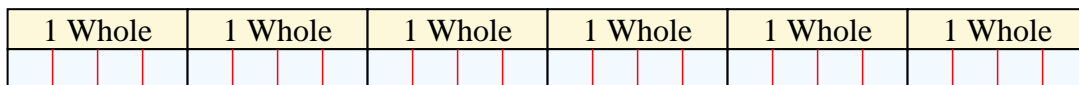
Ex)  $6 \div \frac{1}{6} = ?$  This is the same as saying: How many  $\frac{1}{6}$  are the in 6 wholes?




1)  $3 \div \frac{1}{6} =$  This is the same as saying: How many  $\frac{1}{6}$  are the in 3 wholes?




2)  $6 \div \frac{1}{4} =$  This is the same as saying: How many  $\frac{1}{4}$  are the in 6 wholes?



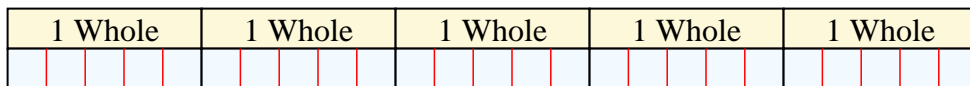
3)  $4 \div \frac{1}{2} =$  This is the same as saying: How many  $\frac{1}{2}$  are the in 4 wholes?



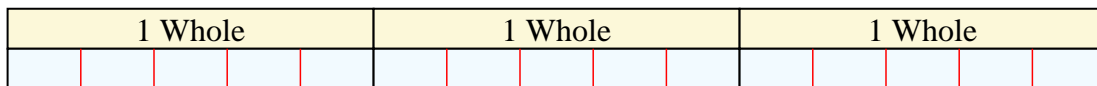
4)  $2 \div \frac{1}{5} =$  This is the same as saying: How many  $\frac{1}{5}$  are the in 2 wholes?



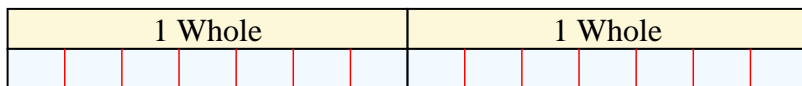
5)  $5 \div \frac{1}{5} =$  This is the same as saying: How many  $\frac{1}{5}$  are the in 5 wholes?



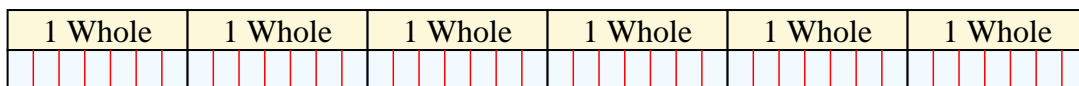
6)  $3 \div \frac{1}{5} =$  This is the same as saying: How many  $\frac{1}{5}$  are the in 3 wholes?



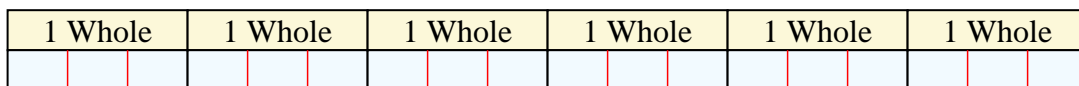
7)  $2 \div \frac{1}{7} =$  This is the same as saying: How many  $\frac{1}{7}$  are the in 2 wholes?



8)  $6 \div \frac{1}{7} =$  This is the same as saying: How many  $\frac{1}{7}$  are the in 6 wholes?



9)  $6 \div \frac{1}{3} =$  This is the same as saying: How many  $\frac{1}{3}$  are the in 6 wholes?



**Answers**

Ex. 36

1. 18

2. 24

3. 8

4. 10

5. 25

6. 15

7. 14

8. 42

9. 18