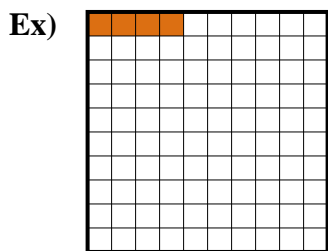






Determine the value written as a fraction , decimal & a percent.



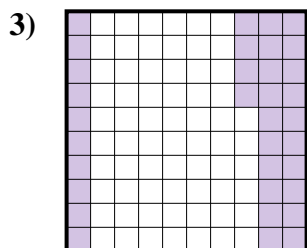
fraction $\frac{4}{100}$
 decimal 0.04
 percent 4



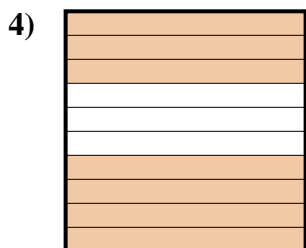
fraction _____
 decimal _____
 percent _____



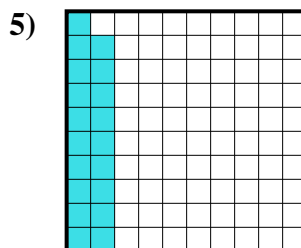
fraction _____
 decimal _____
 percent _____



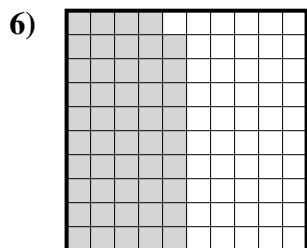
fraction _____
 decimal _____
 percent _____



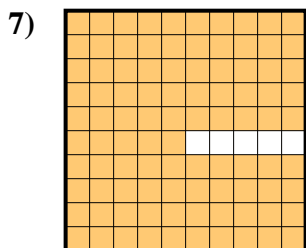
fraction _____
 decimal _____
 percent _____



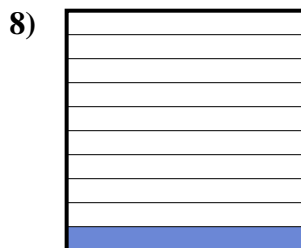
fraction _____
 decimal _____
 percent _____



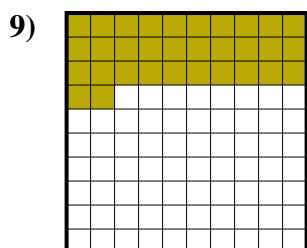
fraction _____
 decimal _____
 percent _____



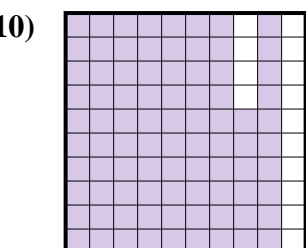
fraction _____
 decimal _____
 percent _____




fraction _____
 decimal _____
 percent _____



fraction _____
 decimal _____
 percent _____



fraction _____
 decimal _____
 percent _____



fraction _____
 decimal _____
 percent _____

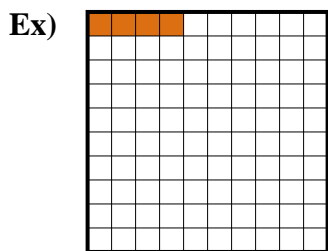
Answers

Ex. $\frac{4}{100}$ 0.04 4%


1. _____
2. _____
3. _____
4. _____
5. _____
6. _____
7. _____
8. _____
9. _____
10. _____
11. _____




Determine the value written as a fraction , decimal & a percent.



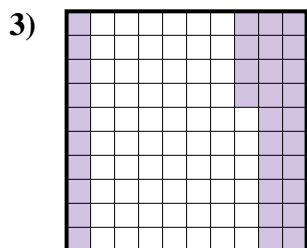
fraction $\frac{4}{100}$
 decimal 0.04
 percent 4



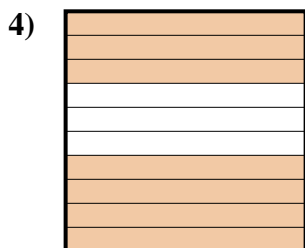
fraction $\frac{5}{10}$
 decimal 0.5
 percent 50




fraction $\frac{9}{10}$
 decimal 0.9
 percent 90



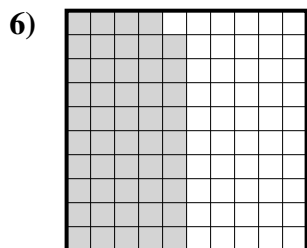
fraction $\frac{34}{100}$
 decimal 0.34
 percent 34



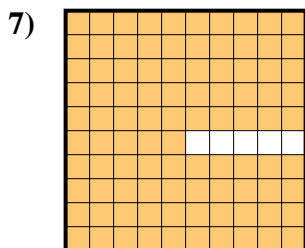
fraction $\frac{7}{10}$
 decimal 0.7
 percent 70



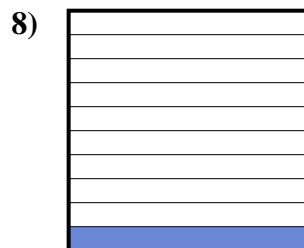
fraction $\frac{19}{100}$
 decimal 0.19
 percent 19



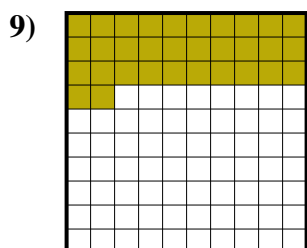
fraction $\frac{49}{100}$
 decimal 0.49
 percent 49



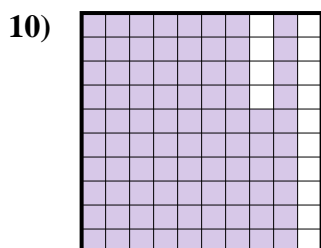
fraction $\frac{95}{100}$
 decimal 0.95
 percent 95



fraction $\frac{1}{10}$
 decimal 0.1
 percent 10



fraction $\frac{32}{100}$
 decimal 0.32
 percent 32



fraction $\frac{86}{100}$
 decimal 0.86
 percent 86



fraction $\frac{6}{10}$
 decimal 0.6
 percent 60

Answers

| | | | |
|-----|------------------|-------------|------------|
| Ex. | $\frac{4}{100}$ | 0.04 | 4% |
| 1. | $\frac{5}{10}$ | 0.5 | 50% |
| 2. | $\frac{9}{10}$ | 0.9 | 90% |
| 3. | $\frac{34}{100}$ | 0.34 | 34% |
| 4. | $\frac{7}{10}$ | 0.7 | 70% |
| 5. | $\frac{19}{100}$ | 0.19 | 19% |
| 6. | $\frac{49}{100}$ | 0.49 | 49% |
| 7. | $\frac{95}{100}$ | 0.95 | 95% |
| 8. | $\frac{1}{10}$ | 0.1 | 10% |
| 9. | $\frac{32}{100}$ | 0.32 | 32% |
| 10. | $\frac{86}{100}$ | 0.86 | 86% |
| 11. | $\frac{6}{10}$ | 0.6 | 60% |