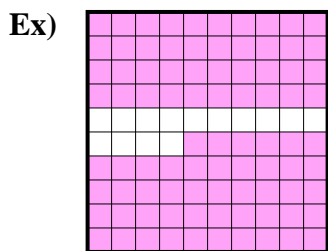





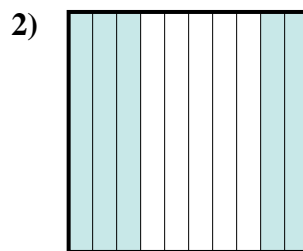
Determine the value written as a fraction , decimal & a percent.



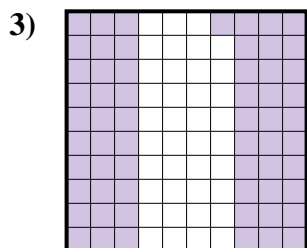
fraction $\frac{86}{100}$
 decimal 0.86
 percent 86



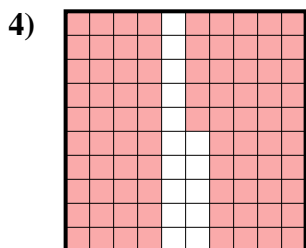
fraction $\frac{2}{10}$
 decimal 0.2
 percent 20



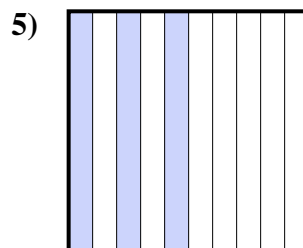
fraction $\frac{5}{10}$
 decimal 0.5
 percent 50



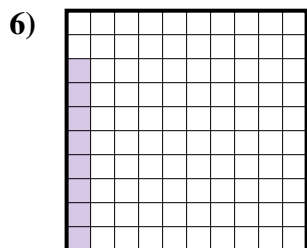
fraction $\frac{61}{100}$
 decimal 0.61
 percent 61



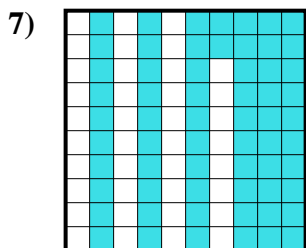
fraction $\frac{85}{100}$
 decimal 0.85
 percent 85



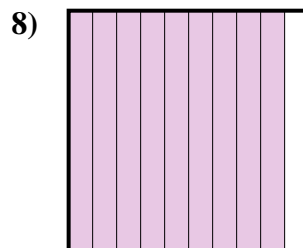
fraction $\frac{3}{10}$
 decimal 0.3
 percent 30



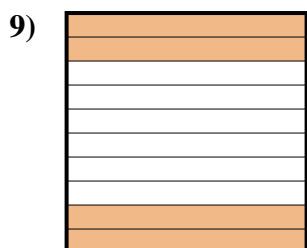
fraction $\frac{8}{100}$
 decimal 0.08
 percent 8



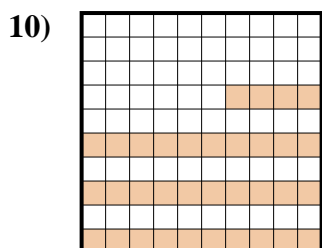
fraction $\frac{62}{100}$
 decimal 0.62
 percent 62



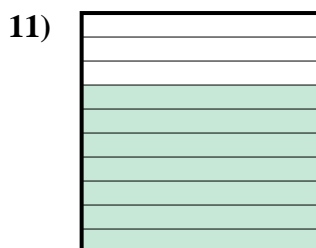
fraction $\frac{9}{10}$
 decimal 0.9
 percent 90



fraction $\frac{4}{10}$
 decimal 0.4
 percent 40



fraction $\frac{34}{100}$
 decimal 0.34
 percent 34



fraction $\frac{7}{10}$
 decimal 0.7
 percent 70

Answers

Ex.	$\frac{86}{100}$	0.86	86%
1.	$\frac{2}{10}$	0.2	20%
2.	$\frac{5}{10}$	0.5	50%
3.	$\frac{61}{100}$	0.61	61%
4.	$\frac{85}{100}$	0.85	85%
5.	$\frac{3}{10}$	0.3	30%
6.	$\frac{8}{100}$	0.08	8%
7.	$\frac{62}{100}$	0.62	62%
8.	$\frac{9}{10}$	0.9	90%
9.	$\frac{4}{10}$	0.4	40%
10.	$\frac{34}{100}$	0.34	34%
11.	$\frac{7}{10}$	0.7	70%