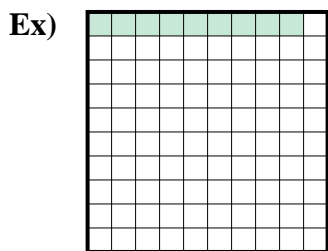
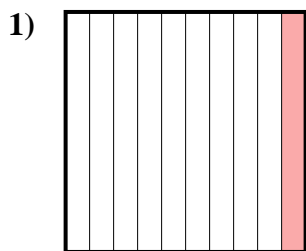




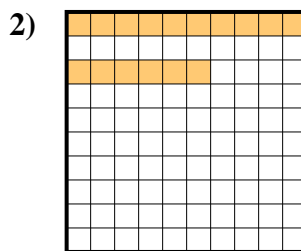
Determine the value written as a fraction , decimal & a percent.



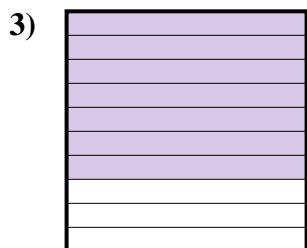
fraction $\frac{9}{100}$
 decimal 0.09
 percent 9



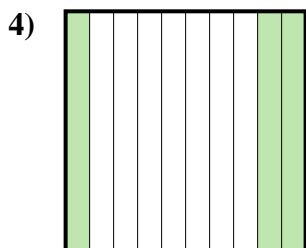
fraction $\frac{1}{10}$
 decimal 0.1
 percent 10



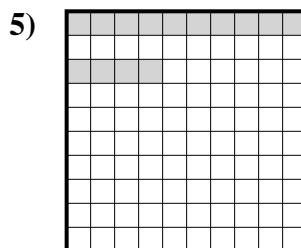
fraction $\frac{16}{100}$
 decimal 0.16
 percent 16



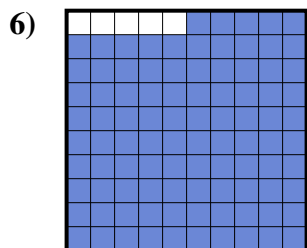
fraction $\frac{7}{10}$
 decimal 0.7
 percent 70



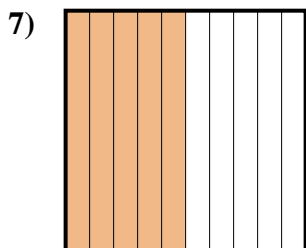
fraction $\frac{3}{10}$
 decimal 0.3
 percent 30



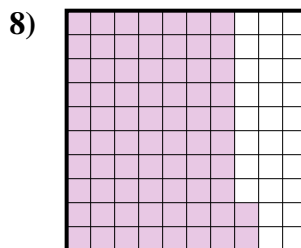
fraction $\frac{14}{100}$
 decimal 0.14
 percent 14




fraction $\frac{95}{100}$
 decimal 0.95
 percent 95



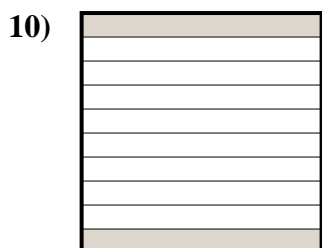
fraction $\frac{5}{10}$
 decimal 0.5
 percent 50



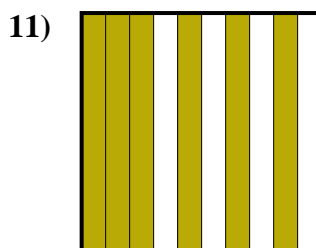
fraction $\frac{72}{100}$
 decimal 0.72
 percent 72



fraction $\frac{4}{10}$
 decimal 0.4
 percent 40



fraction $\frac{2}{10}$
 decimal 0.2
 percent 20



fraction $\frac{6}{10}$
 decimal 0.6
 percent 60

Answers

Ex.	$\frac{9}{100}$	0.09	9%
1.	$\frac{1}{10}$	0.1	10%
2.	$\frac{16}{100}$	0.16	16%
3.	$\frac{7}{10}$	0.7	70%
4.	$\frac{3}{10}$	0.3	30%
5.	$\frac{14}{100}$	0.14	14%
6.	$\frac{95}{100}$	0.95	95%
7.	$\frac{5}{10}$	0.5	50%
8.	$\frac{72}{100}$	0.72	72%
9.	$\frac{4}{10}$	0.4	40%
10.	$\frac{2}{10}$	0.2	20%
11.	$\frac{6}{10}$	0.6	60%