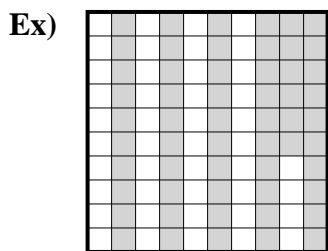
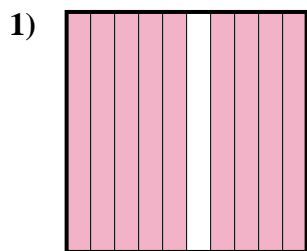




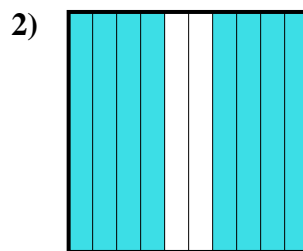
Determine the value written as a fraction , decimal & a percent.



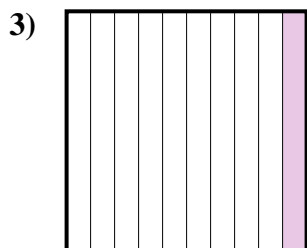
fraction $\frac{56}{100}$
 decimal 0.56
 percent 56



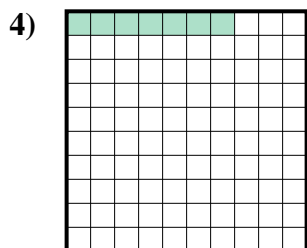
fraction $\frac{9}{10}$
 decimal 0.9
 percent 90



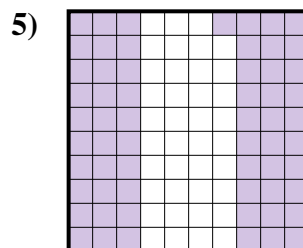
fraction $\frac{8}{10}$
 decimal 0.8
 percent 80




fraction $\frac{1}{10}$
 decimal 0.1
 percent 10



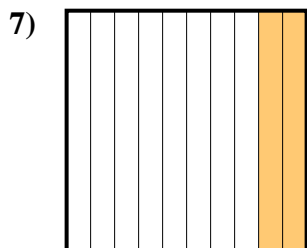
fraction $\frac{7}{100}$
 decimal 0.07
 percent 7




fraction $\frac{61}{100}$
 decimal 0.61
 percent 61




fraction $\frac{5}{10}$
 decimal 0.5
 percent 50



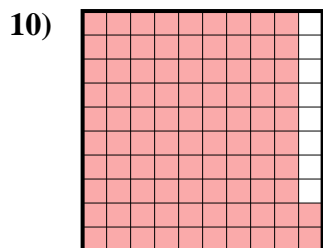
fraction $\frac{2}{10}$
 decimal 0.2
 percent 20



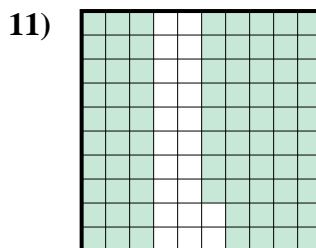
fraction $\frac{3}{10}$
 decimal 0.3
 percent 30



fraction $\frac{6}{10}$
 decimal 0.6
 percent 60



fraction $\frac{92}{100}$
 decimal 0.92
 percent 92



fraction $\frac{78}{100}$
 decimal 0.78
 percent 78

Answers

Ex.	$\frac{56}{100}$	0.56	56%
1.	$\frac{9}{10}$	0.9	90%
2.	$\frac{8}{10}$	0.8	80%
3.	$\frac{1}{10}$	0.1	10%
4.	$\frac{7}{100}$	0.07	7%
5.	$\frac{61}{100}$	0.61	61%
6.	$\frac{5}{10}$	0.5	50%
7.	$\frac{2}{10}$	0.2	20%
8.	$\frac{3}{10}$	0.3	30%
9.	$\frac{6}{10}$	0.6	60%
10.	$\frac{92}{100}$	0.92	92%
11.	$\frac{78}{100}$	0.78	78%