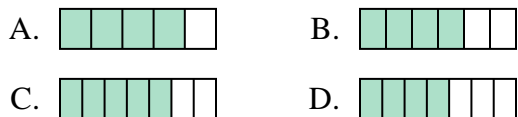




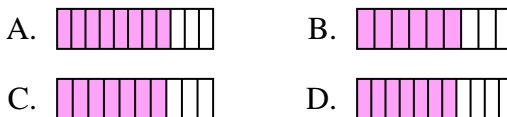
Determine which choice best answers each question.

**Answers**

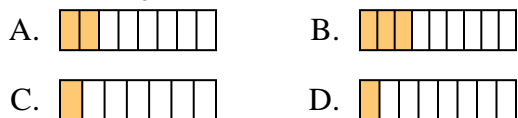
1) Which of the shapes below is shaded to represent  $\frac{4}{6}$ ?



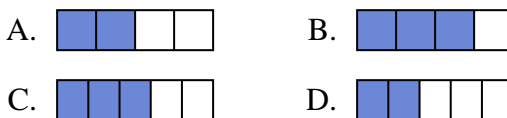
2) Which of the shapes below is shaded to represent  $\frac{7}{10}$ ?



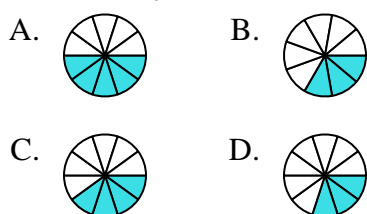
3) Which of the shapes below is shaded to represent  $\frac{2}{8}$ ?



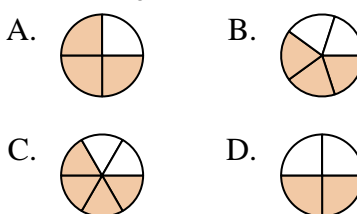
4) Which of the shapes below is shaded to represent  $\frac{2}{4}$ ?



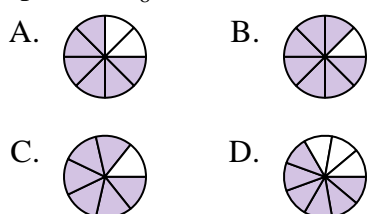
5) Which of the shapes below is shaded to represent  $\frac{4}{10}$ ?



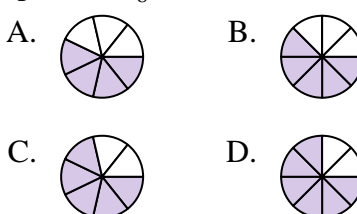
6) Which of the shapes below is shaded to represent  $\frac{3}{5}$ ?



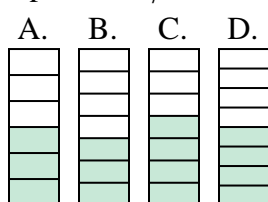
7) Which of the shapes below is shaded to represent  $\frac{6}{8}$ ?



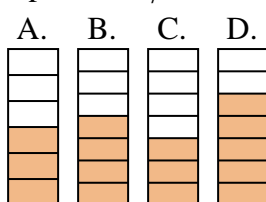
8) Which of the shapes below is shaded to represent  $\frac{5}{8}$ ?



9) Which of the shapes below is shaded to represent  $\frac{3}{7}$ ?



10) Which of the shapes below is shaded to represent  $\frac{4}{7}$ ?

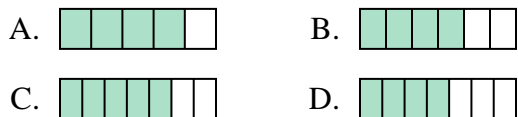


1. \_\_\_\_\_
2. \_\_\_\_\_
3. \_\_\_\_\_
4. \_\_\_\_\_
5. \_\_\_\_\_
6. \_\_\_\_\_
7. \_\_\_\_\_
8. \_\_\_\_\_
9. \_\_\_\_\_
10. \_\_\_\_\_

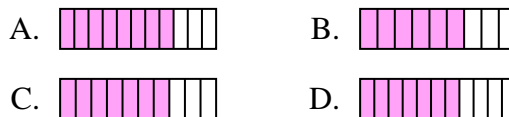


Determine which choice best answers each question.

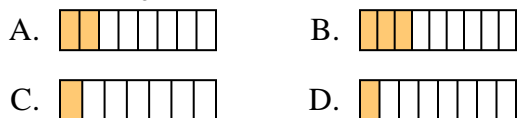
1) Which of the shapes below is shaded to represent  $\frac{4}{6}$ ?



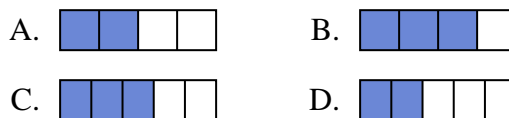
2) Which of the shapes below is shaded to represent  $\frac{7}{10}$ ?



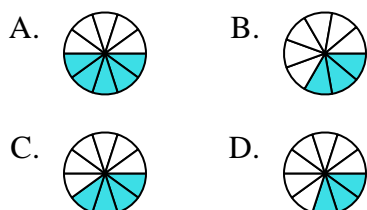
3) Which of the shapes below is shaded to represent  $\frac{2}{8}$ ?



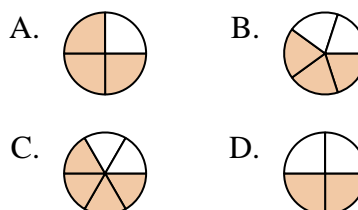
4) Which of the shapes below is shaded to represent  $\frac{2}{4}$ ?



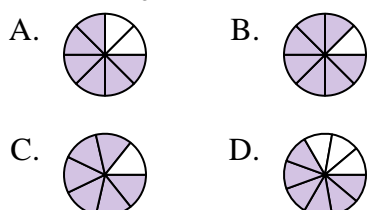
5) Which of the shapes below is shaded to represent  $\frac{4}{10}$ ?



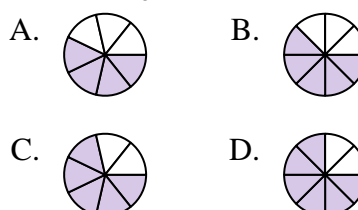
6) Which of the shapes below is shaded to represent  $\frac{3}{5}$ ?



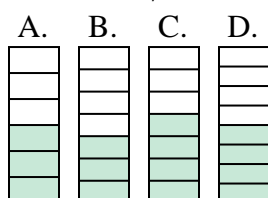
7) Which of the shapes below is shaded to represent  $\frac{6}{8}$ ?



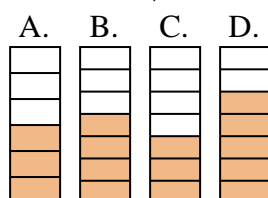
8) Which of the shapes below is shaded to represent  $\frac{5}{8}$ ?



9) Which of the shapes below is shaded to represent  $\frac{3}{7}$ ?



10) Which of the shapes below is shaded to represent  $\frac{4}{7}$ ?



**Answers**

1.     **B**
2.     **C**
3.     **A**
4.     **A**
5.     **C**
6.     **B**
7.     **A**
8.     **B**
9.     **B**
10.     **B**