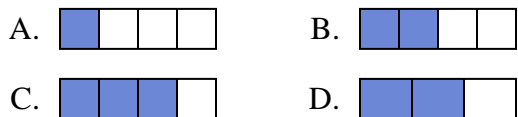




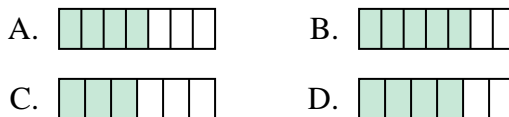
Determine which choice best answers each question.

**Answers**

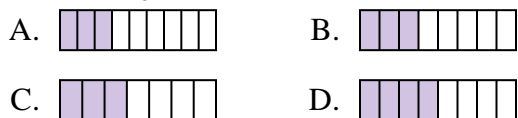
1) Which of the shapes below is shaded to represent  $\frac{2}{4}$ ?



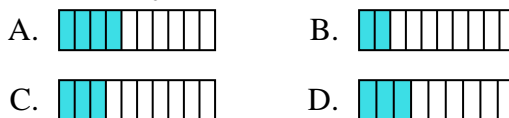
2) Which of the shapes below is shaded to represent  $\frac{4}{6}$ ?



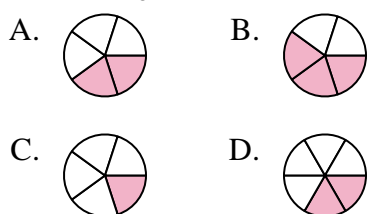
3) Which of the shapes below is shaded to represent  $\frac{3}{8}$ ?



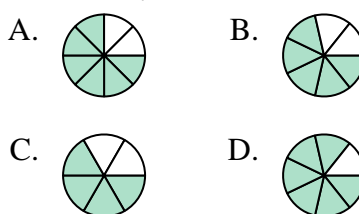
4) Which of the shapes below is shaded to represent  $\frac{3}{10}$ ?



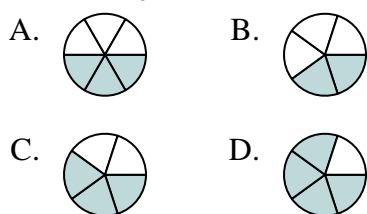
5) Which of the shapes below is shaded to represent  $\frac{2}{5}$ ?



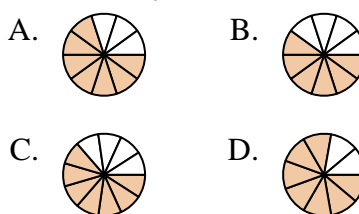
6) Which of the shapes below is shaded to represent  $\frac{5}{7}$ ?



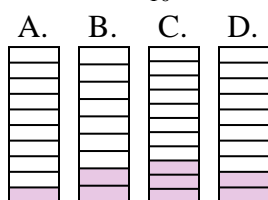
7) Which of the shapes below is shaded to represent  $\frac{3}{5}$ ?



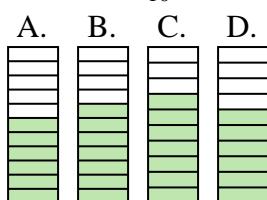
8) Which of the shapes below is shaded to represent  $\frac{7}{10}$ ?



9) Which of the shapes below is shaded to represent  $\frac{2}{10}$ ?



10) Which of the shapes below is shaded to represent  $\frac{6}{10}$ ?







1. \_\_\_\_\_
2. \_\_\_\_\_
3. \_\_\_\_\_
4. \_\_\_\_\_
5. \_\_\_\_\_
6. \_\_\_\_\_
7. \_\_\_\_\_
8. \_\_\_\_\_
9. \_\_\_\_\_
10. \_\_\_\_\_







Determine which choice best answers each question.





1) Which of the shapes below is shaded to represent  $\frac{2}{4}$ ?

- A.  B.   
 C.  D. 





3) Which of the shapes below is shaded to represent  $\frac{3}{8}$ ?

- A.  B.   
 C.  D. 





5) Which of the shapes below is shaded to represent  $\frac{2}{5}$ ?

- A.  B.   
 C.  D. 





7) Which of the shapes below is shaded to represent  $\frac{3}{5}$ ?

- A.  B.   
 C.  D. 





9) Which of the shapes below is shaded to represent  $\frac{2}{10}$ ?

- A.  B.   
 C.  D. 





2) Which of the shapes below is shaded to represent  $\frac{4}{6}$ ?

- A.  B.   
 C.  D. 





4) Which of the shapes below is shaded to represent  $\frac{3}{10}$ ?

- A.  B.   
 C.  D. 





6) Which of the shapes below is shaded to represent  $\frac{5}{7}$ ?

- A.  B.   
 C.  D. 

8) Which of the shapes below is shaded to represent  $\frac{7}{10}$ ?

- A.  B.   
 C.  D. 

10) Which of the shapes below is shaded to represent  $\frac{6}{10}$ ?

- A.  B.   
 C.  D. 

**Answers**

1.     **B**      
 2.     **D**      
 3.     **B**      
 4.     **C**      
 5.     **A**      
 6.     **B**      
 7.     **C**      
 8.     **A**      
 9.     **D**      
 10.     **D**