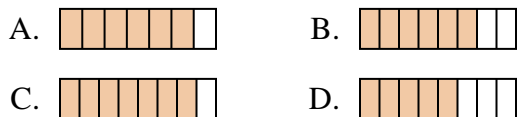




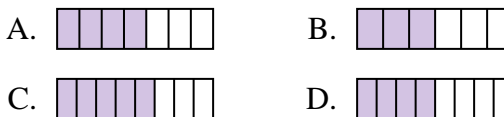
Determine which choice best answers each question.

Answers

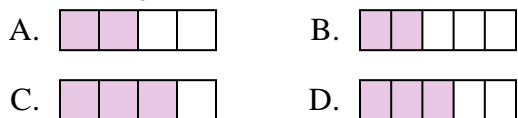
1) Which of the shapes below is shaded to represent $\frac{6}{8}$?



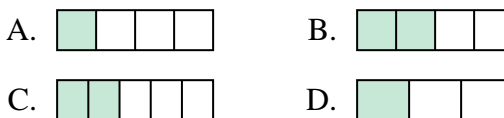
2) Which of the shapes below is shaded to represent $\frac{4}{7}$?



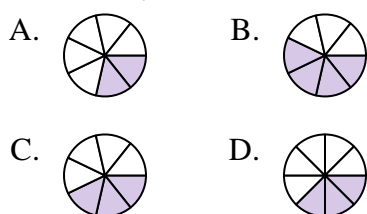
3) Which of the shapes below is shaded to represent $\frac{3}{5}$?



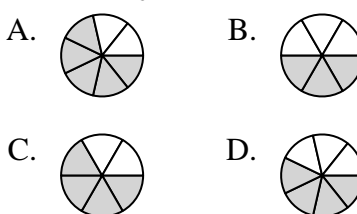
4) Which of the shapes below is shaded to represent $\frac{2}{4}$?



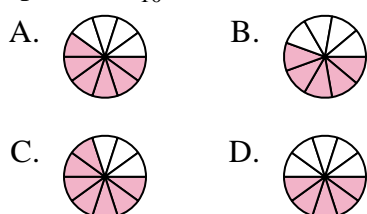
5) Which of the shapes below is shaded to represent $\frac{3}{7}$?



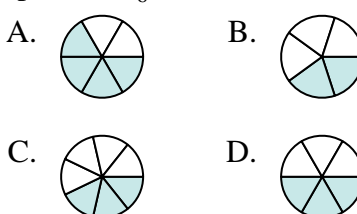
6) Which of the shapes below is shaded to represent $\frac{4}{6}$?



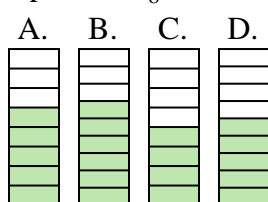
7) Which of the shapes below is shaded to represent $\frac{6}{10}$?



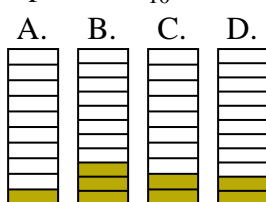
8) Which of the shapes below is shaded to represent $\frac{3}{6}$?



9) Which of the shapes below is shaded to represent $\frac{5}{8}$?



10) Which of the shapes below is shaded to represent $\frac{2}{10}$?





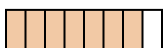
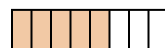
1. _____
2. _____
3. _____
4. _____
5. _____
6. _____
7. _____
8. _____
9. _____
10. _____



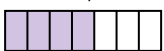
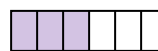

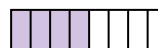
Determine which choice best answers each question.

Answers

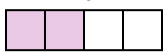
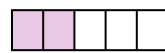


1) Which of the shapes below is shaded to represent $\frac{6}{8}$?

- A.  B. 
 C.  D. 

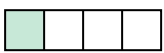
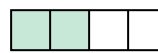
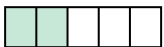

2) Which of the shapes below is shaded to represent $\frac{4}{7}$?

- A.  B. 
 C.  D. 





3) Which of the shapes below is shaded to represent $\frac{3}{5}$?

- A.  B. 
 C.  D. 





4) Which of the shapes below is shaded to represent $\frac{2}{4}$?

- A.  B. 
 C.  D. 





5) Which of the shapes below is shaded to represent $\frac{3}{7}$?

- A.  B. 
 C.  D. 





6) Which of the shapes below is shaded to represent $\frac{4}{6}$?

- A.  B. 
 C.  D. 




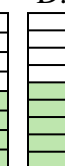
7) Which of the shapes below is shaded to represent $\frac{6}{10}$?

- A.  B. 
 C.  D. 





8) Which of the shapes below is shaded to represent $\frac{3}{6}$?

- A.  B. 
 C.  D. 

9) Which of the shapes below is shaded to represent $\frac{5}{8}$?

- A.  B. 
 C.  D. 

10) Which of the shapes below is shaded to represent $\frac{2}{10}$?

- A.  B. 
 C.  D. 

1. **B**
 2. **A**
 3. **D**
 4. **B**
 5. **C**
 6. **C**
 7. **A**
 8. **D**
 9. **A**
 10. **C**