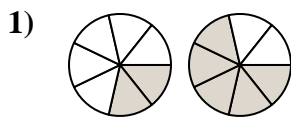


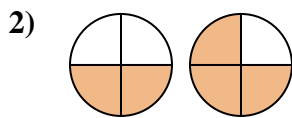


Determine which letter best compares the fractions shown.

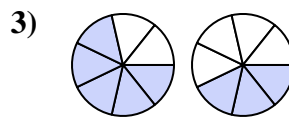
**Answers**



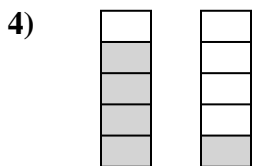
- A.  $\frac{5}{2} < \frac{2}{5}$
- B.  $\frac{2}{5} > \frac{5}{2}$
- C.  $\frac{7}{2} > \frac{7}{5}$
- D.  $\frac{2}{7} < \frac{5}{7}$



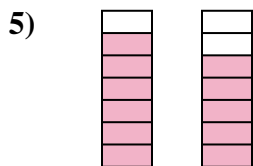
- A.  $\frac{2}{2} < \frac{1}{3}$
- B.  $\frac{2}{2} > \frac{3}{1}$
- C.  $\frac{2}{4} < \frac{3}{4}$
- D.  $\frac{2}{2} < \frac{3}{1}$



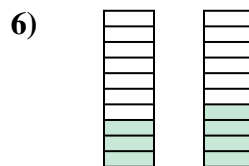
- A.  $\frac{5}{7} > \frac{3}{7}$
- B.  $\frac{5}{2} > \frac{3}{4}$
- C.  $\frac{2}{5} > \frac{4}{3}$
- D.  $\frac{5}{7} < \frac{3}{7}$



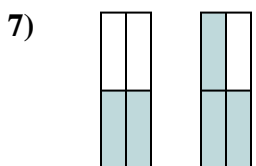
- A.  $\frac{4}{1} > \frac{1}{4}$
- B.  $\frac{1}{4} < \frac{4}{1}$
- C.  $\frac{4}{5} > \frac{1}{5}$
- D.  $\frac{5}{4} > \frac{5}{1}$



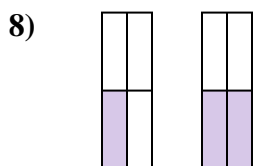
- A.  $\frac{1}{6} < \frac{2}{5}$
- B.  $\frac{6}{7} > \frac{5}{7}$
- C.  $\frac{6}{1} < \frac{5}{2}$
- D.  $\frac{6}{7} < \frac{5}{7}$



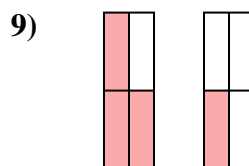
- A.  $\frac{10}{3} > \frac{10}{4}$
- B.  $\frac{3}{10} < \frac{4}{10}$
- C.  $\frac{7}{3} > \frac{6}{4}$
- D.  $\frac{3}{7} > \frac{4}{6}$



- A.  $\frac{4}{2} > \frac{4}{3}$
- B.  $\frac{2}{2} < \frac{3}{1}$
- C.  $\frac{2}{4} < \frac{3}{4}$
- D.  $\frac{2}{2} < \frac{1}{3}$



- A.  $\frac{1}{3} > \frac{2}{2}$
- B.  $\frac{1}{4} > \frac{2}{4}$
- C.  $\frac{1}{4} < \frac{2}{4}$
- D.  $\frac{1}{3} < \frac{2}{2}$

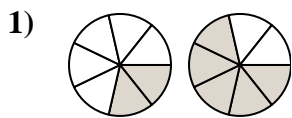


- A.  $\frac{1}{3} > \frac{3}{1}$
- B.  $\frac{3}{4} > \frac{1}{4}$
- C.  $\frac{1}{3} < \frac{3}{1}$
- D.  $\frac{3}{1} < \frac{1}{3}$

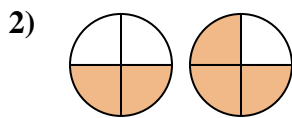
- 1. \_\_\_\_\_
- 2. \_\_\_\_\_
- 3. \_\_\_\_\_
- 4. \_\_\_\_\_
- 5. \_\_\_\_\_
- 6. \_\_\_\_\_
- 7. \_\_\_\_\_
- 8. \_\_\_\_\_
- 9. \_\_\_\_\_



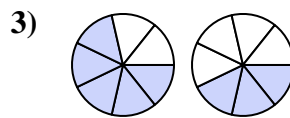
Determine which letter best compares the fractions shown.



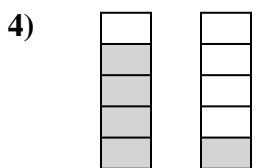
- A.  $\frac{5}{2} < \frac{2}{5}$
- B.  $\frac{2}{5} > \frac{5}{2}$
- C.  $\frac{7}{2} > \frac{7}{5}$
- D.  $\frac{2}{7} < \frac{5}{7}$



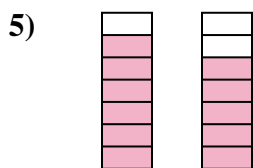
- A.  $\frac{2}{2} < \frac{1}{3}$
- B.  $\frac{2}{2} > \frac{3}{1}$
- C.  $\frac{2}{4} < \frac{3}{4}$
- D.  $\frac{2}{2} < \frac{3}{1}$



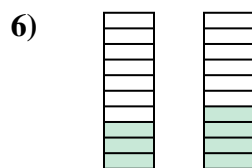
- A.  $\frac{5}{7} > \frac{3}{7}$
- B.  $\frac{5}{2} > \frac{3}{4}$
- C.  $\frac{2}{5} > \frac{4}{3}$
- D.  $\frac{5}{7} < \frac{3}{7}$



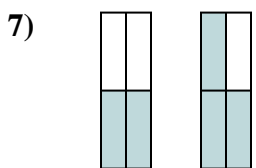
- A.  $\frac{4}{1} > \frac{1}{4}$
- B.  $\frac{1}{4} < \frac{4}{1}$
- C.  $\frac{4}{5} > \frac{1}{5}$
- D.  $\frac{5}{4} > \frac{5}{1}$



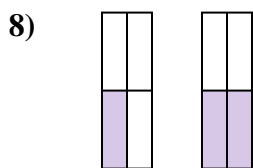
- A.  $\frac{1}{6} < \frac{2}{5}$
- B.  $\frac{6}{7} > \frac{5}{7}$
- C.  $\frac{6}{1} < \frac{5}{2}$
- D.  $\frac{6}{7} < \frac{5}{7}$



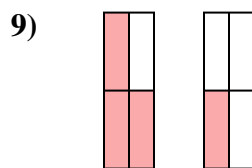
- A.  $\frac{10}{3} > \frac{10}{4}$
- B.  $\frac{3}{10} < \frac{4}{10}$
- C.  $\frac{7}{3} > \frac{6}{4}$
- D.  $\frac{3}{7} > \frac{4}{6}$



- A.  $\frac{4}{2} > \frac{4}{3}$
- B.  $\frac{2}{2} < \frac{3}{1}$
- C.  $\frac{2}{4} < \frac{3}{4}$
- D.  $\frac{2}{2} < \frac{1}{3}$



- A.  $\frac{1}{3} > \frac{2}{2}$
- B.  $\frac{1}{4} > \frac{2}{4}$
- C.  $\frac{1}{4} < \frac{2}{4}$
- D.  $\frac{1}{3} < \frac{2}{2}$



- A.  $\frac{1}{3} > \frac{3}{1}$
- B.  $\frac{3}{4} > \frac{1}{4}$
- C.  $\frac{1}{3} < \frac{3}{1}$
- D.  $\frac{3}{1} < \frac{1}{3}$

**Answers**

- 1.     **D**
- 2.     **C**
- 3.     **A**
- 4.     **C**
- 5.     **B**
- 6.     **B**
- 7.     **C**
- 8.     **C**
- 9.     **B**