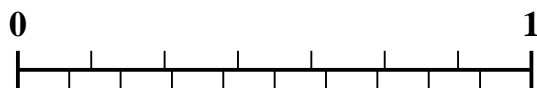


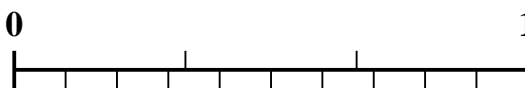


Use the number line to solve each problem.

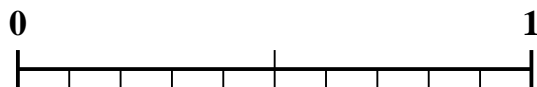
1) Which amount is larger,  $\frac{3}{7}$  or 0.23?



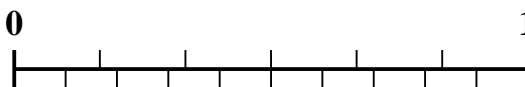
2) Which amount is larger,  $\frac{2}{3}$  or 0.82?



3) Which amount is larger,  $\frac{1}{2}$  or 0.61?



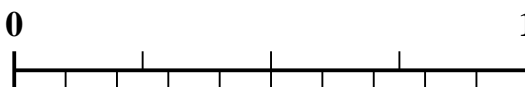
4) Which amount is larger,  $\frac{4}{6}$  or 0.77?




5) Which amount is larger,  $\frac{6}{7}$  or 0.73?



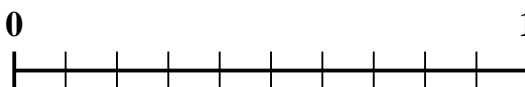
6) Which amount is larger,  $\frac{2}{4}$  or 0.6?



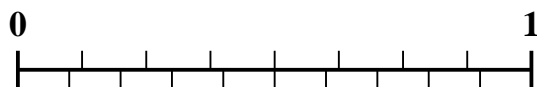
7) Which amount is larger,  $\frac{3}{4}$  or 0.88?



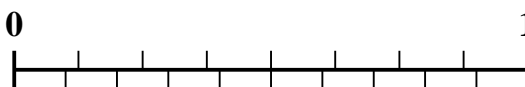
8) Which amount is larger,  $\frac{3}{10}$  or 0.14?



9) Which amount is larger,  $\frac{3}{8}$  or 0.19?



10) Which amount is larger,  $\frac{5}{8}$  or 0.83?



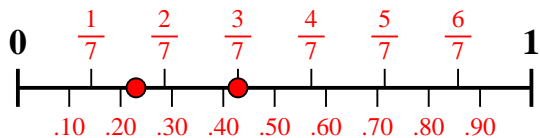
Answers

1. \_\_\_\_\_
2. \_\_\_\_\_
3. \_\_\_\_\_
4. \_\_\_\_\_
5. \_\_\_\_\_
6. \_\_\_\_\_
7. \_\_\_\_\_
8. \_\_\_\_\_
9. \_\_\_\_\_
10. \_\_\_\_\_

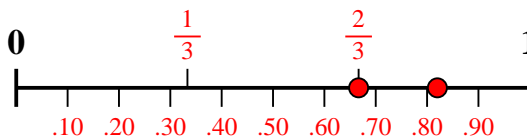


Use the number line to solve each problem.

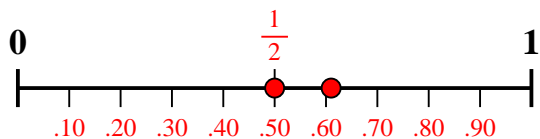
1) Which amount is larger,  $\frac{3}{7}$  or 0.23?



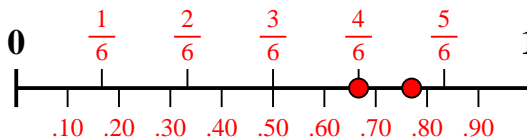
2) Which amount is larger,  $\frac{2}{3}$  or 0.82?



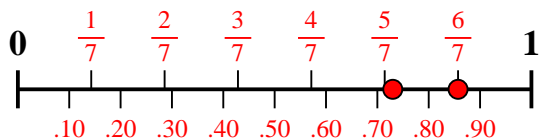
3) Which amount is larger,  $\frac{1}{2}$  or 0.61?



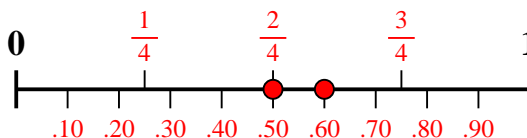
4) Which amount is larger,  $\frac{4}{6}$  or 0.77?



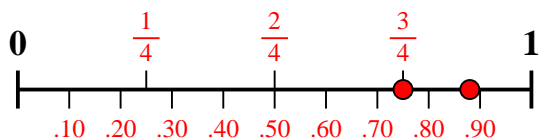
5) Which amount is larger,  $\frac{6}{7}$  or 0.73?



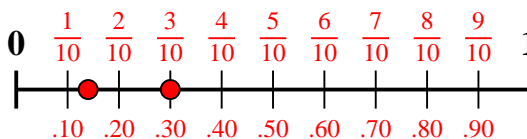
6) Which amount is larger,  $\frac{2}{4}$  or 0.6?



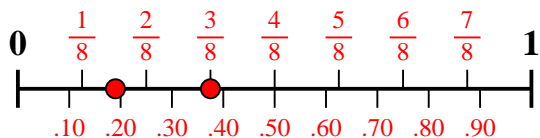
7) Which amount is larger,  $\frac{3}{4}$  or 0.88?



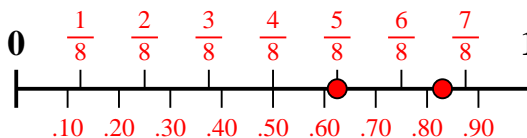
8) Which amount is larger,  $\frac{3}{10}$  or 0.14?



9) Which amount is larger,  $\frac{3}{8}$  or 0.19?



10) Which amount is larger,  $\frac{5}{8}$  or 0.83?



Answers

1.  $\frac{3}{7}$
2. **0.82**
3. **0.61**
4. **0.77**
5.  $\frac{6}{7}$
6. **0.6**
7. **0.88**
8.  $\frac{3}{10}$
9.  $\frac{3}{8}$
10. **0.83**