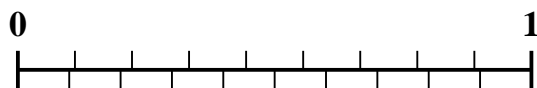


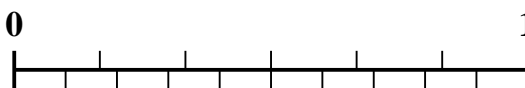


Use the number line to solve each problem.

1) Which amount is larger, $\frac{2}{9}$ or 0.34?



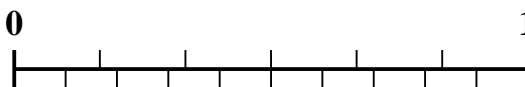
2) Which amount is larger, $\frac{3}{6}$ or 0.68?



3) Which amount is larger, $\frac{6}{7}$ or 0.72?



4) Which amount is larger, $\frac{4}{6}$ or 0.47?



5) Which amount is larger, $\frac{3}{7}$ or 0.54?



6) Which amount is larger, $\frac{1}{3}$ or 0.51?



7) Which amount is larger, $\frac{5}{7}$ or 0.54?



8) Which amount is larger, $\frac{3}{4}$ or 0.89?



9) Which amount is larger, $\frac{4}{5}$ or 0.6?



10) Which amount is larger, $\frac{1}{2}$ or 0.34?



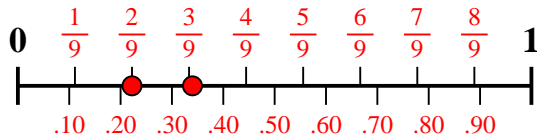
Answers

1. _____
2. _____
3. _____
4. _____
5. _____
6. _____
7. _____
8. _____
9. _____
10. _____

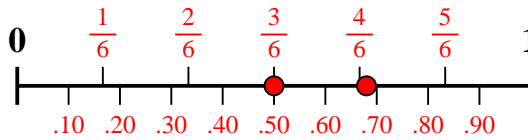


Use the number line to solve each problem.

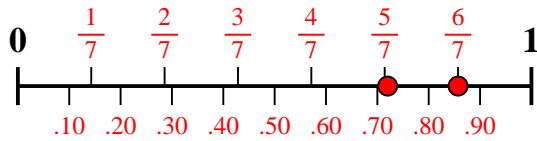
1) Which amount is larger, $\frac{2}{9}$ or 0.34?



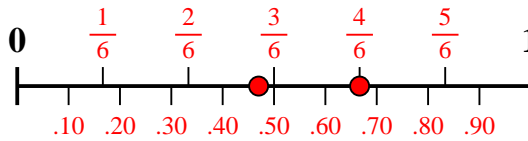
2) Which amount is larger, $\frac{3}{6}$ or 0.68?



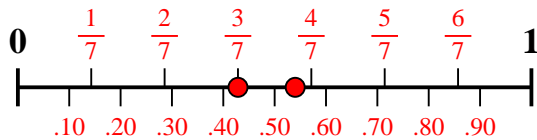
3) Which amount is larger, $\frac{6}{7}$ or 0.72?



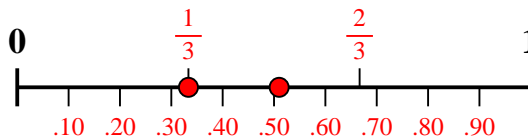
4) Which amount is larger, $\frac{4}{6}$ or 0.47?



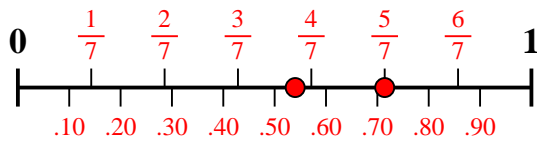
5) Which amount is larger, $\frac{3}{7}$ or 0.54?



6) Which amount is larger, $\frac{1}{3}$ or 0.51?



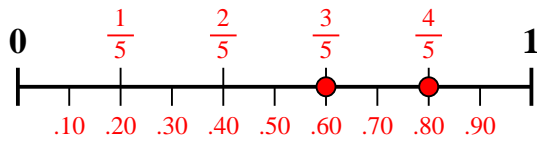
7) Which amount is larger, $\frac{5}{7}$ or 0.54?



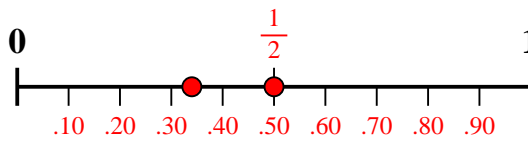
8) Which amount is larger, $\frac{3}{4}$ or 0.89?



9) Which amount is larger, $\frac{4}{5}$ or 0.6?



10) Which amount is larger, $\frac{1}{2}$ or 0.34?



Answers

1. **0.34**
2. **0.68**
3. $\frac{6}{7}$
4. $\frac{4}{6}$
5. **0.54**
6. **0.51**
7. $\frac{5}{7}$
8. **0.89**
9. $\frac{4}{5}$
10. $\frac{1}{2}$