




Match each equation to the answer and write the answer.

**Answers**

Ex)  $\frac{1}{12} + \frac{1}{12} + \frac{1}{12}$



Ex.          **N**

1)  $\frac{1}{6} + \frac{1}{6} + \frac{1}{6} + \frac{1}{6} + \frac{1}{6}$




1. \_\_\_\_\_

2)  $\frac{1}{8} + \frac{1}{8} + \frac{1}{8} + \frac{1}{8} + \frac{1}{8}$




2. \_\_\_\_\_

3)  $\frac{1}{5} + \frac{1}{5}$




3. \_\_\_\_\_

4)  $\frac{1}{3} + \frac{1}{3}$



4. \_\_\_\_\_

5)  $\frac{1}{10} + \frac{1}{10} + \frac{1}{10} + \frac{1}{10} + \frac{1}{10} + \frac{1}{10} + \frac{1}{10}$



5. \_\_\_\_\_

6)  $\frac{1}{5} + \frac{1}{5} + \frac{1}{5} + \frac{1}{5}$




6. \_\_\_\_\_

7)  $\frac{1}{4} + \frac{1}{4}$




7. \_\_\_\_\_

8)  $\frac{1}{6} + \frac{1}{6}$



8. \_\_\_\_\_

9)  $\frac{1}{10} + \frac{1}{10} + \frac{1}{10} + \frac{1}{10} + \frac{1}{10}$




9. \_\_\_\_\_

10)  $\frac{1}{6} + \frac{1}{6} + \frac{1}{6}$



10. \_\_\_\_\_

11)  $\frac{1}{8} + \frac{1}{8} + \frac{1}{8}$



11. \_\_\_\_\_

12)  $\frac{1}{12} + \frac{1}{12} + \frac{1}{12} + \frac{1}{12}$



12. \_\_\_\_\_

13)  $\frac{1}{6} + \frac{1}{6} + \frac{1}{6} + \frac{1}{6}$




13. \_\_\_\_\_

14)  $\frac{1}{10} + \frac{1}{10}$



14. \_\_\_\_\_

15)  $\frac{1}{12} + \frac{1}{12} + \frac{1}{12} + \frac{1}{12} + \frac{1}{12} + \frac{1}{12} + \frac{1}{12}$



15. \_\_\_\_\_



Match each equation to the answer and write the answer.


Answers

Ex)  $\frac{1}{12} + \frac{1}{12} + \frac{1}{12}$



Ex.     **N**    

1)  $\frac{1}{6} + \frac{1}{6} + \frac{1}{6} + \frac{1}{6} + \frac{1}{6}$



1.     **I**    

2)  $\frac{1}{8} + \frac{1}{8} + \frac{1}{8} + \frac{1}{8} + \frac{1}{8}$



2.     **C**    

3)  $\frac{1}{5} + \frac{1}{5}$




3.     **D**    

4)  $\frac{1}{3} + \frac{1}{3}$



4.     **M**    

5)  $\frac{1}{10} + \frac{1}{10} + \frac{1}{10} + \frac{1}{10} + \frac{1}{10} + \frac{1}{10} + \frac{1}{10} + \frac{1}{10}$



5.     **F**    

6)  $\frac{1}{5} + \frac{1}{5} + \frac{1}{5} + \frac{1}{5}$




6.     **A**    

7)  $\frac{1}{4} + \frac{1}{4}$



7.     **E**    

8)  $\frac{1}{6} + \frac{1}{6}$



8.     **B**    

9)  $\frac{1}{10} + \frac{1}{10} + \frac{1}{10} + \frac{1}{10} + \frac{1}{10}$




9.     **P**    

10)  $\frac{1}{6} + \frac{1}{6} + \frac{1}{6}$



10.     **G**    

11)  $\frac{1}{8} + \frac{1}{8} + \frac{1}{8}$



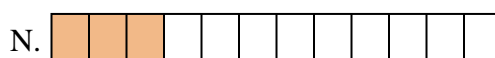
11.     **L**    

12)  $\frac{1}{12} + \frac{1}{12} + \frac{1}{12} + \frac{1}{12}$



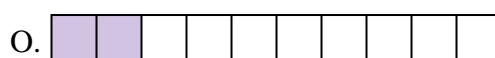
12.     **J**    

13)  $\frac{1}{6} + \frac{1}{6} + \frac{1}{6} + \frac{1}{6}$



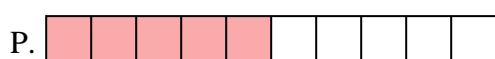
13.     **K**    

14)  $\frac{1}{10} + \frac{1}{10}$



14.     **O**    

15)  $\frac{1}{12} + \frac{1}{12} + \frac{1}{12} + \frac{1}{12} + \frac{1}{12} + \frac{1}{12} + \frac{1}{12}$



15.     **H**