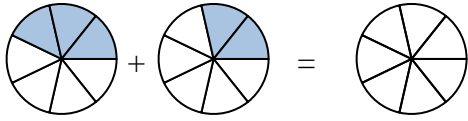




Shade in the fraction to solve the problem.

Answers

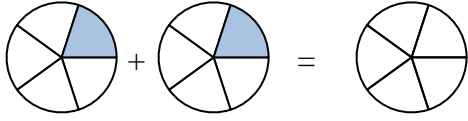
Ex)



Ex.  $\frac{3}{7}$     $\frac{2}{7}$     $\frac{5}{7}$

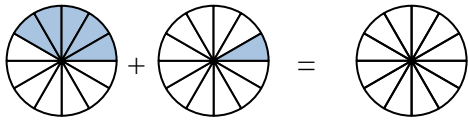
1. \_\_\_\_\_

1)



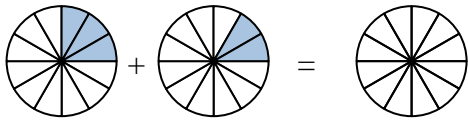
2. \_\_\_\_\_

2)



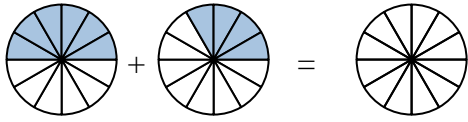
3. \_\_\_\_\_

3)



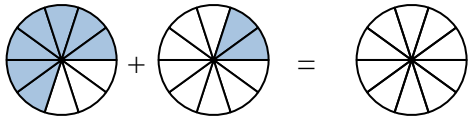
4. \_\_\_\_\_

4)



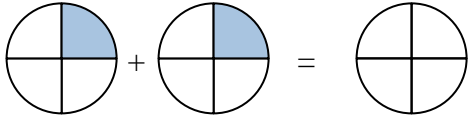
5. \_\_\_\_\_

5)



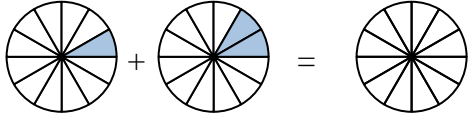
6. \_\_\_\_\_

6)



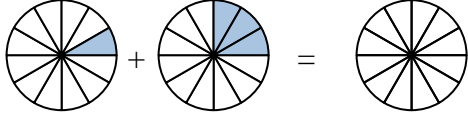
7. \_\_\_\_\_

7)



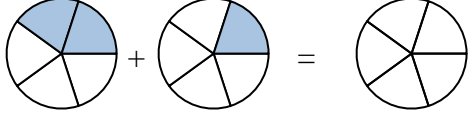
8. \_\_\_\_\_

8)



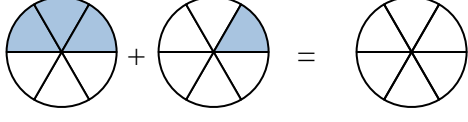
9. \_\_\_\_\_

9)



10. \_\_\_\_\_

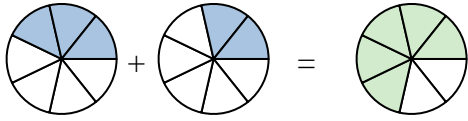
10)





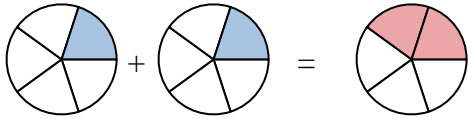
Shade in the fraction to solve the problem.

Ex)



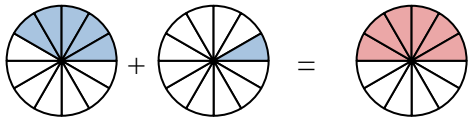
Ex.  $\frac{3}{7}$     $\frac{2}{7}$     $\frac{5}{7}$

1)



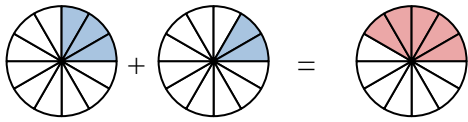
1.  $\frac{1}{5}$     $\frac{1}{5}$     $\frac{2}{5}$

2)



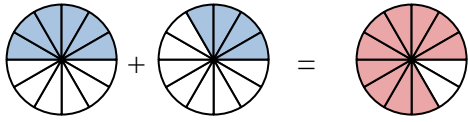
2.  $\frac{5}{12}$     $\frac{1}{12}$     $\frac{6}{12}$

3)



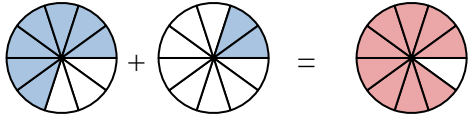
3.  $\frac{3}{12}$     $\frac{2}{12}$     $\frac{5}{12}$

4)



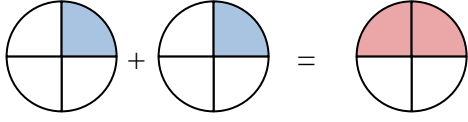
4.  $\frac{6}{12}$     $\frac{4}{12}$     $\frac{10}{12}$

5)



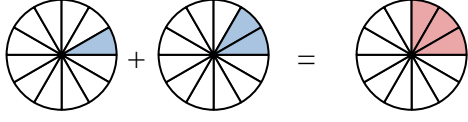
5.  $\frac{7}{10}$     $\frac{2}{10}$     $\frac{9}{10}$

6)



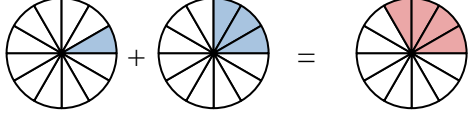
6.  $\frac{1}{4}$     $\frac{1}{4}$     $\frac{2}{4}$

7)



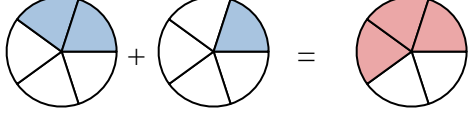
7.  $\frac{1}{12}$     $\frac{2}{12}$     $\frac{3}{12}$

8)



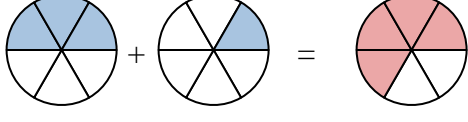
8.  $\frac{1}{12}$     $\frac{3}{12}$     $\frac{4}{12}$

9)



9.  $\frac{2}{5}$     $\frac{1}{5}$     $\frac{3}{5}$

10)



10.  $\frac{3}{6}$     $\frac{1}{6}$     $\frac{4}{6}$

**Answers**