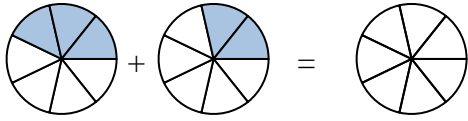




Shade in the fraction to solve the problem.

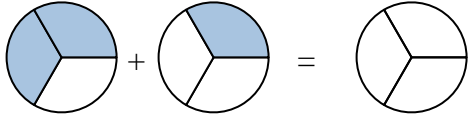
**Answers**

Ex)



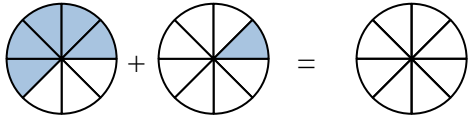
Ex.  $\frac{3}{7}$      $\frac{2}{7}$      $\frac{5}{7}$

1)



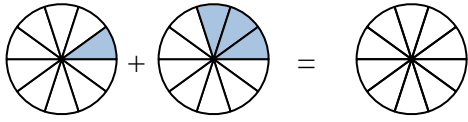
1. \_\_\_\_\_

2)



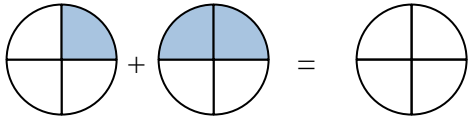
2. \_\_\_\_\_

3)



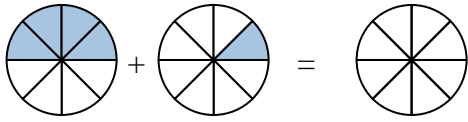
3. \_\_\_\_\_

4)



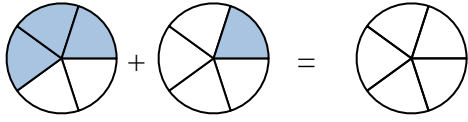
4. \_\_\_\_\_

5)



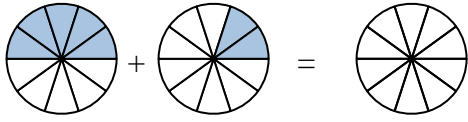
5. \_\_\_\_\_

6)



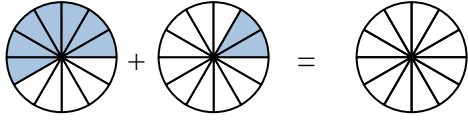
6. \_\_\_\_\_

7)



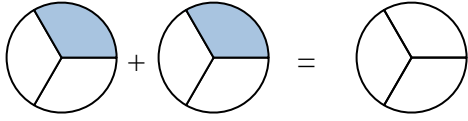
7. \_\_\_\_\_

8)



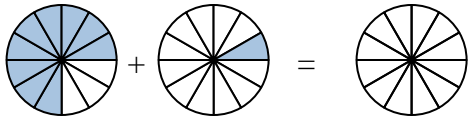
8. \_\_\_\_\_

9)



9. \_\_\_\_\_

10)

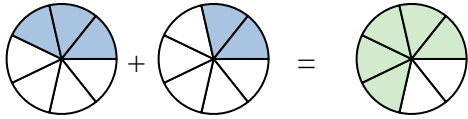


10. \_\_\_\_\_



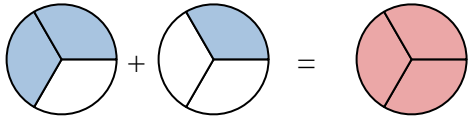
Shade in the fraction to solve the problem.

Ex)



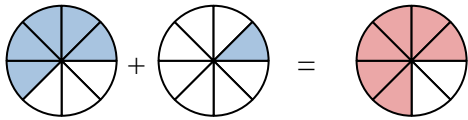
Ex.  $\frac{3}{7}$     $\frac{2}{7}$     $\frac{5}{7}$

1)



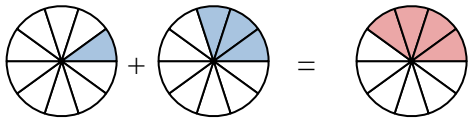
1.  $\frac{2}{3}$     $\frac{1}{3}$     $\frac{3}{3}$

2)



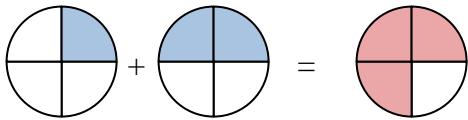
2.  $\frac{5}{8}$     $\frac{1}{8}$     $\frac{6}{8}$

3)



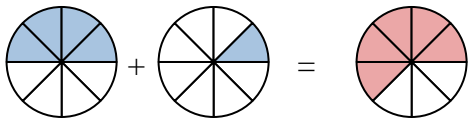
3.  $\frac{1}{10}$     $\frac{3}{10}$     $\frac{4}{10}$

4)



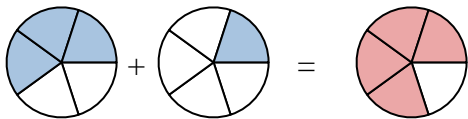
4.  $\frac{1}{4}$     $\frac{2}{4}$     $\frac{3}{4}$

5)



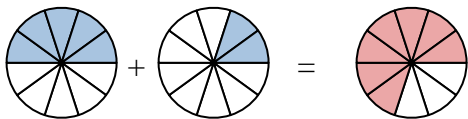
5.  $\frac{4}{8}$     $\frac{1}{8}$     $\frac{5}{8}$

6)



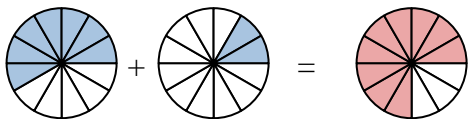
6.  $\frac{3}{5}$     $\frac{1}{5}$     $\frac{4}{5}$

7)



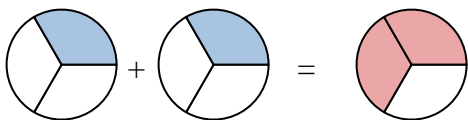
7.  $\frac{5}{10}$     $\frac{2}{10}$     $\frac{7}{10}$

8)



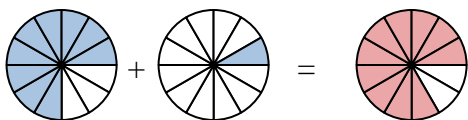
8.  $\frac{7}{12}$     $\frac{2}{12}$     $\frac{9}{12}$

9)



9.  $\frac{1}{3}$     $\frac{1}{3}$     $\frac{2}{3}$

10)



10.  $\frac{9}{12}$     $\frac{1}{12}$     $\frac{10}{12}$

**Answers**