



Determine which letter best represents the sum.

1)  $\frac{1}{8} + \frac{3}{8}$

3)  $\frac{5}{6} + \frac{1}{6}$

5)  $\frac{2}{8} + \frac{4}{8}$

7)  $\frac{9}{12} + \frac{10}{12}$

9)  $\frac{2}{3} + \frac{1}{3}$

11)  $\frac{10}{12} + \frac{6}{12}$

13)  $\frac{1}{2} + \frac{1}{2}$

2)  $\frac{2}{3} + \frac{2}{3}$

4)  $\frac{2}{12} + \frac{10}{12}$

6)  $\frac{9}{10} + \frac{6}{10}$

8)  $\frac{1}{4} + \frac{2}{4}$

10)  $\frac{2}{6} + \frac{5}{6}$

12)  $\frac{1}{8} + \frac{7}{8}$

14)  $\frac{2}{5} + \frac{1}{5}$

Answers

1. \_\_\_\_\_

2. \_\_\_\_\_

3. \_\_\_\_\_

4. \_\_\_\_\_

5. \_\_\_\_\_

6. \_\_\_\_\_

7. \_\_\_\_\_

8. \_\_\_\_\_

9. \_\_\_\_\_

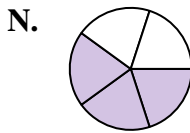
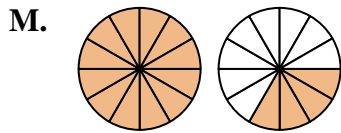
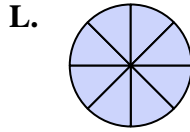
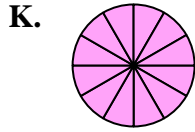
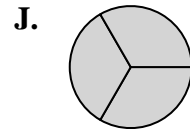
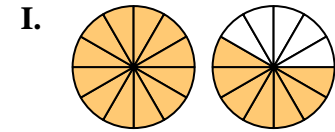
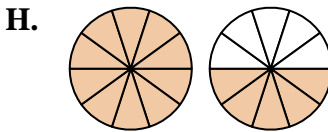
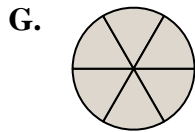
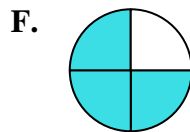
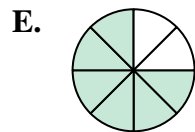
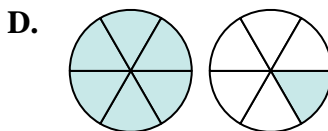
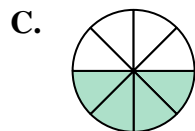
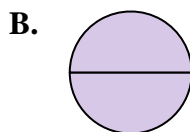
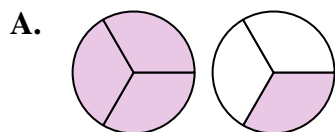
10. \_\_\_\_\_

11. \_\_\_\_\_

12. \_\_\_\_\_

13. \_\_\_\_\_

14. \_\_\_\_\_





Determine which letter best represents the sum.

1)  $\frac{1}{8} + \frac{3}{8}$

2)  $\frac{2}{3} + \frac{2}{3}$

3)  $\frac{5}{6} + \frac{1}{6}$

4)  $\frac{2}{12} + \frac{10}{12}$

5)  $\frac{2}{8} + \frac{4}{8}$

6)  $\frac{9}{10} + \frac{6}{10}$

7)  $\frac{9}{12} + \frac{10}{12}$

8)  $\frac{1}{4} + \frac{2}{4}$

9)  $\frac{2}{3} + \frac{1}{3}$

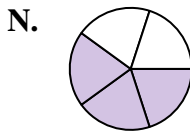
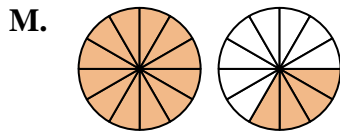
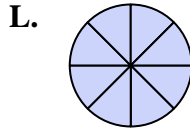
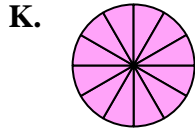
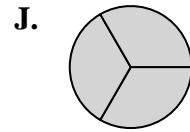
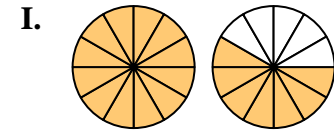
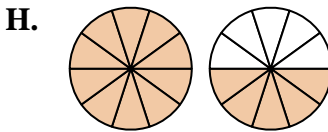
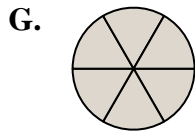
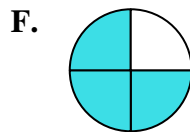
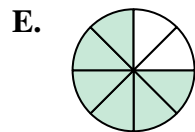
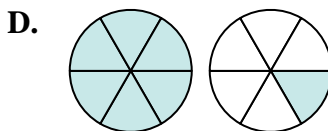
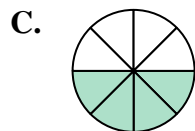
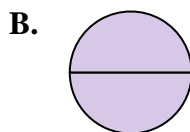
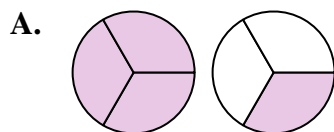
10)  $\frac{2}{6} + \frac{5}{6}$

11)  $\frac{10}{12} + \frac{6}{12}$

12)  $\frac{1}{8} + \frac{7}{8}$

13)  $\frac{1}{2} + \frac{1}{2}$

14)  $\frac{2}{5} + \frac{1}{5}$



**Answers**

1. **C**  $\frac{4}{8}$

2. **A**  $1\frac{1}{3}$

3. **G**  $\frac{6}{6}$

4. **K**  $\frac{12}{12}$

5. **E**  $\frac{6}{8}$

6. **H**  $1\frac{5}{10}$

7. **I**  $1\frac{7}{12}$

8. **F**  $\frac{3}{4}$

9. **J**  $\frac{3}{3}$

10. **D**  $1\frac{1}{6}$

11. **M**  $1\frac{4}{12}$

12. **L**  $\frac{8}{8}$

13. **B**  $\frac{2}{2}$

14. **N**  $\frac{3}{5}$