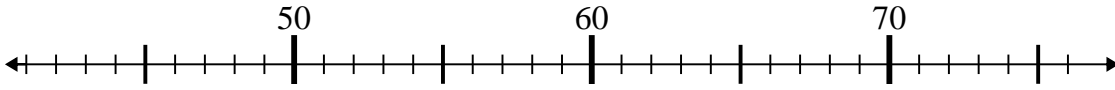




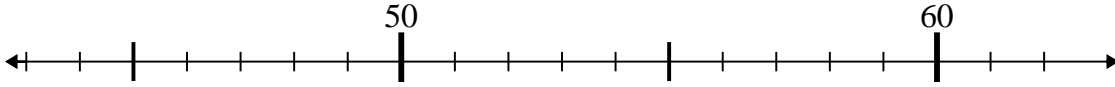
Use the numberlines to solve each problem.

Answers

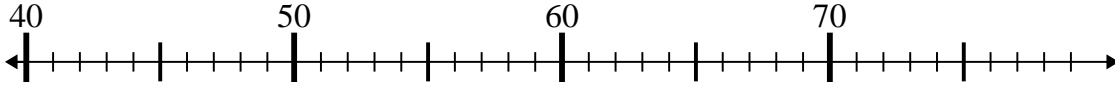
1)  $52 - 10 =$



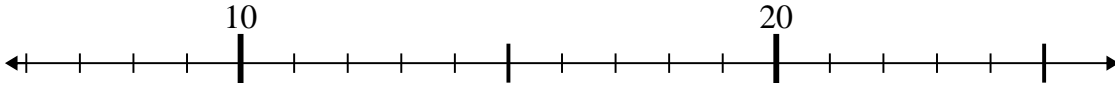
2)  $60 - 1 =$



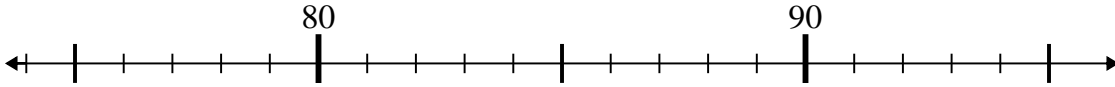
3)  $58 - 6 =$



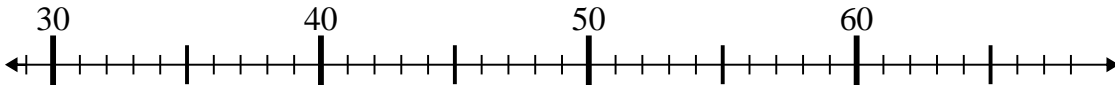
4)  $13 - 1 =$



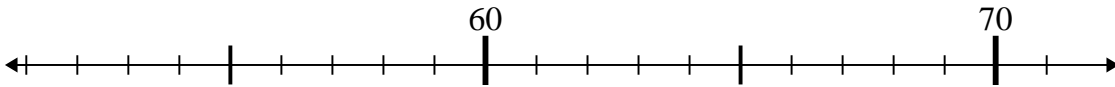
5)  $86 + 9 =$



6)  $31 + 26 =$



7)  $55 + 2 =$



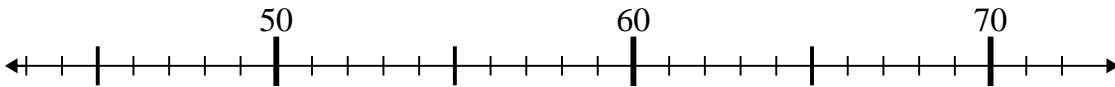
8)  $35 - 18 =$



9)  $76 - 24 =$



10)  $46 + 15 =$

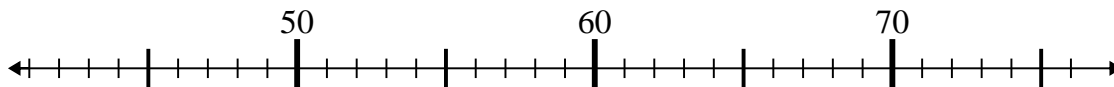


1. \_\_\_\_\_
2. \_\_\_\_\_
3. \_\_\_\_\_
4. \_\_\_\_\_
5. \_\_\_\_\_
6. \_\_\_\_\_
7. \_\_\_\_\_
8. \_\_\_\_\_
9. \_\_\_\_\_
10. \_\_\_\_\_

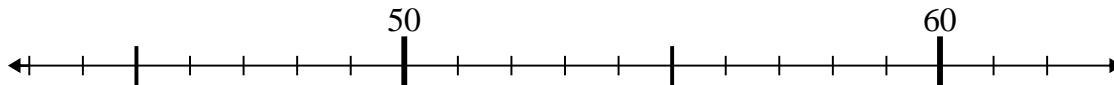


Use the numberlines to solve each problem.

1)  $52 - 10 =$



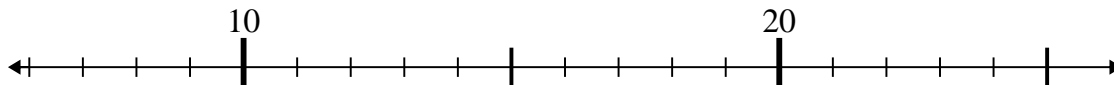
2)  $60 - 1 =$



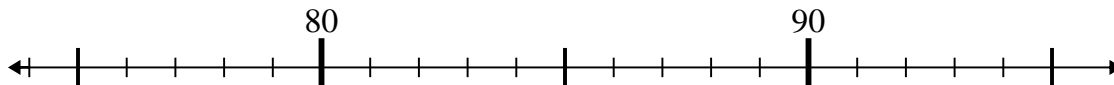
3)  $58 - 6 =$



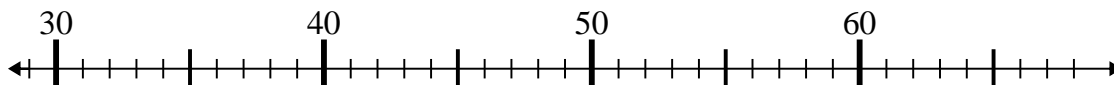
4)  $13 - 1 =$



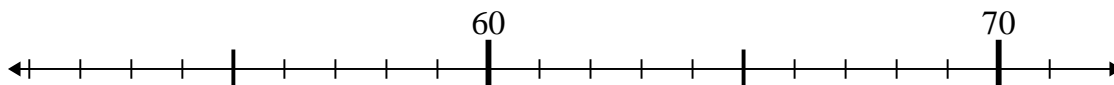
5)  $86 + 9 =$



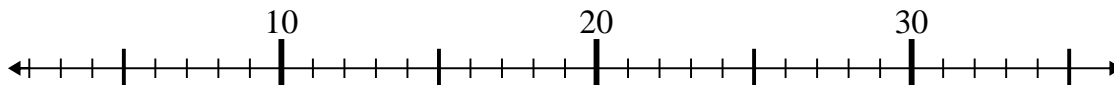
6)  $31 + 26 =$



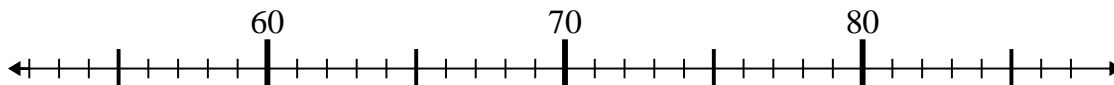
7)  $55 + 2 =$



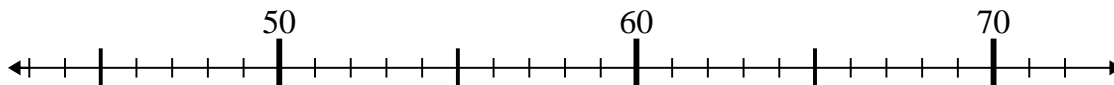
8)  $35 - 18 =$



9)  $76 - 24 =$



10)  $46 + 15 =$



Answers

1. 42

2. 59

3. 52

4. 12

5. 95

6. 57

7. 57

8. 17

9. 52

10. 61