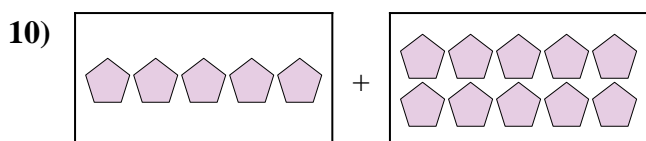
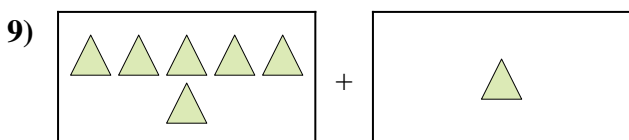
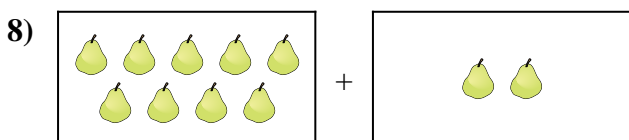
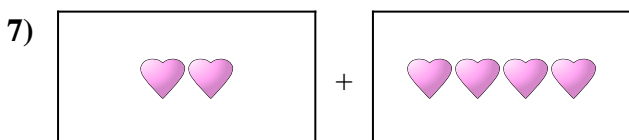
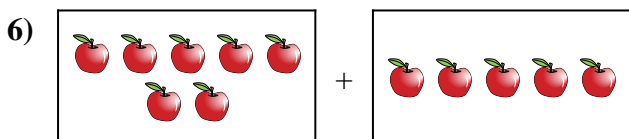
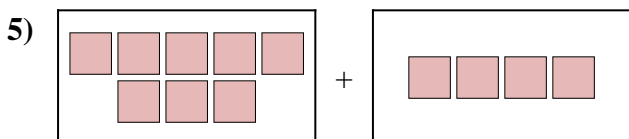
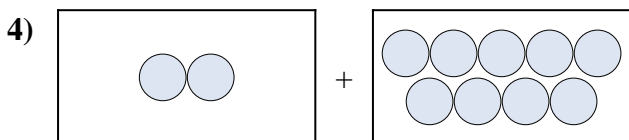
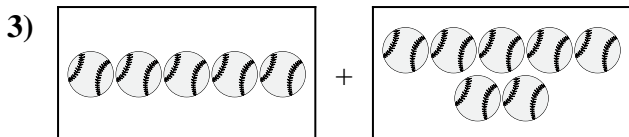

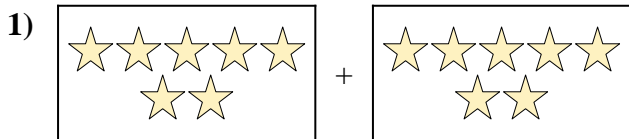




Express the visual problem as an equation with answer.

Answers



1. \_\_\_\_\_

2. \_\_\_\_\_

3. \_\_\_\_\_

4. \_\_\_\_\_

5. \_\_\_\_\_

6. \_\_\_\_\_

7. \_\_\_\_\_

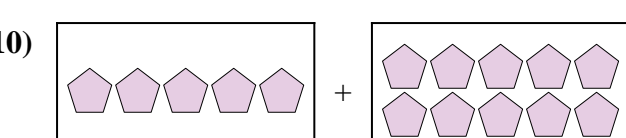
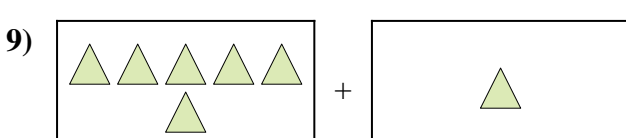
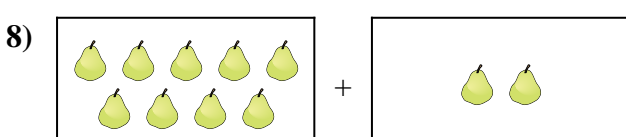
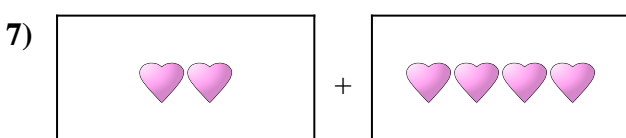
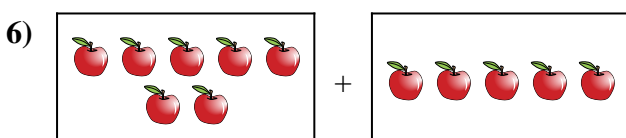
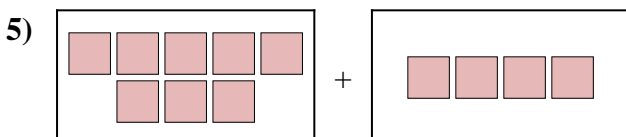
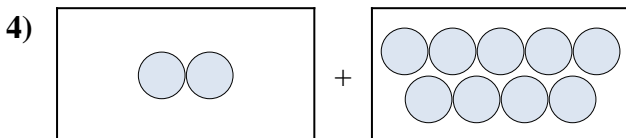
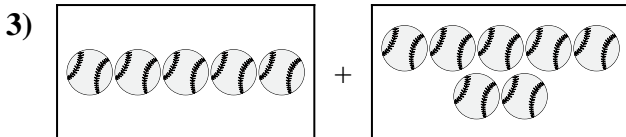

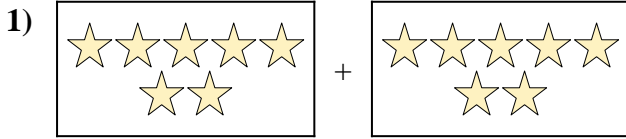
8. \_\_\_\_\_

9. \_\_\_\_\_

10. \_\_\_\_\_



Express the visual problem as an equation with answer.



Answers

1.  $7 + 7 = 14$

2.  $6 + 1 = 7$

3.  $5 + 7 = 12$

4.  $2 + 9 = 11$

5.  $8 + 4 = 12$

6.  $7 + 5 = 12$

7.  $2 + 4 = 6$

8.  $9 + 2 = 11$

9.  $6 + 1 = 7$

10.  $5 + 10 = 15$