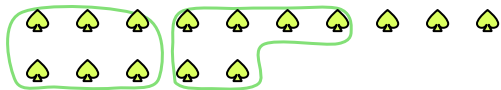





Use the shapes provided to answer the questions.

Answers

Ex) There are 15 shapes below. How many groups of 6 can you make with them? How many will you have left over?



1) There are 26 shapes below. How many groups of 3 can you make with them? How many will you have left over?



Ex. 2 3

1. _____

2. _____

3. _____

4. _____

5. _____


6. _____

7. _____

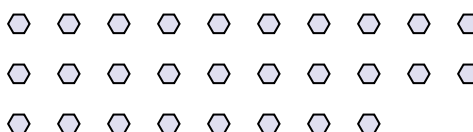
8. _____

9. _____


2) There are 19 shapes below. How many groups of 6 can you make with them? How many will you have left over?



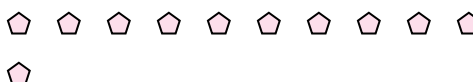
3) There are 28 shapes below. How many groups of 8 can you make with them? How many will you have left over?



4) There are 22 shapes below. How many groups of 4 can you make with them? How many will you have left over?



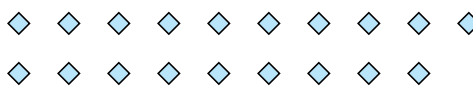
5) There are 11 shapes below. How many groups of 8 can you make with them? How many will you have left over?




6) There are 19 shapes below. How many groups of 2 can you make with them? How many will you have left over?



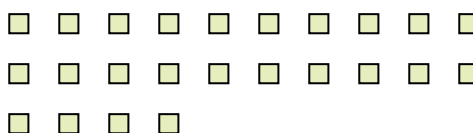
7) There are 19 shapes below. How many groups of 2 can you make with them? How many will you have left over?



8) There are 23 shapes below. How many groups of 9 can you make with them? How many will you have left over?



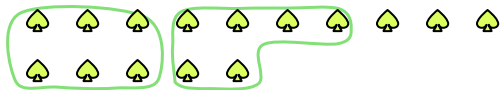
9) There are 24 shapes below. How many groups of 9 can you make with them? How many will you have left over?






Use the shapes provided to answer the questions.

Ex) There are 15 shapes below. How many groups of 6 can you make with them? How many will you have left over?




1) There are 26 shapes below. How many groups of 3 can you make with them? How many will you have left over?



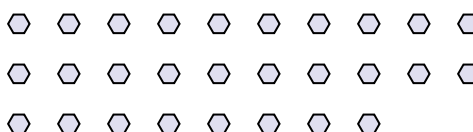
Answers

Ex. 2 3

2) There are 19 shapes below. How many groups of 6 can you make with them? How many will you have left over?



3) There are 28 shapes below. How many groups of 8 can you make with them? How many will you have left over?



1. 8 2

2. 3 1

3. 3 4

4. 5 2

5. 1 3

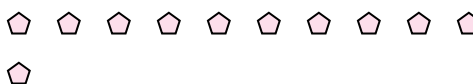
6. 9 1

7. 9 1

4) There are 22 shapes below. How many groups of 4 can you make with them? How many will you have left over?



5) There are 11 shapes below. How many groups of 8 can you make with them? How many will you have left over?



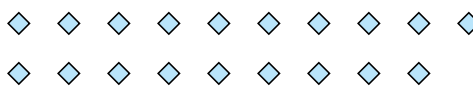
8. 2 5

9. 2 6


6) There are 19 shapes below. How many groups of 2 can you make with them? How many will you have left over?



7) There are 19 shapes below. How many groups of 2 can you make with them? How many will you have left over?



8) There are 23 shapes below. How many groups of 9 can you make with them? How many will you have left over?



9) There are 24 shapes below. How many groups of 9 can you make with them? How many will you have left over?

