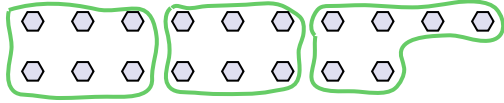




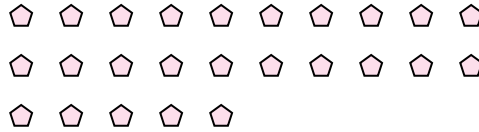
Use the shapes provided to answer the questions.

**Answers**

Ex) How many groups of 6 can you make with the 18 shapes below?



1) How many groups of 5 can you make with the 25 shapes below?

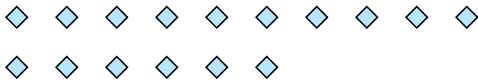


Ex. 3

1. \_\_\_\_\_

2. \_\_\_\_\_

2) How many groups of 4 can you make with the 16 shapes below?



3) How many groups of 2 can you make with the 14 shapes below?




3. \_\_\_\_\_


4. \_\_\_\_\_

5. \_\_\_\_\_

4) How many groups of 4 can you make with the 28 shapes below?



5) How many groups of 9 can you make with the 36 shapes below?



6. \_\_\_\_\_

7. \_\_\_\_\_

8. \_\_\_\_\_

9. \_\_\_\_\_

6) How many groups of 9 can you make with the 27 shapes below?



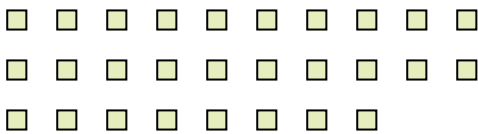
7) How many groups of 6 can you make with the 30 shapes below?




10. \_\_\_\_\_

11. \_\_\_\_\_

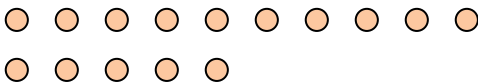
8) How many groups of 2 can you make with the 28 shapes below?




9) How many groups of 9 can you make with the 27 shapes below?



10) How many groups of 5 can you make with the 15 shapes below?



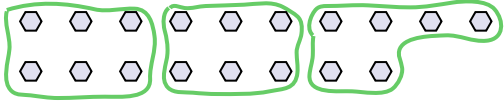
11) How many groups of 4 can you make with the 36 shapes below?



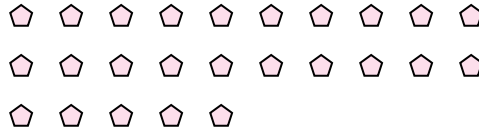


Use the shapes provided to answer the questions.

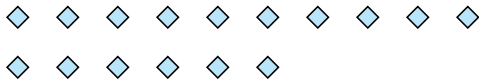
Ex) How many groups of 6 can you make with the 18 shapes below?



1) How many groups of 5 can you make with the 25 shapes below?




2) How many groups of 4 can you make with the 16 shapes below?




3) How many groups of 2 can you make with the 14 shapes below?



4) How many groups of 4 can you make with the 28 shapes below?



5) How many groups of 9 can you make with the 36 shapes below?



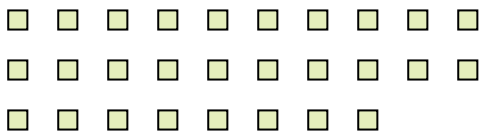
6) How many groups of 9 can you make with the 27 shapes below?




7) How many groups of 6 can you make with the 30 shapes below?



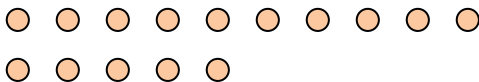
8) How many groups of 2 can you make with the 28 shapes below?




9) How many groups of 9 can you make with the 27 shapes below?



10) How many groups of 5 can you make with the 15 shapes below?



11) How many groups of 4 can you make with the 36 shapes below?



Answers

Ex. 3

1. 5

2. 4

3. 7

4. 7

5. 4

6. 3

7. 5

8. 14

9. 3

10. 3

11. 9