




Use the shapes provided to answer the questions.

Ex) How many groups of 6 can you make with the 18 shapes below?



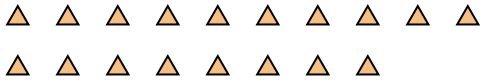
1) How many groups of 3 can you make with the 9 shapes below?



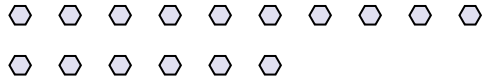
**Answers**

Ex. 3

2) How many groups of 6 can you make with the 18 shapes below?



3) How many groups of 8 can you make with the 16 shapes below?



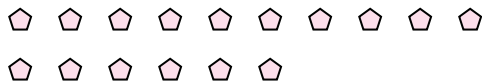
1. \_\_\_\_\_

2. \_\_\_\_\_

4) How many groups of 4 can you make with the 8 shapes below?



5) How many groups of 8 can you make with the 16 shapes below?



3. \_\_\_\_\_

4. \_\_\_\_\_

5. \_\_\_\_\_

6. \_\_\_\_\_

7. \_\_\_\_\_

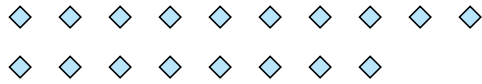
8. \_\_\_\_\_

9. \_\_\_\_\_

6) How many groups of 2 can you make with the 24 shapes below?




7) How many groups of 2 can you make with the 18 shapes below?



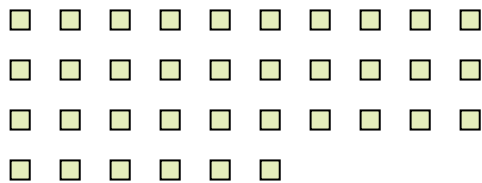
10. \_\_\_\_\_

11. \_\_\_\_\_

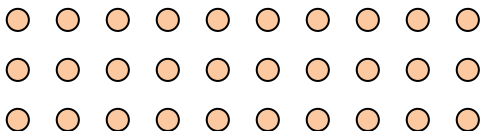
8) How many groups of 9 can you make with the 27 shapes below?



9) How many groups of 9 can you make with the 36 shapes below?



10) How many groups of 6 can you make with the 30 shapes below?




11) How many groups of 3 can you make with the 39 shapes below?





Use the shapes provided to answer the questions.

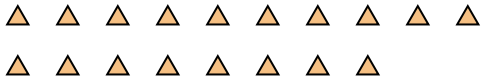
Ex) How many groups of 6 can you make with the 18 shapes below?



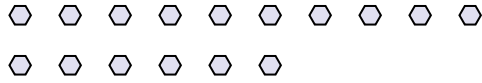
1) How many groups of 3 can you make with the 9 shapes below?



2) How many groups of 6 can you make with the 18 shapes below?



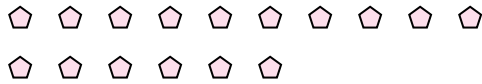
3) How many groups of 8 can you make with the 16 shapes below?



4) How many groups of 4 can you make with the 8 shapes below?



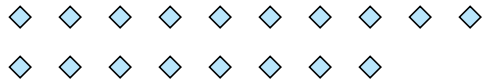
5) How many groups of 8 can you make with the 16 shapes below?




6) How many groups of 2 can you make with the 24 shapes below?



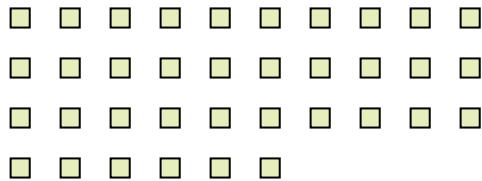
7) How many groups of 2 can you make with the 18 shapes below?



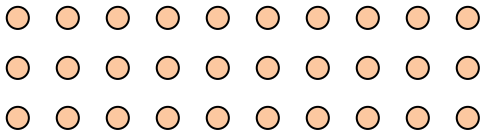
8) How many groups of 9 can you make with the 27 shapes below?



9) How many groups of 9 can you make with the 36 shapes below?



10) How many groups of 6 can you make with the 30 shapes below?



11) How many groups of 3 can you make with the 39 shapes below?



Answers

Ex. 3

1. 3

2. 3

3. 2

4. 2

5. 2

6. 12

7. 9

8. 3

9. 4

10. 5

11. 13