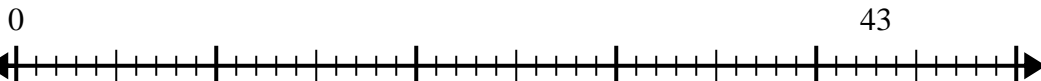


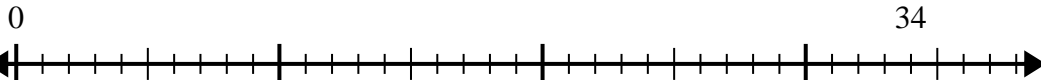


Use the number line to solve the division problem.

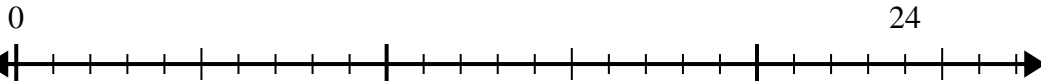
1) $43 \div 5 =$



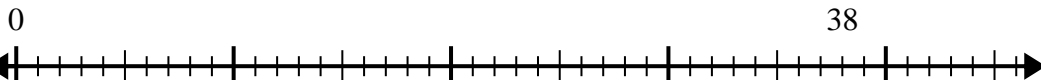
2) $34 \div 5 =$



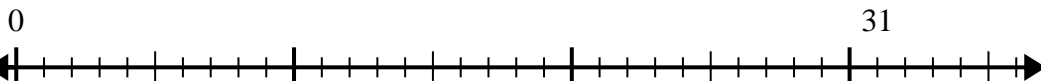
3) $24 \div 5 =$



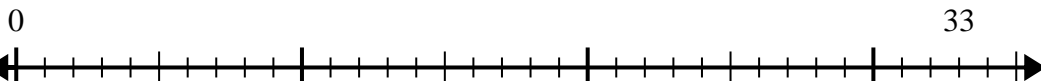
4) $38 \div 8 =$



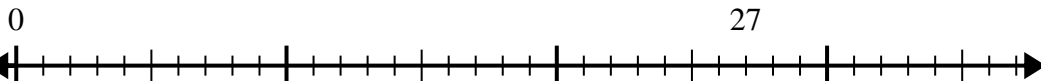
5) $31 \div 6 =$



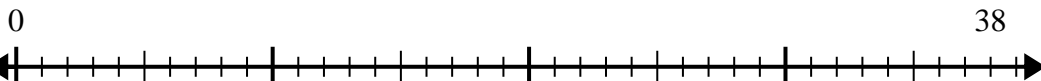
6) $33 \div 4 =$



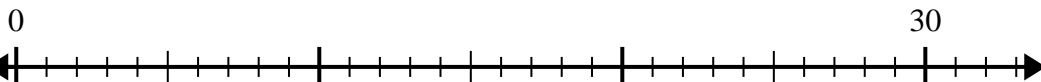
7) $27 \div 6 =$



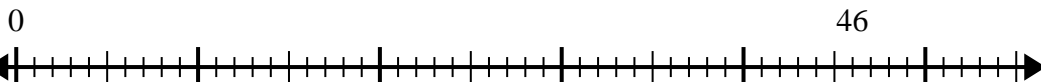
8) $38 \div 7 =$



9) $30 \div 7 =$



10) $46 \div 8 =$



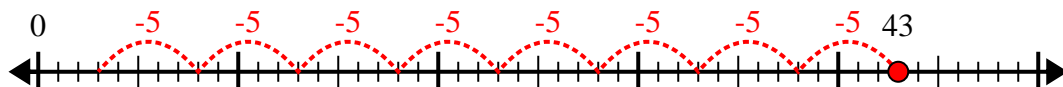
Answers

- 1. _____
- 2. _____
- 3. _____
- 4. _____
- 5. _____
- 6. _____
- 7. _____
- 8. _____
- 9. _____
- 10. _____

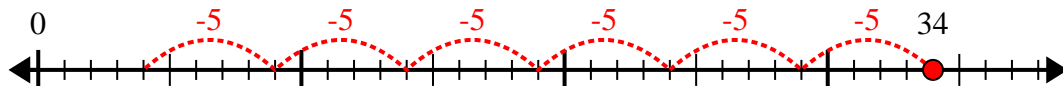


Use the number line to solve the division problem.

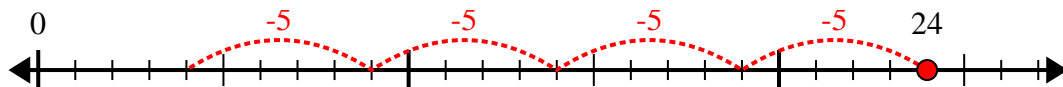
1) $43 \div 5 =$



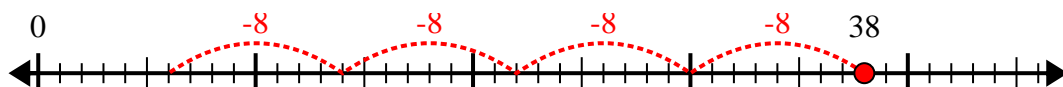
2) $34 \div 5 =$



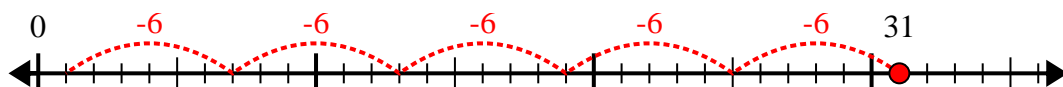
3) $24 \div 5 =$



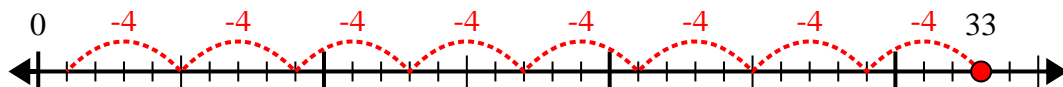
4) $38 \div 8 =$



5) $31 \div 6 =$



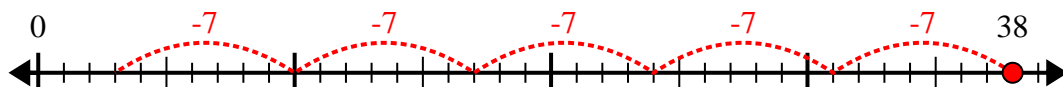
6) $33 \div 4 =$



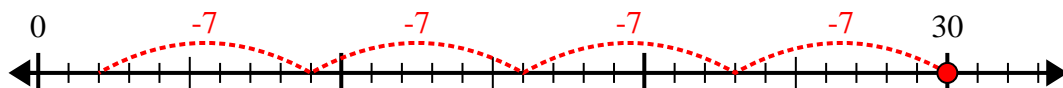
7) $27 \div 6 =$



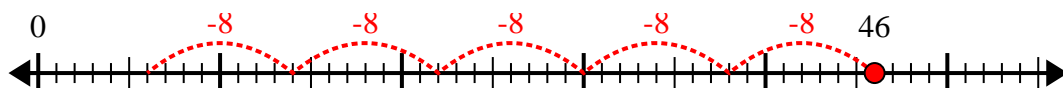
8) $38 \div 7 =$



9) $30 \div 7 =$



10) $46 \div 8 =$



Answers

1. 8r3

2. 6r4

3. 4r4

4. 4r6

5. 5r1

6. 8r1

7. 4r3

8. 5r3

9. 4r2

10. 5r6