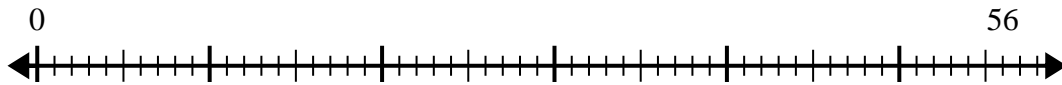




Use the number line to solve the division problem.

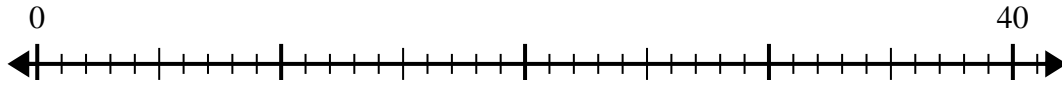
Answers

1) $56 \div 7 =$



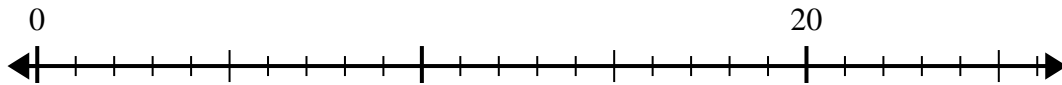
1. _____

2) $40 \div 5 =$



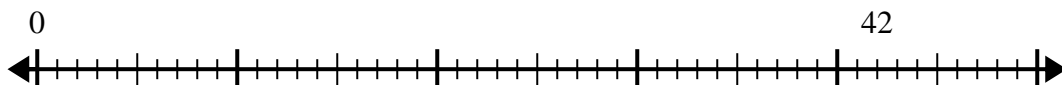
2. _____

3) $20 \div 4 =$



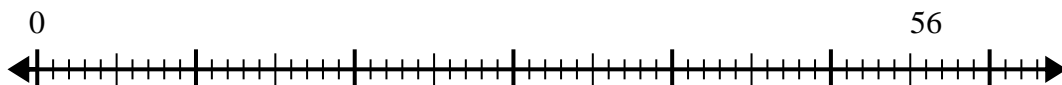
3. _____

4) $42 \div 7 =$



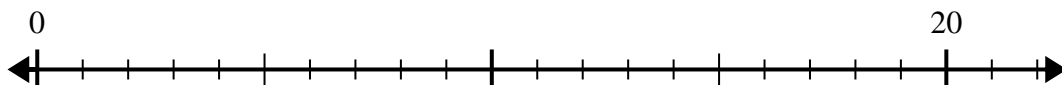
4. _____

5) $56 \div 8 =$



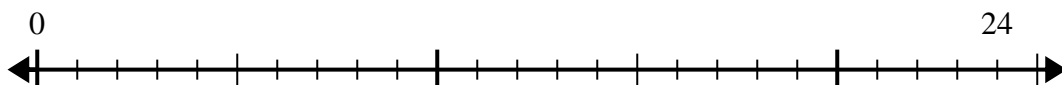
5. _____

6) $20 \div 5 =$



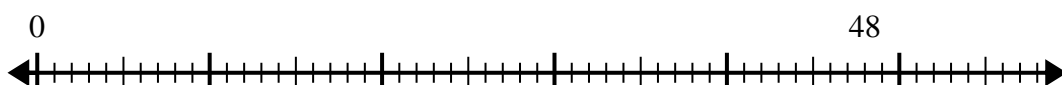
6. _____

7) $24 \div 4 =$



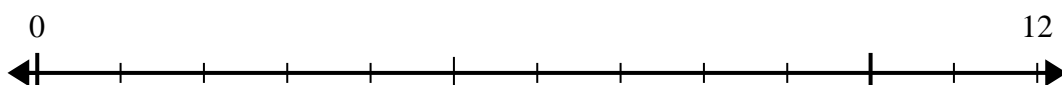
7. _____

8) $48 \div 8 =$



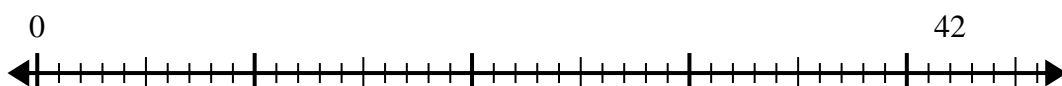
8. _____

9) $12 \div 4 =$



9. _____

10) $42 \div 6 =$

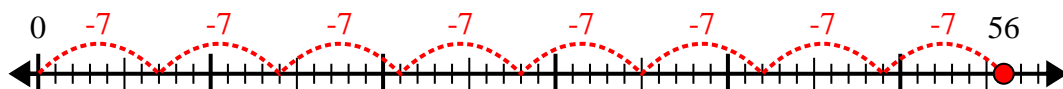


10. _____

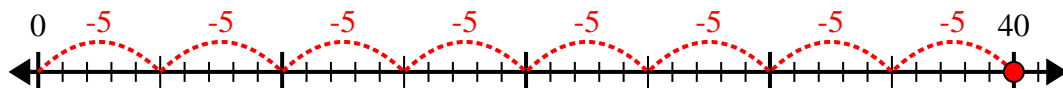


Use the number line to solve the division problem.

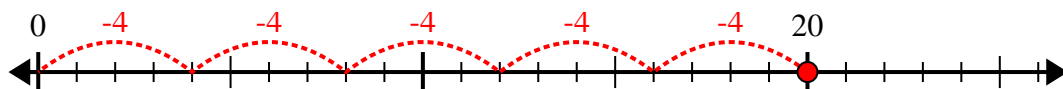
1) $56 \div 7 =$



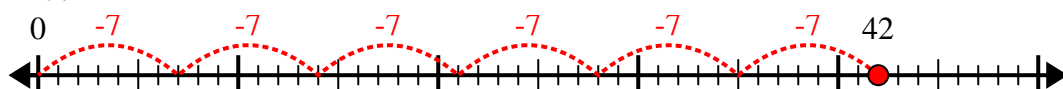
2) $40 \div 5 =$



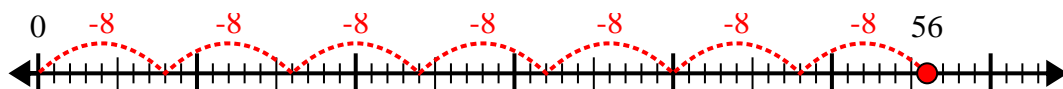
3) $20 \div 4 =$



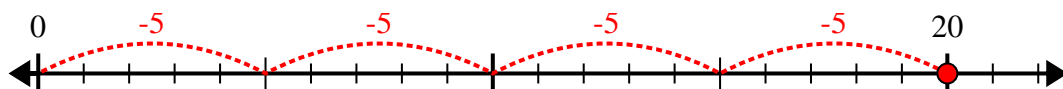
4) $42 \div 7 =$



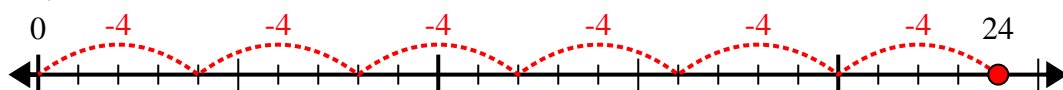
5) $56 \div 8 =$



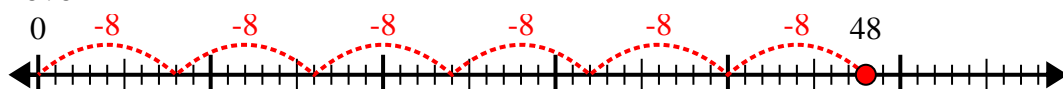
6) $20 \div 5 =$



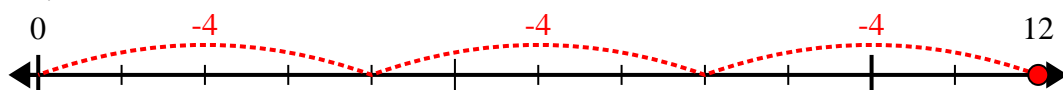
7) $24 \div 4 =$



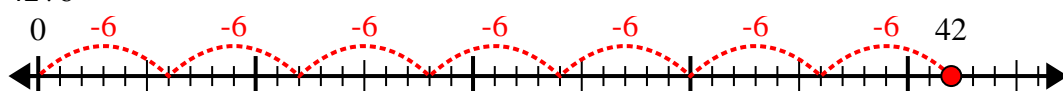
8) $48 \div 8 =$



9) $12 \div 4 =$



10) $42 \div 6 =$



Answers

1. 8

2. 8

3. 5

4. 6

5. 7

6. 4

7. 6

8. 6

9. 3

10. 7