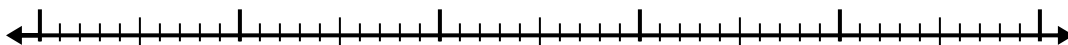


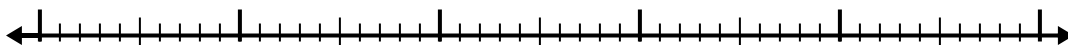


Use the number line to solve each problem.

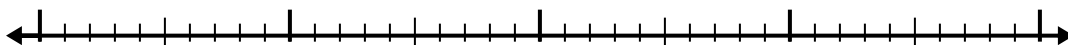
1) $6 - 2.8 =$



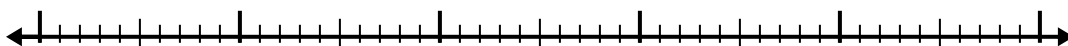
2) $4.8 - 3.2 =$



3) $5.6 - 1.8 =$



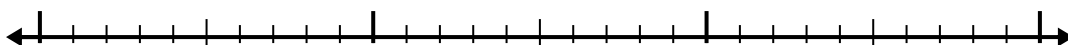
4) $11.3 - 2.7 =$



5) $8.1 - 2.1 =$



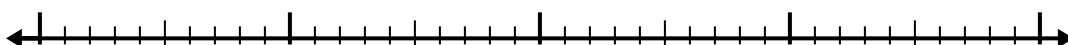
6) $4.1 - 1.8 =$



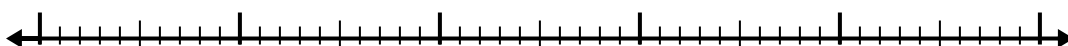
7) $8.9 - 1.6 =$




8) $4.3 - 1.2 =$



9) $8.2 - 2.1 =$



10) $9.2 - 1.2 =$



Answers

1. _____

2. _____

3. _____

4. _____

5. _____

6. _____

7. _____

8. _____

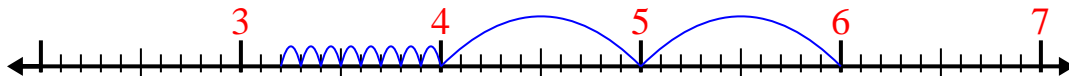
9. _____

10. _____

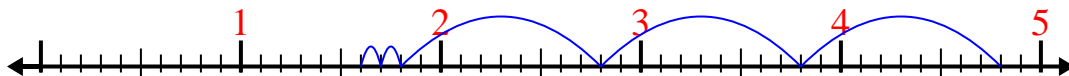


Use the number line to solve each problem.

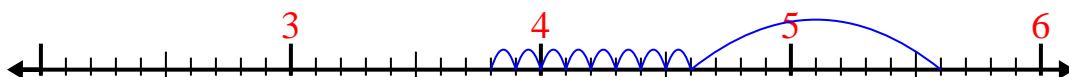
1) $6 - 2.8 =$



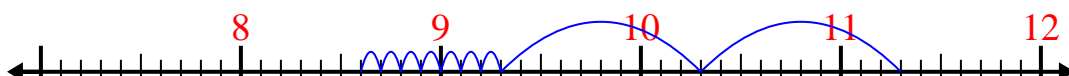
2) $4.8 - 3.2 =$



3) $5.6 - 1.8 =$



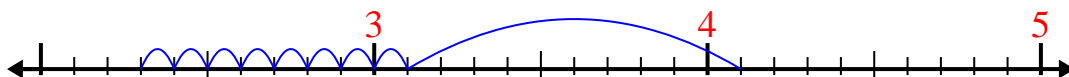
4) $11.3 - 2.7 =$



5) $8.1 - 2.1 =$



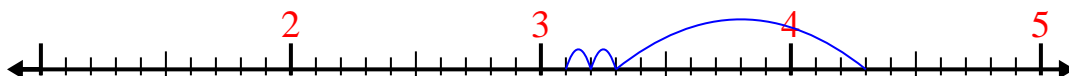
6) $4.1 - 1.8 =$



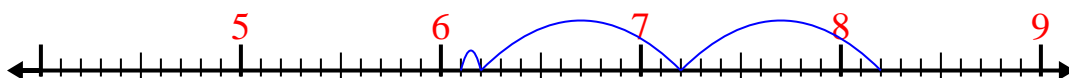
7) $8.9 - 1.6 =$



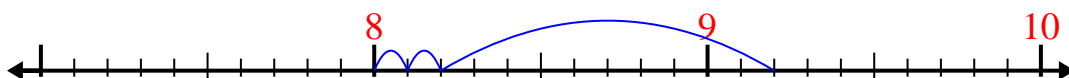
8) $4.3 - 1.2 =$



9) $8.2 - 2.1 =$



10) $9.2 - 1.2 =$

Answers1. 3.22. 1.63. 3.84. 8.65. 66. 2.37. 7.38. 3.19. 6.110. 8