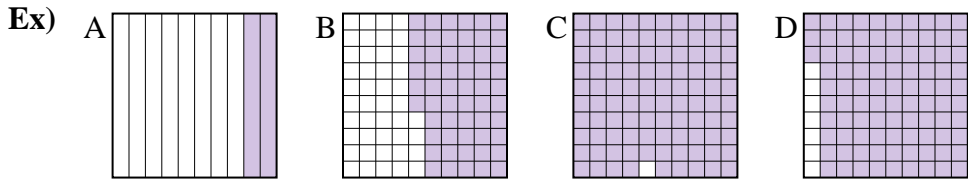




Put the boxes in order from least to greatest based on the shaded amount.

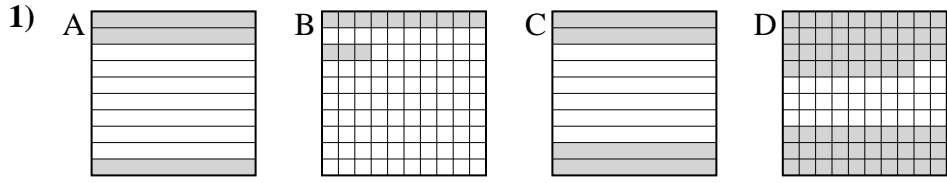
Answers



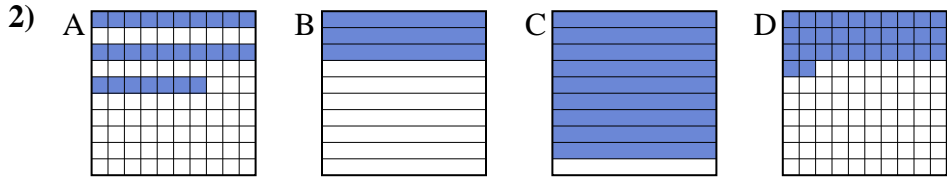
small 0.2 - A
0.56 - B
0.93 - D
 large 0.99 - C

Ex. A,B,D,C

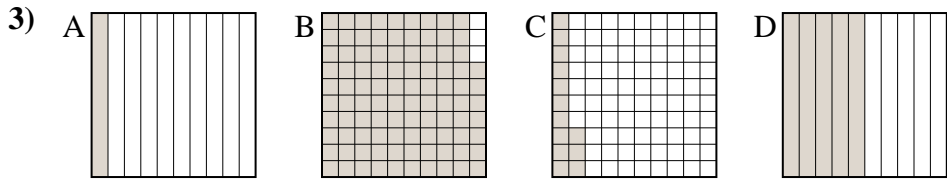
1. _____
2. _____
3. _____
4. _____
5. _____
6. _____
7. _____
8. _____



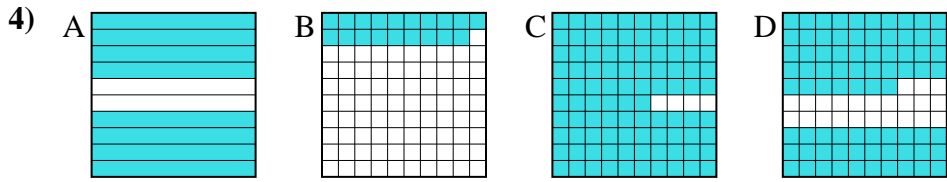
small _____
 large _____



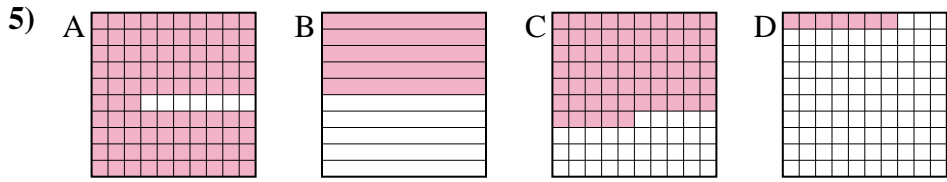
small _____
 large _____



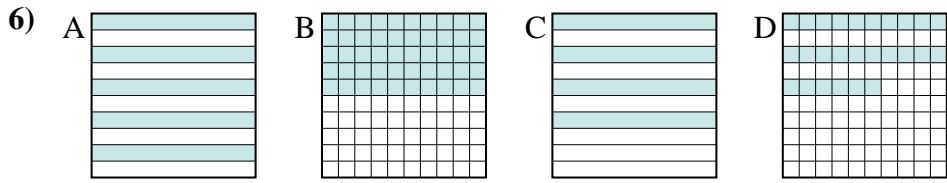
small _____
 large _____



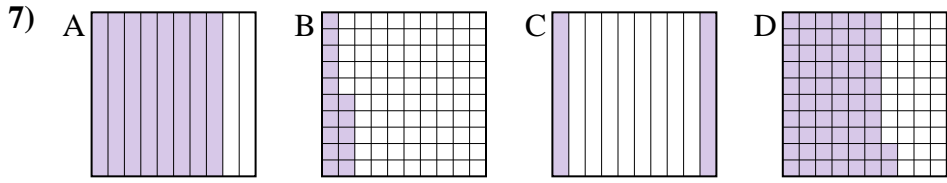
small _____
 large _____



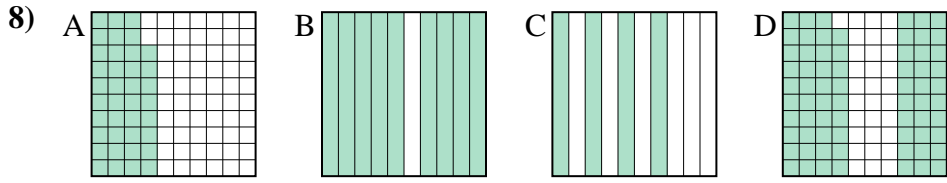
small _____
 large _____



small _____
 large _____



small _____
 large _____



small _____
 large _____



Put the boxes in order from least to greatest based on the shaded amount.

Ex) A B C D small $\frac{0.2}{0.56} - A$
large $\frac{0.93}{0.99} - C$

1) A B C D small $\frac{0.13}{0.3} - B$
large $\frac{0.4}{0.68} - D$

2) A B C D small $\frac{0.27}{0.3} - A$
large $\frac{0.32}{0.9} - D$

3) A B C D small $\frac{0.1}{0.13} - A$
large $\frac{0.5}{0.97} - B$

4) A B C D small $\frac{0.19}{0.77} - B$
large $\frac{0.8}{0.96} - A$

5) A B C D small $\frac{0.07}{0.5} - D$
large $\frac{0.65}{0.93} - C$

6) A B C D small $\frac{0.26}{0.4} - D$
large $\frac{0.5}{0.5} - A$

7) A B C D small $\frac{0.15}{0.2} - B$
large $\frac{0.62}{0.8} - D$

8) A B C D small $\frac{0.38}{0.4} - A$
large $\frac{0.69}{0.9} - B$

Answers

- Ex. A,B,D,C
1. B,A,C,D
2. A,B,D,C
3. A,C,D,B
4. B,D,A,C
5. D,B,C,A
6. D,C,A,A
7. B,C,D,A
8. A,C,D,B