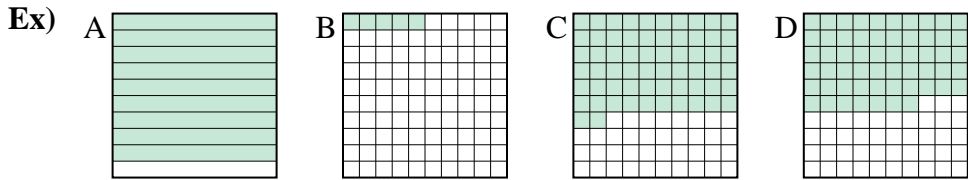




Put the boxes in order from least to greatest based on the shaded amount.

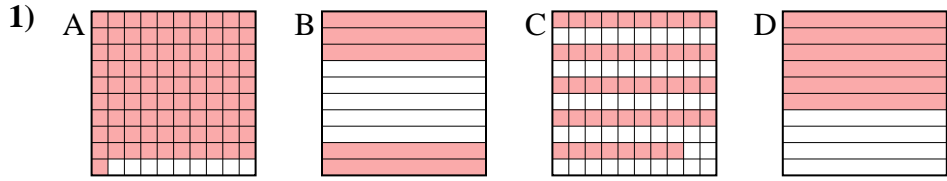
**Answers**



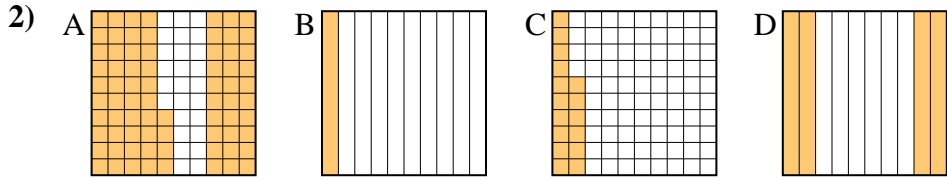
small 0.05 - B  
0.57 - D  
0.62 - C  
 large 0.9 - A

Ex. B,D,C,A

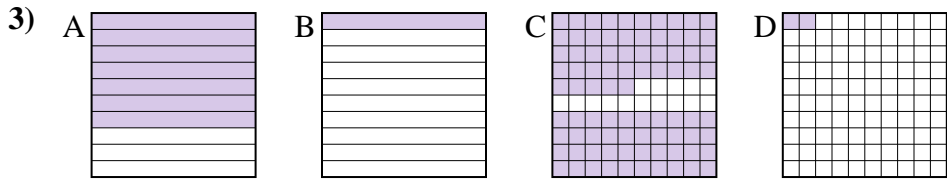
1. \_\_\_\_\_
2. \_\_\_\_\_
3. \_\_\_\_\_
4. \_\_\_\_\_
5. \_\_\_\_\_
6. \_\_\_\_\_
7. \_\_\_\_\_
8. \_\_\_\_\_



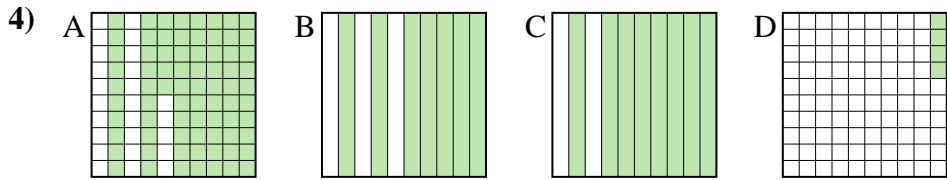
small \_\_\_\_\_  
 \_\_\_\_\_  
 \_\_\_\_\_  
 large \_\_\_\_\_



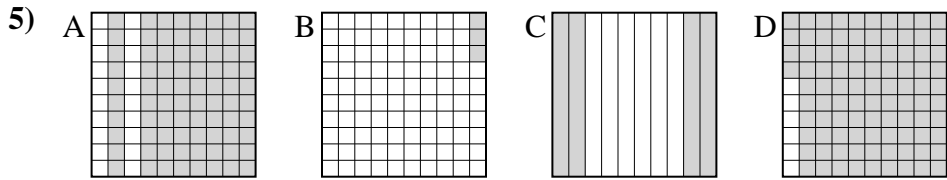
small \_\_\_\_\_  
 \_\_\_\_\_  
 large \_\_\_\_\_



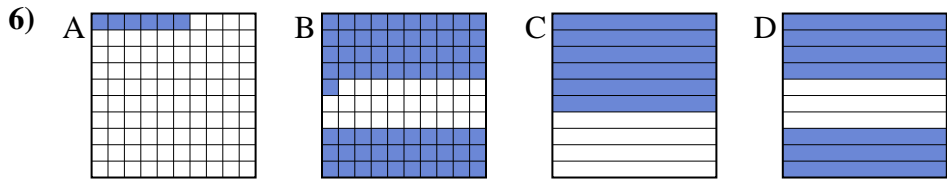
small \_\_\_\_\_  
 \_\_\_\_\_  
 large \_\_\_\_\_



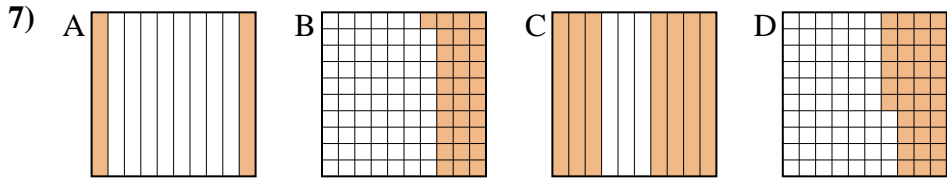
small \_\_\_\_\_  
 \_\_\_\_\_  
 large \_\_\_\_\_



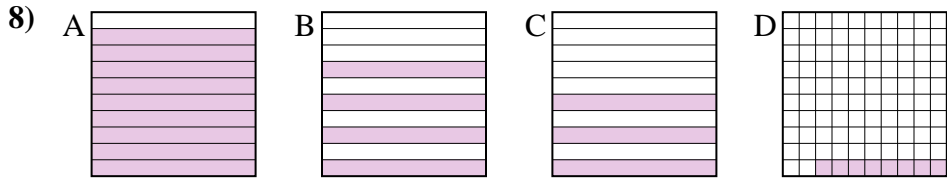
small \_\_\_\_\_  
 \_\_\_\_\_  
 large \_\_\_\_\_



small \_\_\_\_\_  
 \_\_\_\_\_  
 large \_\_\_\_\_




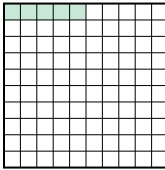


small \_\_\_\_\_  
 \_\_\_\_\_  
 large \_\_\_\_\_

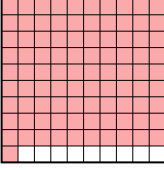

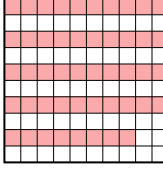



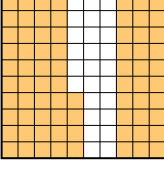
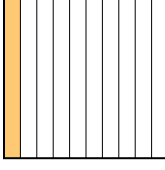
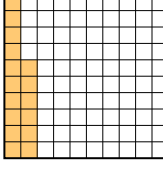
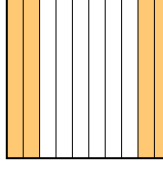
small \_\_\_\_\_  
 \_\_\_\_\_  
 large \_\_\_\_\_

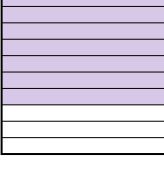

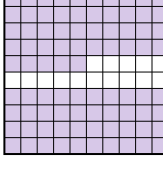






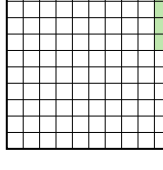
Put the boxes in order from least to greatest based on the shaded amount.



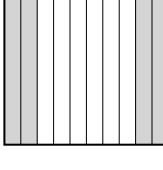

Ex) A  B  C  D  small  $\frac{0.05}{0.57}$  - B  
 $\frac{0.62}{0.9}$  - C  
large  $\frac{0.9}{0.05}$  - A


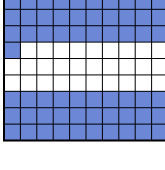


1) A  B  C  D  small  $\frac{0.48}{0.5}$  - C  
 $\frac{0.6}{0.91}$  - D  
large  $\frac{0.91}{0.48}$  - A

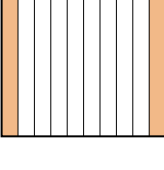
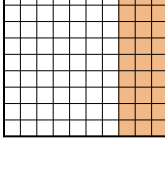
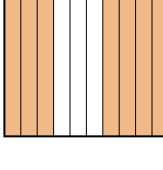
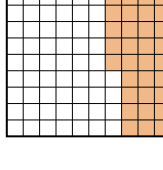
2) A  B  C  D  small  $\frac{0.1}{0.16}$  - B  
 $\frac{0.4}{0.74}$  - D  
large  $\frac{0.74}{0.1}$  - A




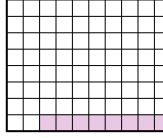
3) A  B  C  D  small  $\frac{0.02}{0.1}$  - D  
 $\frac{0.7}{0.85}$  - A  
large  $\frac{0.85}{0.02}$  - C

4) A  B  C  D  small  $\frac{0.04}{0.7}$  - D  
 $\frac{0.75}{0.8}$  - A  
large  $\frac{0.8}{0.04}$  - C

5) A  B  C  D  small  $\frac{0.03}{0.4}$  - B  
 $\frac{0.8}{0.94}$  - A  
large  $\frac{0.94}{0.03}$  - D

6) A  B  C  D  small  $\frac{0.06}{0.6}$  - A  
 $\frac{0.7}{0.71}$  - D  
large  $\frac{0.71}{0.06}$  - B

7) A  B  C  D  small  $\frac{0.2}{0.31}$  - A  
 $\frac{0.36}{0.7}$  - D  
large  $\frac{0.7}{0.2}$  - C

8) A  B  C  D  small  $\frac{0.08}{0.3}$  - D  
 $\frac{0.4}{0.9}$  - A  
large  $\frac{0.9}{0.08}$  - A

**Answers**

- Ex. **B,D,C,A**
1. **C,B,D,A**
2. **B,C,D,A**
3. **D,B,A,C**
4. **D,B,A,C**
5. **B,C,A,D**
6. **A,C,D,B**
7. **A,B,D,C**
8. **D,C,B,A**