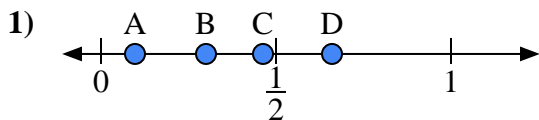


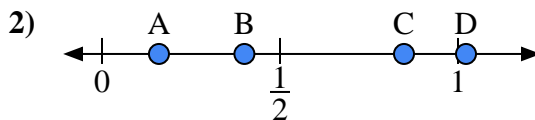


Use the number lines to answer the questions.

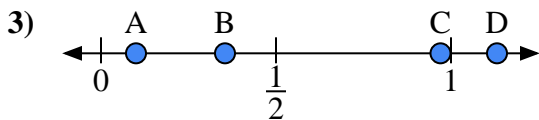
Answers



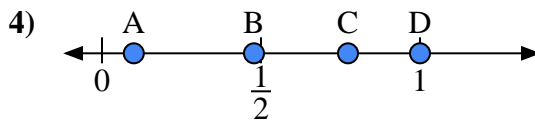
- a) Which letter best represents the location of 0.3?
- b) Which letter best represents the location of 0.66?



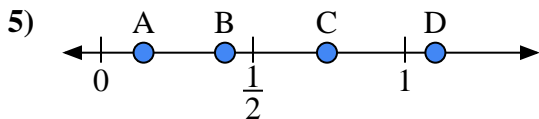
- a) Which letter best represents the location of 0.4?
- b) Which letter best represents the location of 0.16?



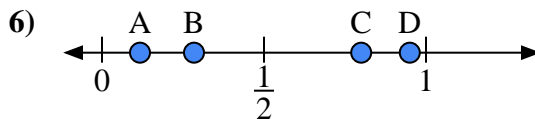
- a) Which letter best represents the location of 0.10?
- b) Which letter best represents the location of 0.97?



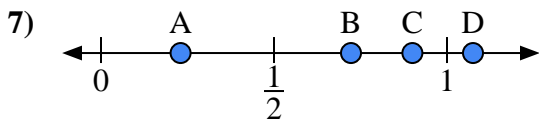
- a) Which letter best represents the location of 1.0?
- b) Which letter best represents the location of 0.10?



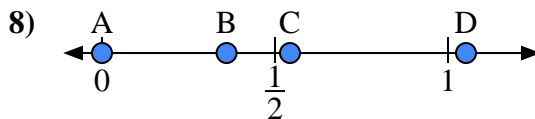
- a) Which letter best represents the location of 1.10?
- b) Which letter best represents the location of 0.14?



- a) Which letter best represents the location of 0.80?
- b) Which letter best represents the location of 0.95?



- a) Which letter best represents the location of 0.9?
- b) Which letter best represents the location of 0.23?

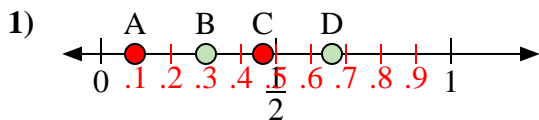


- a) Which letter best represents the location of 0.00?
- b) Which letter best represents the location of 0.36?

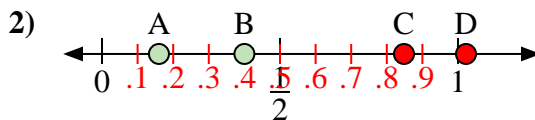
- 1. _____
- 2. _____
- 3. _____
- 4. _____
- 5. _____
- 6. _____
- 7. _____
- 8. _____



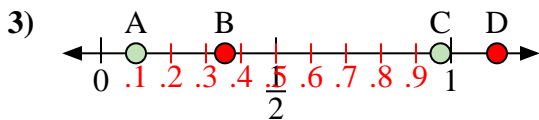
Use the number lines to answer the questions.



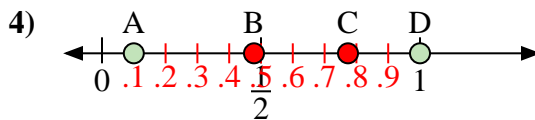
- a) Which letter best represents the location of 0.3?
- b) Which letter best represents the location of 0.66?



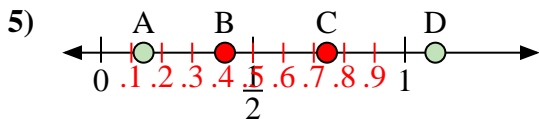
- a) Which letter best represents the location of 0.4?
- b) Which letter best represents the location of 0.16?



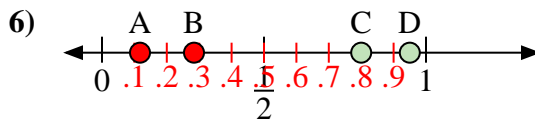
- a) Which letter best represents the location of 0.10?
- b) Which letter best represents the location of 0.97?



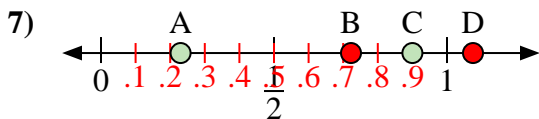
- a) Which letter best represents the location of 1.0?
- b) Which letter best represents the location of 0.10?



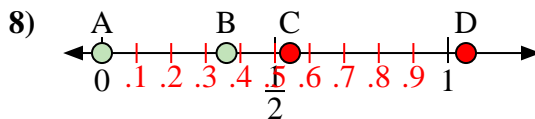
- a) Which letter best represents the location of 1.10?
- b) Which letter best represents the location of 0.14?



- a) Which letter best represents the location of 0.80?
- b) Which letter best represents the location of 0.95?



- a) Which letter best represents the location of 0.9?
- b) Which letter best represents the location of 0.23?



- a) Which letter best represents the location of 0.00?
- b) Which letter best represents the location of 0.36?

Answers

- 1. B D
- 2. B A
- 3. A C
- 4. D A
- 5. D A
- 6. C D
- 7. C A
- 8. A B