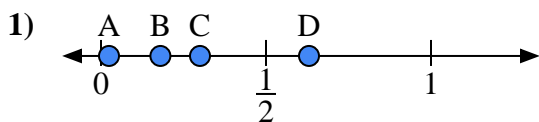


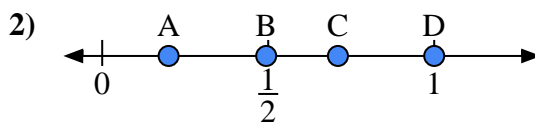


Use the number lines to answer the questions.

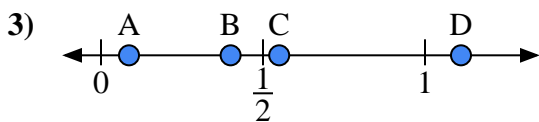
**Answers**



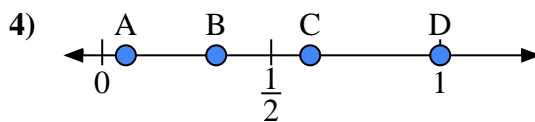
- a) Which letter best represents the location of 0.3?
- b) Which letter best represents the location of 0.18?



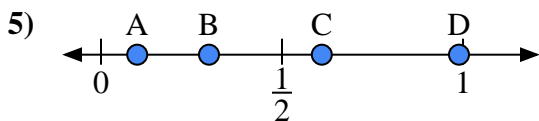
- a) Which letter best represents the location of 0.2?
- b) Which letter best represents the location of 0.71?



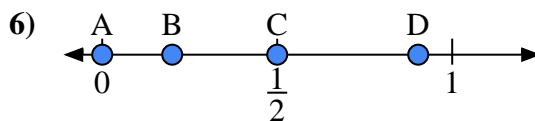
- a) Which letter best represents the location of 0.4?
- b) Which letter best represents the location of 0.55?



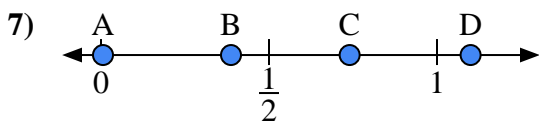
- a) Which letter best represents the location of 1.0?
- b) Which letter best represents the location of 0.07?



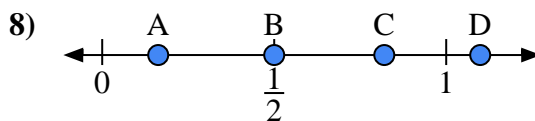
- a) Which letter best represents the location of 0.10?
- b) Which letter best represents the location of 0.61?



- a) Which letter best represents the location of 0.00?
- b) Which letter best represents the location of 0.50?



- a) Which letter best represents the location of 1.10?
- b) Which letter best represents the location of 0.74?

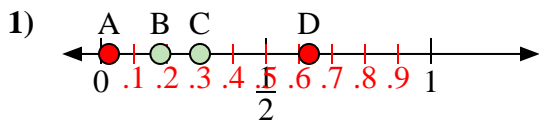


- a) Which letter best represents the location of 0.5?
- b) Which letter best represents the location of 0.82?

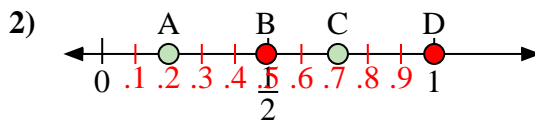
- 1. \_\_\_\_\_
- 2. \_\_\_\_\_
- 3. \_\_\_\_\_
- 4. \_\_\_\_\_
- 5. \_\_\_\_\_
- 6. \_\_\_\_\_
- 7. \_\_\_\_\_
- 8. \_\_\_\_\_



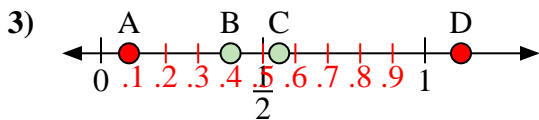
Use the number lines to answer the questions.



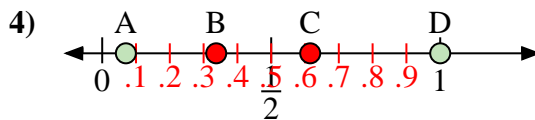
- a) Which letter best represents the location of 0.3?
- b) Which letter best represents the location of 0.18?



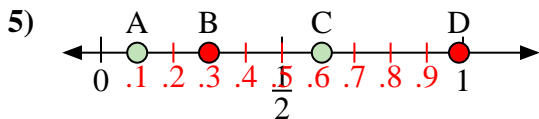
- a) Which letter best represents the location of 0.2?
- b) Which letter best represents the location of 0.71?



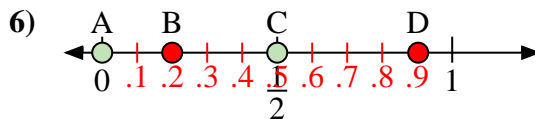
- a) Which letter best represents the location of 0.4?
- b) Which letter best represents the location of 0.55?



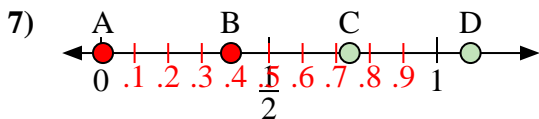
- a) Which letter best represents the location of 1.0?
- b) Which letter best represents the location of 0.07?



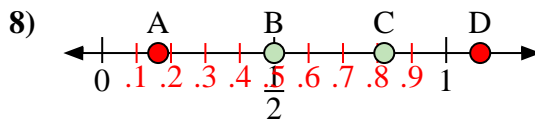
- a) Which letter best represents the location of 0.10?
- b) Which letter best represents the location of 0.61?



- a) Which letter best represents the location of 0.00?
- b) Which letter best represents the location of 0.50?



- a) Which letter best represents the location of 1.10?
- b) Which letter best represents the location of 0.74?



- a) Which letter best represents the location of 0.5?
- b) Which letter best represents the location of 0.82?

**Answers**

- 1. C B
- 2. A C
- 3. B C
- 4. D A
- 5. A C
- 6. A C
- 7. D C
- 8. B C