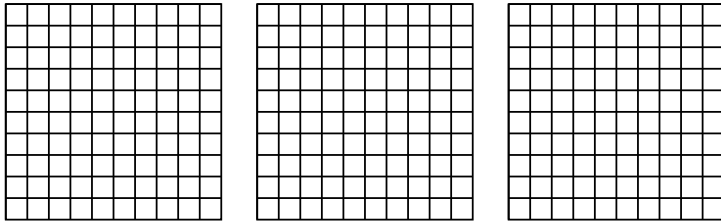




Use the visual model to solve each problem.

Answers

1)  $3 \times 0.71 =$

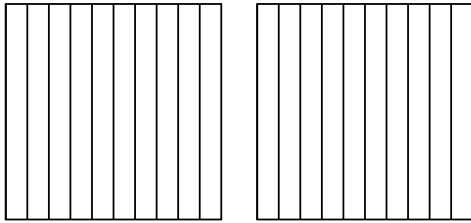


1. \_\_\_\_\_

2. \_\_\_\_\_

3. \_\_\_\_\_

2)  $2 \times 0.3 =$

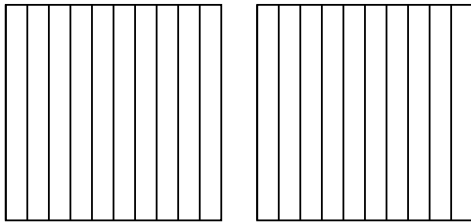


4. \_\_\_\_\_

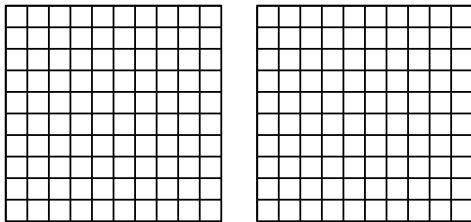
5. \_\_\_\_\_

6. \_\_\_\_\_


3)  $2 \times 0.4 =$



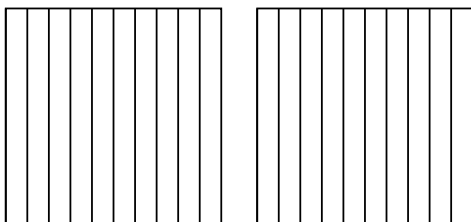
4)  $2 \times 0.36 =$



5)  $3 \times 0.40 =$



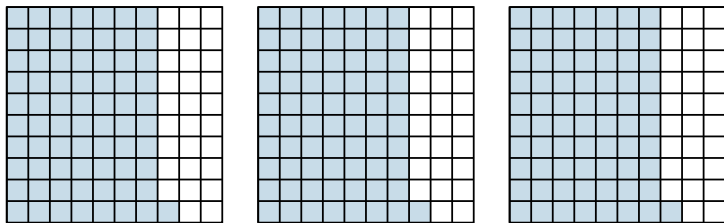
6)  $2 \times 0.8 =$



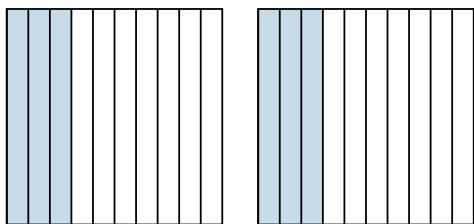


Use the visual model to solve each problem.

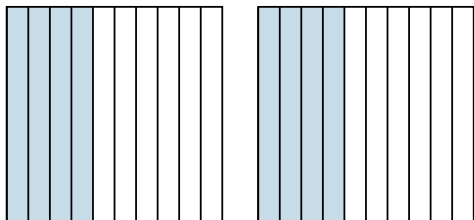
1)  $3 \times 0.71 =$



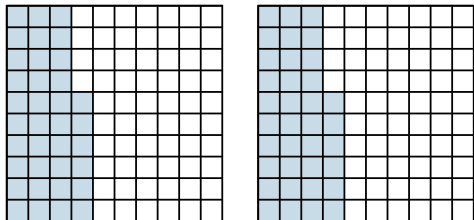
2)  $2 \times 0.3 =$



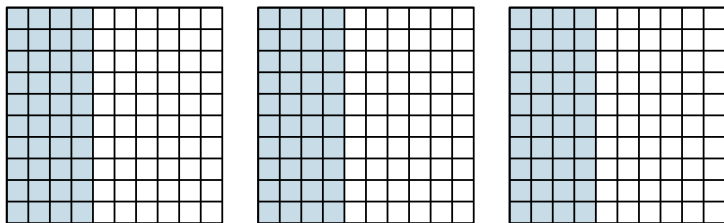
3)  $2 \times 0.4 =$



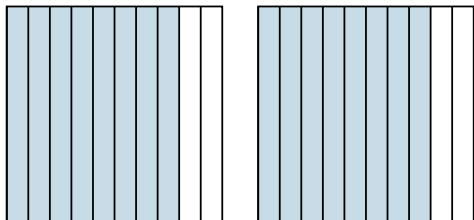
4)  $2 \times 0.36 =$



5)  $3 \times 0.40 =$



6)  $2 \times 0.8 =$



Answers

1.  $\frac{213}{100} = 2.13$

2.  $\frac{6}{10} = 0.6$

3.  $\frac{8}{10} = 0.8$

4.  $\frac{72}{100} = 0.72$

5.  $\frac{120}{100} = 1.2$

6.  $\frac{16}{10} = 1.6$